



MADE EASY

India's Best Institute for IES, GATE & PSUs

GATE 2021

INSTRUMENTATION ENGINEERING

Questions & Solutions

Exam held on 06/02/2021



Scroll
down
to view

MADE EASY Delhi : 44-A/1, Kalu Sarai, New Delhi - 110016 | Ph : 011-45124612, 9958995830

• Delhi • Hyderabad • Noida • Bhopal • Jaipur • Lucknow • Indore • Pune • Bhubaneswar • Kolkata • Patna



www.madeeasy.in

If you find any discrepancy in question or solution, kindly write us at : info@madeeasy.in mentioning stream, date of exam and session.

SECTION-A

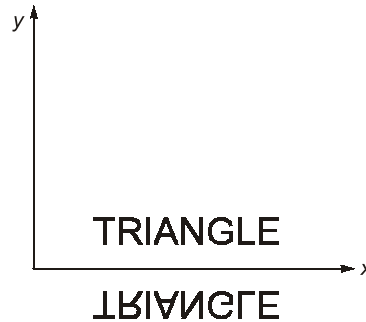
GENERAL APTITUDE

Q.1 The mirror image of the about text about the x -axis is



- (a) TRIANGLE
- (b) TRIANGLE
- (c) TRIANGLE
- (d) TRIANGLE

Ans. (b)

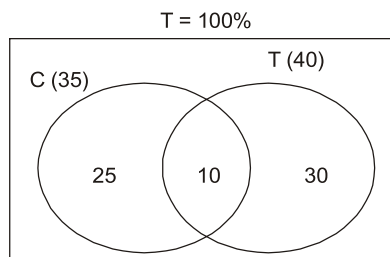


End of Solution

Q.2 In a company, 35% of the employees drink coffee, 40% of the employees drink tea and 10% of the employees drink both tea and coffee. What % of employees drink neither tea nor coffee?

- (a) 15
- (b) 25
- (c) 35
- (d) 40

Ans. (c)



Percent of employees drink neither tea nor coffee = $100 - 25 - 10 - 35 = 35$

End of Solution

Q.3 Humans have the ability to construct worlds entirely in their minds, which don't exist in the physical world. So far as we know, no other species possesses this ability. This skill is so important that we have different words to refer to its different flavors, such as imagination, invention and innovation.

Based on the above passage, which one of the following is TRUE?

- (a) The terms imagination, invention and innovation refer to unrelated skills.
- (b) Imagination, invention and innovation are unrelated to the ability to construct mental worlds.
- (c) We do not know of any species other than humans who possess the ability to construct mental worlds.
- (d) No species possess the ability to construct worlds in their minds.

Ans. (c)

Option (a) and (b) are weakened by the word 'UNRELATED SKILLS'. Option (d) is weakened by the expression no species possess the ability.

Hence, answer is (c) which reflects the information given in the passage.

End of Solution

Q.4 Four persons P , Q , R and S are to be seated in a row. All facing the same direction, but not necessarily in the same order. P and R cannot sit adjacent to each other. S should be seated to the right of Q . The number of distinct seating arrangements possible is:

- (a) 4
- (b) 2
- (c) 8
- (d) 6

Ans. (d)

Following cases can be

PQSR, RQSP, QPSR, QRSP, RQPS and PQRS

and $\begin{bmatrix} P & R \\ R & P \end{bmatrix}$ not possible.

End of Solution

Q.5 Statement: Either P marries Q or X marries Y .

Among the options below, the logical NEGATION of the above statement is:

- (a) P does not marry Q and X marries Y .
- (b) P marries Q and X marries Y .
- (c) X does not marry Y and P marries Q .
- (d) Neither P marries Q nor X marries Y .

Ans. (b)

The statement says only one of these two actions will happen, its negation should be a confirmed action. Hence option (b) is the answer.

End of Solution

Q.6 A function λ , is defined by

$$\lambda(p, q) = \begin{cases} (p - q)^2, & \text{if } p \geq q \\ p + q, & \text{if } p < q \end{cases}$$

The value of expression $\frac{\lambda[-(-3+2), (-2+3)]}{[-(-2+1)]}$ is:

- (a) -1 (b) 0
(c) $\frac{16}{3}$ (d) 16

Ans. (b)

$$\frac{\lambda(-(-3+2), (-2+3))}{[-(-2+1)]} = \lambda\left(\frac{1}{1}, 1\right) = \lambda(1, 1)$$

So, 1st definition will be applicable as $p = q$.
Hence, $\lambda(1, 1) = (1 - 1)^2 = 0$

End of Solution

Q.7 \oplus and \odot are two operators on numbers p and q such that

$$p \oplus q = \frac{p^2 + q^2}{pq} \text{ and } p \odot q = \frac{p^2}{q};$$

If $x \oplus y = 2 \odot 2$, then $x =$

- (a) y (b) $\frac{y}{2}$
(c) $\frac{3y}{2}$ (d) $2y$

Ans. (a)

$$x \oplus y = 2 \odot 2$$

$$\frac{x^2 + y^2}{xy} = \frac{2^2}{2}$$

$$x^2 + y^2 = 2xy$$

$$(x - y)^2 = 0$$

$$x = y$$

End of Solution



MADE EASY

India's Best Institute for IES, GATE & PSUs*

Under the leadership of

Mr. B. Singh

Chairman & Managing Director



- Well Planned Curriculum
- Systematic Subject Sequence
- Comprehensive Study Materials

ADMISSION OPEN

ESE + GATE 2022

GATE 2022

- ✓ Classes by India's highly proficient and experienced top faculties.
- ✓ Similar teaching pedagogy in online and offline courses.
- ✓ Concept practice through workbooks and updated theory books.
- ✓ Thoroughly revised, updated study materials as per latest exam pattern.
- ✓ Systematic subject sequence and time bound completion of syllabus.
- ✓ Assessment of performance through subject-wise tests.
- ✓ Professionally managed, interactive classrooms and well equipped infrastructure.

LIVE CLASSES of MADE EASY Prime

Medium : Hindi + English

Morning Batch from 18th Feb, 2021

Time: 8.30 AM - 11.30 AM

Medium : English

Evening Batch from 25th Feb, 2021

Time: 5.30 PM - 8.30 PM

Scan to download app



android



iOS

☎ 8851176822, 9958995830
 🌐 www.madeeasyprime.com

OFFLINE CLASSES

Regular Batches

First Batch

from 22nd Feb, 2021

Second Batch

from 1st Mar, 2021

Third Batch

from 18th Mar, 2021

Weekend Batches

Commencing

from 21st Feb, 2021

MADE EASY Delhi

☎ 011-45124612, 9958995830
 🌐 www.madeeasy.in

Easy EMI
options available

Avail 10 % Discount till **28th Feb, 2021**
on ESE & GATE long term Online/Offline Courses

**COVID 19
Security Features**

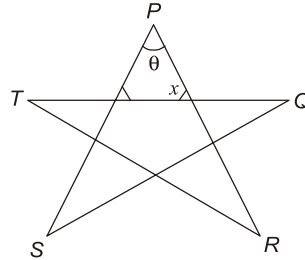
- Spacious classrooms that enable social distancing.
- Institute is fully sanitized and hygienic.

Corporate Office: 44-A/1, Kalu Sarai, Sarvapriya Vihar, Near Hauz Khas Metro Station, New Delhi-110016

MADE EASY Centres: Delhi | Hyderabad | Noida | Jaipur | Lucknow | Bhopal | Bhubaneswar | Pune | Indore | Patna | Kolkata

Admission open at all MADE EASY centres • For details, visit: www.madeeasy.in

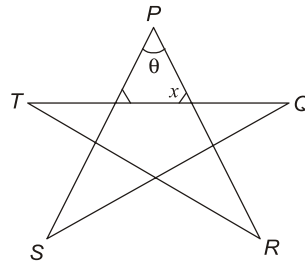
Q.8 Five lines segments of equal lengths, PR , PS , QS , QT and RT as used to form a star shown in the figure above.



The value of θ , in degrees, is _____.

- (a) 72 (b) 108
(c) 36 (d) 45

Ans. (c)



Sum of angle formed at the pentagon = 540°

$$\text{Each angle of pentagon} = \frac{540}{6} = 108^\circ$$

$$\angle x = 180 - 108 = 72^\circ$$

Sum of angle of triangle = 180°

$$72^\circ + 72^\circ + \theta = 180^\circ$$

$$\theta = 36^\circ$$

End of Solution

Q.9 Consider two rectangular sheets, Sheet M and Sheet N of dimensions $6 \text{ cm} \times 4 \text{ cm}$ each.

Folding operation 1: The sheet is folded into half by joining the short edges of the current shape,

Folding operation 2: The sheet is folded into half by joining the long edges of the current shape.

Folding operation 1 is carried out on Sheet M three times,

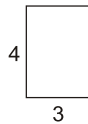
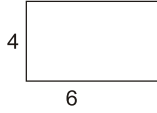
Folding operation 2 is carried out on Sheet N three times,

The ratio of perimeters of the final folded shape of Sheet N to the final folded shape of Sheet M is _____.

- (a) 13 : 7 (b) 7 : 5
(c) 5 : 13 (d) 3 : 2

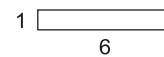
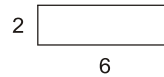
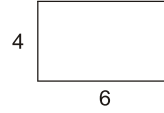
Ans. (a)

Operation 1 on M



$$(\text{Perimeter})_M = 2(2 + 1.5) = 7$$

Operation 2 on N



$$(\text{Perimeter})_N = 2(0.5 + 6) = 13$$

$$\text{Required ratio} = \frac{13}{7}$$

End of Solution

Q.10 Getting to the top is _____ than staying on top.

- (a) easiest (b) more easy
(c) easier (d) much easy

Ans. (c)

When the comparison is between two things we use the second degree of the adjective. The degree form of easy are-(easy-easier-easiest).

End of Solution



SECTION-B

TECHNICAL

Q.1 A $10\frac{1}{2}$ digit Counter-timer is set in the 'frequency mode' of operation (with $T_s = 1s$).

For a specific input, the reading obtained is 1000. Without disconnecting this input, the Counter-timer is changed to operate in the 'Period mode' and the range selected is microseconds (μs , with $f_s = 1 \text{ MHz}$). The counter will then display.

- (a) 0 (b) 100
(c) 10 (d) 1000

Ans. (d)

When scale set on 1s, reading = 1000

$$\text{Time period} = \frac{1}{1000} = 10^{-3} \text{ sec}$$

$$\text{If new range is 1 MHz, Reading} = \frac{10^{-3}}{10^{-6}} = 1000$$

End of Solution

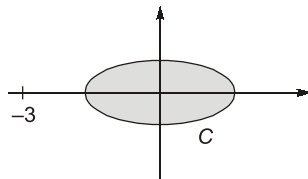
Q.2 Let $f(z) = \frac{1}{z^2 + 6z + 9}$ defined in the complex plane. The integral $\oint_C f(z) dz$ over the contour of a circle c with center at the origin and unit radius is _____.

Ans. (0)

$$f(z) = \frac{1}{z^2 + 6z + 9} = \frac{1}{(z + 3)^2}$$

Poles of $f(z)$, $(z + 3)^2 = 0 \Rightarrow z = -3$ (Double pole)

$C : |z| = 1$



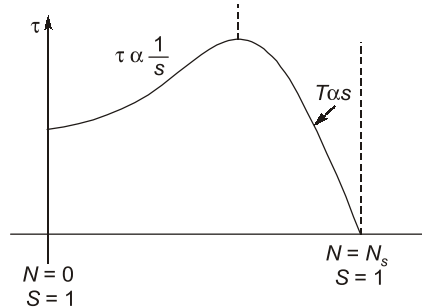
\therefore Pole lies outside 'C' so by CIT, $\oint_C f(z) dz = 0$

End of Solution

Q.3 A slip-ring induction motor is expected to be started by adding extra resistance in the rotor circuit. The benefit that is derived by adding extra resistance in the rotor circuit in comparison to the rotor being shorted is

- (a) The power factor at start will be lower.
- (b) The starting current is higher.
- (c) The starting torque would be higher.
- (d) The losses at starting would be lower.

Ans. (c)



$$\text{For power factor } \cos \theta_2 = \frac{R_2}{Z_2} = \frac{R_2}{R_2 + jsX_2}$$

$$\text{at starting } (\cos \theta_2)_{\text{starting}} = \frac{R_2}{R_2 + X_2}$$

$$\text{Order of } R_2/\text{phase} = 0.1 \text{ to } 0.2\Omega$$

$$\text{Order of } X_2/\text{phase} = 1.5\Omega \text{ to } 2\Omega$$

$$R_2^2 \lll X_2^2$$

So $R_2^2 \rightarrow$ neglected

$$\cos \theta_2 = \frac{R_2}{X_2}$$

As $R_2 \uparrow$ so power factor increases.

Hence option (a) is wrong.

$$T_s = \frac{180}{2\pi N_s} \times \frac{E_2^2 R_2}{R_2^2 + X_2^2}$$

So, R_2^2 term is neglected

$$T_s = \frac{180}{2\pi N_s} \frac{E_2^2 R_2}{X_2^2}$$

So, starting torque increases as it is directly proportional to rotor resistance.

End of Solution

Q.4 Consider the sequence, $x_n = 0.5x_{n-1} + 1$, $n = 1, 2, \dots$ with $x_0 = 0$. Then $\lim_{n \rightarrow \infty} x_n$ is

- (a) 2
- (b) 1
- (c) 0
- (d) ∞

Ans. (a)

$$x_n = \frac{x_{n-1}}{2} + 1 \Rightarrow x_1 = 1, x_2 = \frac{3}{2}, x_3 = \frac{7}{4}, x_4 = \frac{15}{8}, x_5 = \frac{31}{16}$$

Sequence is $1, \frac{3}{2}, \frac{7}{4}, \frac{15}{8}, \frac{31}{16}, \dots, \frac{2^n - 1}{2^{n-1}}, \dots$

i.e.,
$$x_n = \frac{2^n - 1}{2^{n-1}} = \frac{2^n - 1}{2^n / 2} = 2 \left[1 - \frac{1}{2^n} \right]$$

$$\lim_{n \rightarrow \infty} x_n = \lim_{n \rightarrow \infty} 2 \left(1 - \frac{1}{2^n} \right) = 2 \left(1 - \frac{1}{\infty} \right) = 2$$

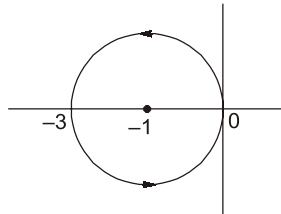
End of Solution

Q.5 Taking N as positive for clockwise encirclement, otherwise negative, the number of encirclements N of $(-1, 0)$ in the Nyquist plot of $G(s) = \frac{3}{s-1}$ is _____.

Ans. (-1)

$$\text{OLTF} = \frac{3}{s-1}$$

Nyquist plot



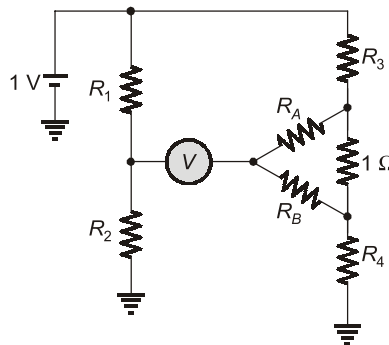
Since N is +ve in CW and -ve in ACW as in the question,

$$\therefore N = -1$$

End of Solution

Q.6 In the bridge circuit shown, the voltmeter V showed zero when the value of the resistors are:

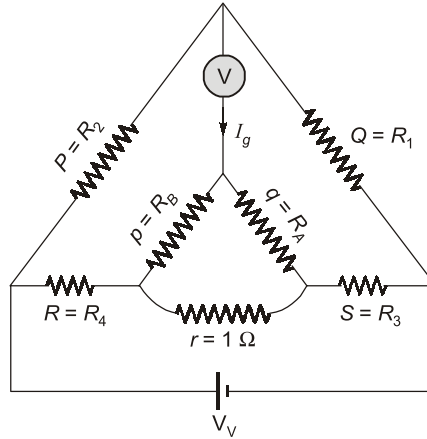
$R_1 = 100 \Omega$, $R_2 = 110 \Omega$, and $R_3 = 90 \Omega$. If $(R_1/R_2) = (R_A/R_B)$, the value of R_4 in ohm is _____.



Ans. (99)

By redrawing CKT, we can get, "KELVIN DOUBLE BRIDGE"

Given that, $R_1 = 100 \Omega$, $R_2 = 110 \Omega$, $R_3 = 90 \Omega$



$$\text{Balance condition, } R = \frac{P}{Q} \times S + \frac{qr}{p+q+r} \left[\frac{P}{Q} - \frac{p}{q} \right]$$

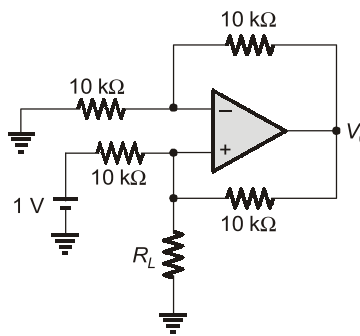
By comparing, $\frac{R_1}{R_2} = \frac{R_A}{R_B} \Rightarrow \frac{P}{Q} = \frac{p}{q} \Rightarrow R = \frac{P}{Q} \times S$

$\therefore R_H = \frac{R_2}{R_1} \times R_3 = \frac{110}{100} \times 90 \Rightarrow R_4 = 99 \Omega$

x

End of Solution

Q.7 The output V_o of the ideal OpAmp used in the circuit shown below is 5 V. Then the value of resistor R_L in kilo ohm ($k\Omega$) is



(a) 2.5

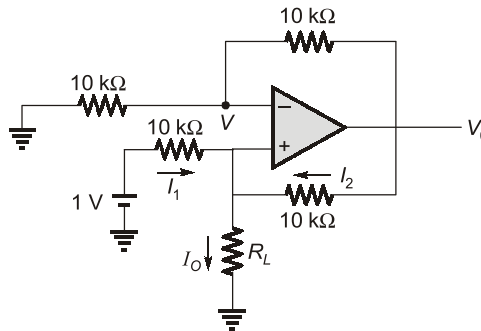
(b) 25

(c) 5

(d) 50

Ans. (b)

Given, $V_o = 5\text{ V}$



$$V = \frac{V_o \times 10}{10 + 10} = \frac{V_o}{2} = 2.5\text{V}$$

Using virtual short property,

$$V^+ = V^- = 2.5\text{ V}$$

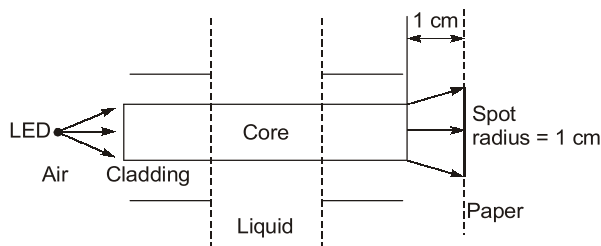
by KCL, $I_1 + I_2 = I_o$

$$\frac{1 - 2.5}{10} + \frac{5 - 2.5}{10} = \frac{2.5}{R_L}$$

$$\Rightarrow R_L = 25\text{ k}\Omega$$

End of Solution

Q.8 In the figure shown, a large multimode fiber with $n_{\text{core}} = 1.5$ and $n_{\text{clad}} = 1.2$ is used for sensing. A portion with the cladding removed passes through a liquid with refractive index n_{liquid} . An LED is used to illuminate the fiber from one end and a paper is placed on the other end, 1 cm from the end of the fiber. The refractive index n_{liquid} of the liquid (rounded off to two decimal places) is _____.



Ans. (1.32)

Applying Snell's law at point A,

$$n_1 \sin \theta_i = n_0 \sin \theta$$

$$1.5 \sin \theta_i = 1 \times \sin 45^\circ$$

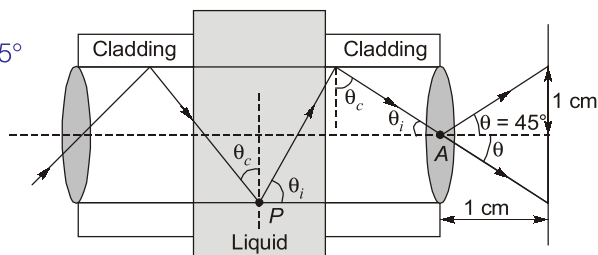
$$\sin \theta_i = 0.47$$

$$\theta_i = 28.12^\circ$$

$$\therefore \theta_c = 90^\circ - \theta_i$$

$$\theta_c = 61.87^\circ$$

Applying Snell's law at point P,



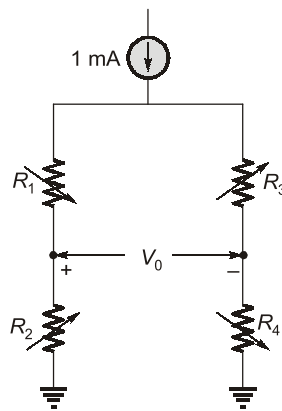
$$n_1 \sin \theta_c = n_{\text{liquid}}$$

$$1.5 \sin 61.87 = n_{\text{liquid}}$$

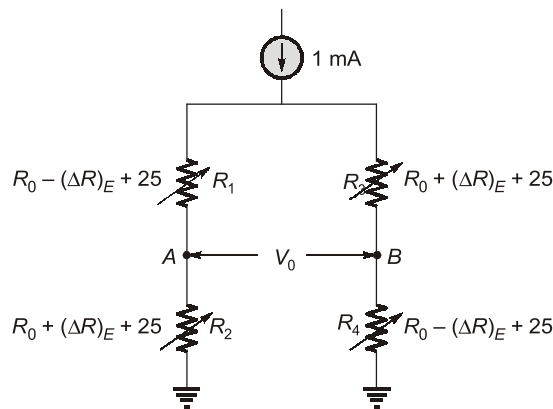
$$\therefore n_{\text{liquid}} = 1.32$$

End of Solution

Q.9 For the full bridge made of linear strain gauges with gauge factor 2 as shown in the diagram. $R_1 = R_2 = R_3 = R_4 = 100 \Omega$ at 0°C and strain is 0. The temperature coefficient of resistance of the strain gauges used is 0.005 per $^\circ\text{C}$. All strain gages are made of same material and exposed to same temperature. While measuring a strain of 0.01 at a temperature of 50°C , the output V_o in millivolt is _____ (rounded off to two decimal places).



Ans. (2)



$$\Delta T = 50^\circ\text{C} - 0^\circ\text{C} = 50^\circ\text{C}$$

$$R_{50^\circ\text{C}} = R_{0^\circ\text{C}}(1 + \alpha\Delta T) = R_{0^\circ\text{C}}(\alpha\Delta T)$$

$$(\Delta T)_{50^\circ\text{C}} = 100 \times 0.005 \times 50 = 25 \Omega$$

$$(\Delta R)_E = R_0 G_F \times \text{Strain} = 100 \times 2 \times 0.01 = 2 \Omega$$

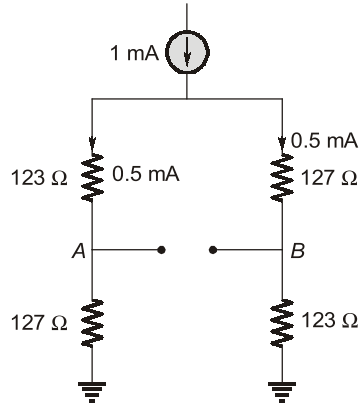
$$R_1 = 100 + 25 - 2 = 123 \Omega$$

$$R_2 = 100 + 25 + 2 = 127 \Omega$$

$$R_3 = 100 + 25 + 2 = 127 \Omega$$

$$R_4 = 100 + 25 - 2 = 123 \Omega$$

$$\begin{aligned} V_0 &= V_A - V_B \\ &= 0.5 \times 10^{-3} (127 - 123) \\ &= 4 \times 0.5 \text{ mV} = 2 \text{ mV} \end{aligned}$$



End of Solution

Q.10 A 10-bit ADC has a full-scale of 10.230 V, when the digital output is $(11\ 1111\ 1111)_2$. The quantization error of the ADC in millivolt is _____.

Ans. (5)

Given, 10 bit ADC, Full scale = 10.23 V

$$\text{Resolution} = \frac{V_{FS}}{2^n - 1} = \frac{10.23}{2^{10} - 1} = 10 \text{ mV}$$

$$\text{Quantization error} = \frac{\text{Step size}}{2} = 5 \text{ mV} \quad (\text{Step size} = \text{resolution of ADC})$$

End of Solution

Q.11 An amplitude modulation (AM) scheme uses tone modulation, with modulation index of 0.6. The power efficiency of the AM scheme is _____% (rounded off to one decimal place).

Ans. (15.25)

Amplitude modulation, $\mu = 0.6$

Assuming sinusoidal message

$$\text{modulation efficiency, } \eta = \frac{\mu^2/2}{1 + \frac{\mu^2}{2}} \times 100$$

$$\begin{aligned} \% \eta &= \frac{(0.6)^2}{2 + (0.6)^2} = \frac{0.36}{2 + 0.36} \times 100 \\ &= 15.25\% \end{aligned}$$

End of Solution

ESE 2021

**G.S &
Engineering
Aptitude
Online Classes**



Features:

- Full coverage of the syllabus to train the aspirants for every possible question.
- Classes will be conducted by experienced faculties.
- The course is designed keeping in mind the latest trends of the ESE paper.
- Lectures will help students to grasp the subject from the grass-root level.
- Emphasis will be given on objective questions solving approach according to the standard of exam.
- Lectures will be delivered in online recorded mode, thereby helping aspirants to access from anywhere and from any device using our user-friendly interface.
- This course will cover 8 GS subjects. Note: Engineering Mathematics and Reasoning Aptitude will not be covered in this course.

Streams:
CE, ME, EE & E&T

Duration:
200 Hours

Fee:
₹12000 +GST

Course will be active till the date of examination

Download **MADE EASY Prime** app





android



iOS

Helpline

 **8851176822, 9958995830**

 **info@madeeasyprime.com**



www.madeeasyprime.com

Q.12 A household fan consumes 60 W and draws a current of 0.3125 A (rms) when connected to a 230 V (rms) AC, 50 Hz single phase mains. The reactive power drawn by the fan in VAR is (rounded off to the nearest integer).

Ans. (39.56)

$$\begin{aligned}
 P_{\text{out}} &= 60 \text{ W} \\
 I &= 0.3125 \text{ A} \\
 V &= 230 \text{ V} \\
 VI \cos\phi &= P_{\text{out}} \\
 \cos\phi &= 0.8347 & \left[\because \cos\phi = \frac{P_{\text{out}}}{VI} \right] \\
 \phi &= 33.406 \\
 Q &= P \tan\phi \\
 Q &= 39.56 \text{ VAR}
 \end{aligned}$$

End of Solution

Q.13 For a 4-bit Flash type Analog to Digital Converter (ADC) with full scale input voltage range "V". Which of the following statement(s) is/are true?

- (a) A change in the input voltage by $\frac{V}{16}$ will always flip MSB of the output.
- (b) A change in the input voltage by $\frac{V}{16}$ will always flip the LSB of the output.
- (c) The ADC requires 15 comparators.
- (d) The ADC requires one 4 to 2 priority encoder and 4 comparators.

Ans. (b, c)

Given, 4 bit flash ADC, $n = 4$

$$\text{Resolution} = \frac{V_R}{2^n} = \frac{V_R}{2^4} = \frac{V_R}{16}$$

Any change $\frac{V_R}{16}$ changes LSB.

Example, Input : 0 V \rightarrow 0000

$$\frac{V_R}{16} \rightarrow 0001$$

No. of comparators required for 4-bit flash type ADC = $2^4 - 1 = 15$

End of Solution

Q.14 A 16-bit microprocessor has twenty address lines (A_0 to A_{19}) and 16 data lines. The higher eight significant lines of the data bus of the processor are tied to the 8-data lines of a 16 Kbyte memory that can store one byte in each of its 16K address locations. The memory chip should map onto contiguous memory locations and occupy only 16 Kbyte of memory space. Which of the following statements) is/are correct with respect to the above design?

- (a) The 16 Kbyte memory cannot be mapped with contiguous address locations with a starting address as 0F000H using only A_{19} to A_{14} AM for generating chip select.
- (b) The above chip cannot be interfaced as the width of the data bus of the processor and the memory chip differs.
- (c) If the 16 Kbyte of memory chip is mapped with a starting address of 80000H, then the ending address will be 83FFFH.
- (d) The active high chip-select needed to map the 16 Kbyte memory with a starting address at F0000H is given by the logic expression $(A_{19} \cdot A_{18} \cdot A_{17} \cdot A_{16})$.

Ans. (a, c)

The type of microprocessor \rightarrow 16 bit

Data bus length \rightarrow 16 bit

Number of address lines \rightarrow 20 ($A_{19} - A_0$)

Memory chip connected \rightarrow 16 kB

Given condition is memory chip of 16 kB should be mapped onto contiguous memory locations. For a 16 kB memory chip, number of address lines required,

$$2^n = N = 16 \text{ kB} = 2^{14}$$

$$n = 14 \text{ i.e. } A_{13} - A_0$$

Remaining 6 lines can be used for chip select i.e. $A_{19} - A_{14}$.

As per option 153, if starting address is 0F000H i.e.

$$\begin{array}{cccccccccccccccccccc} A_{19} & A_{18} & A_{17} & A_{16} & A_{15} & A_{14} & A_{13} & A_{12} & \dots & A_0 \\ 0 & 0 & 0 & 0 & 1 & 1 & 1 & 1 & 0 & 0 & 0 & 0 & 0 & 0 & 0 & 0 \end{array}$$

Chip select lines

The ending for starting address of 0F000H is 12FFFH but the chip select lines get modified. So the statement is correct.

If starting addressing 80000H then ending address would be 83FFFH which does not change A_{19} to A_{14} lines i.e. 100000.

For 16 kB to find ending address 3FFF H should be added to starting address.

End of Solution

Q.15 The signal $\sin(\sqrt{2\pi t})$ is

- (a) periodic with period $T = \sqrt{2\pi}$
- (b) periodic with period $T = 2\pi$
- (c) periodic with period $T = 4\pi^2$
- (d) not periodic

Ans. (d)

$$x(t) = \sin(\sqrt{2\pi t})$$

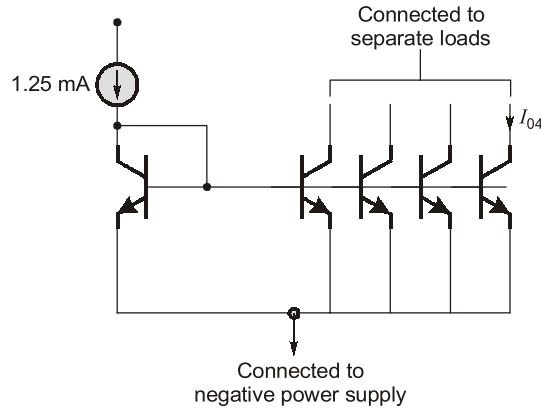
- For negative values of 't', sine-function will apply on imaginary values.
 - For positive values of 't', sine-function will apply on real-values.
 - So, there will not be repetition in the waveform.
- \therefore We can draw waveform only in the RHS.

But we cannot draw waveform in the LHS.

- Therefore, $\sin(\sqrt{2\pi t})$ is non-periodic.

End of Solution

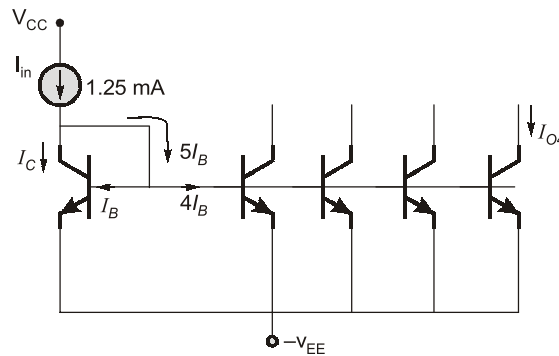
Q.16 All the transistors used in the circuit are matched and have a current gain β of 20. Neglecting the Early effect, the current I_{O4} in Milli Ampere is ____.



Ans. (1)

$$\beta = 20$$

All transistors are identical and their V_{BE} values are perfectly equal. Hence, their currents will be equal.



By KCL,

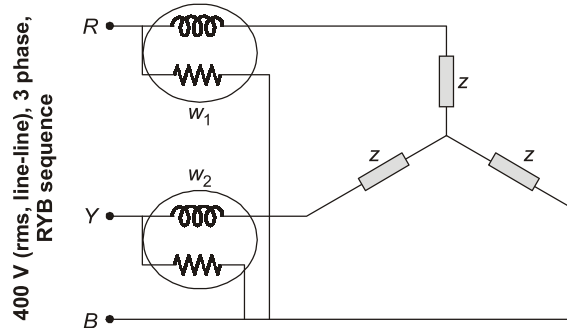
$$I_{in} = I_C + 5I_B = I_C + \frac{5I_C}{\beta}$$

$$I_C = \frac{I_{in}}{1 + \frac{5}{\beta}}$$

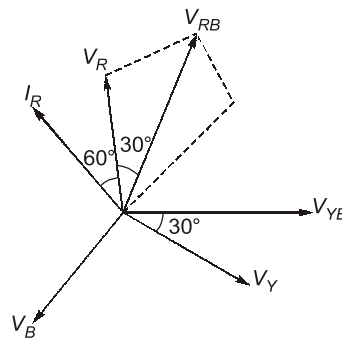
$$I_{O4} = \frac{I_{in}}{1 + \frac{5}{\beta}} = \frac{1.25}{1 + \frac{5}{20}} = 1 \text{ mA}$$

End of Solution

Q.17 The power in a 400 V (rms, line-line) three-phase, three-wire RYB sequence system is measured using the two wattmeters, as shown. The R-line current is $5\angle 60^\circ$ A. Wattmeter W_1 in the R-line will read (in watt)_____.



Ans. (0)



As wattmeter W_1 is connected with pressure coil in R-B phase and current coil in R-Phase.

$$\begin{aligned} \text{So, Power measured in wattmeter } W_1 \text{ is} &= V_{RB} \times I_R \cos\theta \\ &= 400 \times 5 \times \cos 90^\circ \\ &= 0 \text{ Watts.} \end{aligned}$$

End of Solution

Q.18 A toroid made of CRGO has an inner diameter of 10 cm and an outer diameter of 14 cm. The thickness of the toroid is 2 cm. 200 turns of copper wire is wound on the core. $\mu_0 = 4\pi \times 10^{-7}$ H/m and μ_r of CRGO is 3000. When a current of 5 mA flows through the winding, the flux density in the core in millitesla is_____.

Ans. (10)

$$\begin{aligned} \phi &= \frac{MMF}{s} = \frac{NI}{\frac{l}{a\mu_0\mu_r}} = \frac{NI}{l} (a\mu_0\mu_r) \\ B &= \frac{d}{a} = \frac{\frac{NI}{l} (a\mu_0\mu_r)}{a} \\ B &= \frac{NI\mu_0\mu_r}{l} \end{aligned}$$

$$B = \frac{200(5 \times 10^{-3})(4\pi \times 10^{-7})(3000)}{2\pi \left(\frac{12 \times 10^{-2}}{2} \right)}$$

$$B = 10 \text{ milli Tesla}$$

End of Solution

Q.19 Input-Output characteristic of a temperature sensor is exponential for a

- (a) Mercury thermometer
- (b) Thermocouple
- (c) Resistive Temperature Device (RTD)
- (d) Thermistor

Ans. (d)

End of Solution

Q.20 A single-phase transformer has a magnetizing inductance of 250 mH and a core loss resistance of 300 Ω , referred to primary side, When excited with a 230 V, 50 Hz sinusoidal supply at the primary, the power factor of the input current drawn, with secondary on open circuit, is (rounded off to two decimal places).

Ans. (0.25) (0.15 to 0.35)

$$L = 250 \times 10^{-3} \text{ H}; \quad R_0 = 300 \ \Omega$$

$$B_L = \frac{1}{2\pi fL} = \frac{1}{2\pi(50)250 \times 10^{-3}} = 0.012732$$

$$G_0 = \frac{1}{300} = 3.33 \times 10^{-3}$$

$$\cos \theta = \frac{G_0}{\sqrt{G_0^2 + B_L^2}} = 0.253 \text{ lag}$$

End of Solution

Q.21 Consider the function $f(x) = -x^2 + 10x + 100$. The minimum value of the function in the interval [5, 10] is _____.

Ans. (100)

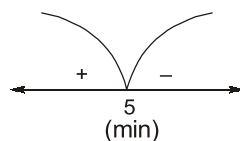
$$f(x) = -2x + 10$$

$$f(5) = 0$$

$$f(10) = -100$$

$\therefore f(x) \leq 0$ in [5, 10] so $f(x)$ is decreasing function.

$$\begin{aligned} \text{Min } f(x) &= f(10) = -(10)^2 + 10(10) + 100 \\ &= -100 + 100 + 100 = 100 \end{aligned}$$



End of Solution

Q.22 A Boolean function F of three variables X , Y and Z is given as
 $F(X, Y, Z) = (X' + Y + Z) \times (X + Y' + Z') \times (X' + Y + Z')$
 Which one of the following is true?

- (a) $F(X, Y, Z) = (X + Y + Z') \times (X' + Y' + Z')$
- (b) $F(X, Y, Z) = (X' + Y) \times (X + Y' + Z')$
- (c) $F(X, Y, Z) = X'Z' + YZ'$
- (d) $F(X, Y, Z) = X' Y' Z + X Y Z$

Ans. (c)

$$\begin{aligned} (X'Y'Z' + X'YZ' + XYZ') &= X'Z' (Y' + Y) + XYZ' \\ &= X'Z' + XYZ' \\ &= Z' (X' + XY) \\ &= Z' (X' + Y) \end{aligned}$$

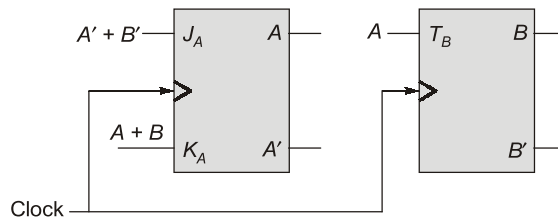
	$Y\bar{Z}$	$\bar{Y}Z$	YZ	$Y\bar{Z}$
\bar{X}	1	0	0	1
X	0	0	0	1

By using k-map

$$F = X'Z' + YZ'$$

End of Solution

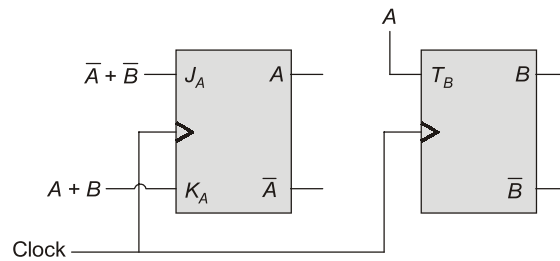
Q.23 Given below is the diagram of a synchronous sequential circuit with one J-K flip-flop and one T flip-flop with their outputs denoted as A and B respectively, with $J_A = (A' + B')$, $K_A = (A + B)$ and $T_B = A$.



Starting from the initial state ($AB = 00$), the sequence of states (AB) visited by the circuit is

- (a) $00 \rightarrow 10 \rightarrow 01 \rightarrow 11 \rightarrow 00 \dots$
- (b) $00 \rightarrow 01 \rightarrow 11 \rightarrow 00 \dots$
- (c) $00 \rightarrow 10 \rightarrow 11 \rightarrow 01 \rightarrow 00 \dots$
- (d) $00 \rightarrow 01 \rightarrow 10 \rightarrow 11 \rightarrow 00 \dots$

Ans. (a)



$$A^+ = J\bar{A} + \bar{K}A$$

$$B^+ = T_B \oplus B$$

$$A^+ = (\bar{A} + \bar{B}) \cdot \bar{A} + (A + B) \cdot A$$

$$B^+ = A \oplus B$$

$$A^+ = \bar{A}$$

AB	\bar{A}	$A \oplus B$	A^+	B^+
00	1	0	1	0
10	0	1	0	1
01	1	1	1	1
11	0	0	0	0

00 → 10 → 01 → 11 → 00....

End of Solution

Q.24 Given $A = \begin{bmatrix} 2 & 5 \\ 0 & 3 \end{bmatrix}$, the value of the determinant $|A^4 - 5A^3 + 6A^2 + 2I| = \underline{\hspace{2cm}}$.

Ans. (4)

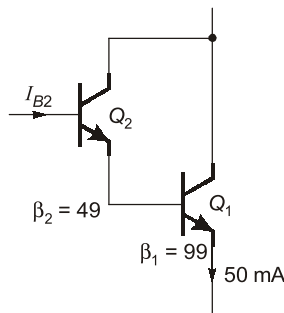
Characteristic Eq. of A is $|A - \lambda I| = 0 \Rightarrow (\lambda - 2)(\lambda - 3) = 0 \Rightarrow \lambda^2 - 5\lambda + 6 = 0$
By C.H theorem replace $\lambda \rightarrow A$ in Characteristic Eq.

$$A^2 - 5A + 6I = 0 \quad \dots(1)$$

$$\begin{aligned} \text{Now } |A^4 - 5A^3 + 6A^2 + 2I| &= |A^2(A^2 - 5A + 6I) + 2I| \\ &= |0 + 2I| = |2I| = 2^2|I| = 4|I| = 4 \times 1 = 4 \end{aligned}$$

End of Solution

Q.25 The transistor Q_1 has a current gain $\beta_1 = 99$ and the transistor Q_2 has a current gain $\beta_2 = 49$. The current I_{B2} in microampere is _____.





MADE EASY

India's Best Institute for IES, GATE & PSUs

ESE 2021 Preliminary Examination Online Test Series

34 Tests

2206 Questions

Combined Package of
ESE 2020 + ESE 2021 (Pre)
also available : 68 Tests

Streams: CE, ME, EE , E&T

- Quality questions as per standard and pattern of ESE.
- Includes tests of Paper-I (GS & Engg. Aptitude) and Paper-II (Technical)
- Fully explained and well illustrated solutions.
- Due care taken for accuracy.
- Comprehensive performance analysis report.



ESE 2021 Prelims Offline Test Series

Starting from 15th April, 2021

More details will be uploaded shortly at our website

Technical Queries Helpline :  9818098817, 011-45124612

Enroll now



www.onlinetestseriesmadeeasy.in

Ans. (10)

$$\beta_1 = 99$$

$$\beta_2 = 49$$

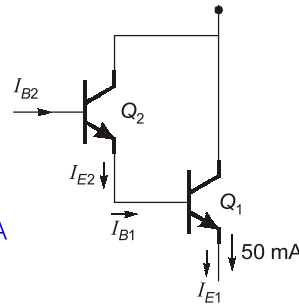
$$I_{E1} = 50 \text{ mA}$$

$$I_{E2} = I_{B1} = \frac{I_{E1}}{1 + \beta_1}$$

$$\Rightarrow I_{E2} = \frac{50}{100} = 0.5 \text{ mA} = 500 \mu\text{A}$$

$$I_{B2} = \frac{I_{E2}}{1 + \beta_2} = \frac{500}{50}$$

$$\Rightarrow I_{B2} = 10 \mu\text{A}$$



End of Solution

Q.26 Let $u(t)$ denote the unit step function. The bilateral Laplace transform of the function $f(t) = e^t u(-t)$ is _____.

- (a) $\frac{1}{s-1}$ with real part of $s < 1$ (b) $\frac{1}{s-1}$ with real part of $s > 1$
 (c) $\frac{-1}{s-1}$ with real part of $s < 1$ (d) $\frac{-1}{s-1}$ with real part of $s > 1$

Ans. (c)

$$f(t) = e^t u(-t)$$

$$\text{As we know, } e^{-t} u(t) \xrightarrow{\text{Laplace}} \frac{1}{s+1}, \sigma > -1$$

By using time-reversal property of Laplace transform,

$$e^t u(-t) \xrightarrow{\text{Laplace}} \frac{1}{-s+1}, \quad -\sigma > -1$$

$$\therefore e^t u(-t) \xrightarrow{\text{Laplace}} \frac{-1}{s-1}, \quad \sigma < 1$$

End of Solution

Q.27 In an AC main, the rms voltage V_{ac} , rms current I_{ac} and power w_{ac} are measured as: $V_{ac} = 100 \text{ V} \pm 1\%$, $I_{ac} = 1 \text{ A} \pm 1\%$ and $W_{ac} = 50 \text{ W} \pm 2\%$ (errors are with respect to readings). The percentage error in calculating the power factor using these readings is

- (a) 1% (b) 2%
 (c) 3% (d) 4%

Ans. (d)

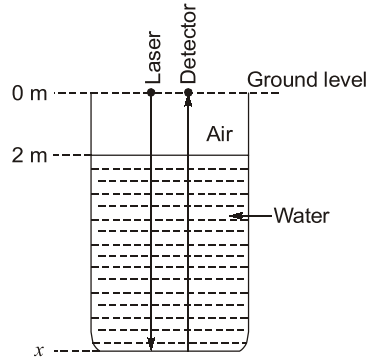
$$V_{ac} = 100 \pm 1\%, \quad I_{ac} = 1 \pm 1\%, \quad W_{ac} = 50 \text{ W} \pm 2\%$$

$$P = VI \cos(\phi) \Rightarrow pf = \cos(\phi) = \frac{P}{VI} = \frac{50}{100 \times 1} = 0.5$$

$$\% \text{Error} = \pm \left[\frac{\delta P}{P} + \frac{\delta V}{V} + \frac{\delta I}{I} \right] = \pm [2\% + 1\% + 1\%] = \pm 4\%$$

End of Solution

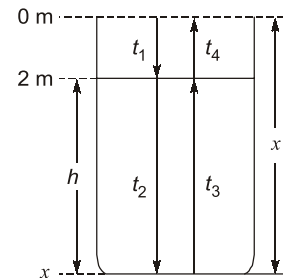
Q.28 A laser pulse is sent from ground level to the bottom of a concrete water tank at normal incidence. The tank is filled with water up to 2 m below the ground level. The reflected pulse from the bottom of the tank travels back and hits the detector. The round-trip time elapsed between sending the laser pulse, the pulse hitting the bottom of the tank reflecting back and sensed by the detector is 100 ns. The depth of the tank from ground level marked as x in metre is _____.
[Refractive index of water $n_{\text{water}} = 1.3$ and velocity of light in air $c_{\text{air}} = 3 \times 10^8$ m/s]



- (a) 11 (b) 10
(c) 9 (d) 12

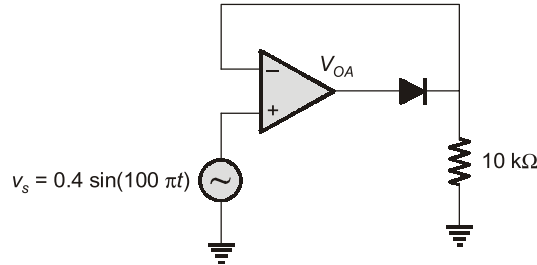
Ans. (d)

$$\begin{aligned}
 t_{\text{journey}} &= t_1 + t_2 + t_3 + t_4 \\
 &= \frac{2}{c} + 2t_2 + \frac{2}{c} \quad \left[t_2 = t_3 = \frac{h}{v} = \frac{1.3Ch}{c} \right] \\
 &= \frac{4}{c} + \frac{2 \times 1.3h}{c} \\
 100 \text{ ns} &= \frac{4 + 2.6h}{c} \\
 100 \times 10^{-9} \times 3 \times 10^8 &= 4 + 2.6h \\
 30 - 4 &= 2.6h \\
 h &= \frac{26}{2.6} = 10 \\
 \therefore x &= (10 + 2) \text{ m} \\
 x &= 12 \text{ m}
 \end{aligned}$$



End of Solution

Q.29 The diode used in the circuit has a fixed voltage drop of 0.6 V when forward biased, the signal v_s is given to the ideal OpAmp as shown. When v_s is at its positive peak, the output (v_{OA}) of the OpAmp in volts is _____.



Ans. (1)

Given circuit is called precision diode.

$$V_i = 0.4 \sin \omega t$$

Let diode be OFF.

Then $V^- = V_0 = 0$ and $V^+ = V_i$

If $V^+ < V^-$ i.e., $V_i < 0$ then $V_{od} = -V_{sat}$

and diode remains OFF $\Rightarrow V_0 = 0$

If $V^+ > V^-$ i.e., $V_i > 0$ then V_{od} becomes +ve

Now diode becomes ON and opamp will be closed-loop.

$$\Rightarrow V^- = V^+ \Rightarrow V_0 = V_i$$

If V_i has peak value i.e. $V_i = 0.4$ V

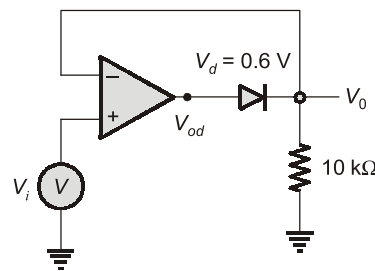
$$\Rightarrow V_0 = 0.4$$
 V

Now

$$V_{od} - V_0 = V_d$$

$$\Rightarrow V_{od} = V_d + V_0 = 0.6 + 0.4$$

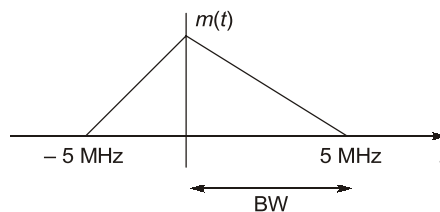
$$\Rightarrow V_{od} = 1$$
 V



End of Solution

Q.30 A signal having a bandwidth of 5 MHz is transmitted using the Pulse code modulation (PCM) scheme as follows. The signal is sampled at a rate of 50% above the Nyquist rate and quantized into 256 levels. The binary pulse rate of the PCM signal in Mbits per second is _____.

Ans. (120)



$$f_m = 5 \text{ MHz}$$

$$\text{N.R} = 2f_m = 2 \times \text{BW}$$

$$\text{N.R} = 10 \text{ MHz}$$

$$f_s = 1.5 \times \text{N.R} = 1.5 \times 10 = 15 \text{ MHz} = \frac{1}{T_s}$$

$$L = 256$$

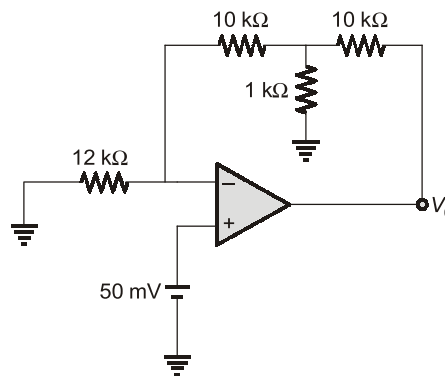
$$L = 2^n$$

So, $n = 8$ bit/sec

$$\text{Bit rate, } R_b = \frac{n}{T_s} = 8 \times 15 = 120 \text{ Mbit/sec}$$

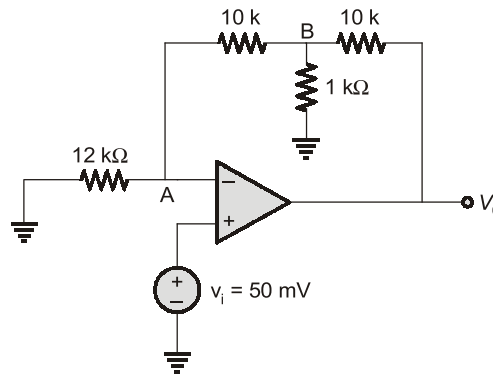
End of Solution

Q.31 The circuit shown below uses an ideal OpAmp. Output V_o in volt is _____ (rounded off to one decimal place).



Ans. (1.1) (0.8 to 1.4)

Using virtual s/c property,



$$V^- = V^+$$

$$\Rightarrow V_A = V_i = 50 \text{ mV}$$

$$\text{by KCL at A: } \frac{0 - V_A}{12} + \frac{V_B - V_A}{10} = 0$$

$$\Rightarrow V_B = \frac{11V_A}{6} = \frac{11V_i}{6} \quad \dots (i)$$

by KCL at B:

$$\frac{V_A - V_B}{10} + \frac{0 - V_B}{1} + \frac{V_o - V_B}{10} = 0$$

$$\begin{aligned} \Rightarrow V_A - V_B - 10V_B + V_0 - V_B &= 0 \\ V_0 &= 12V_B - V_A \\ &= 12 \times \frac{11V_i}{6} - V_i \\ &= 21V_i = 21 \times 50 \text{ mV} = 1050 \text{ mV or } 1.05 \text{ V} \\ \text{Answer upto 1 decimal place} &= 1.1 \text{ V} \end{aligned}$$

End of Solution

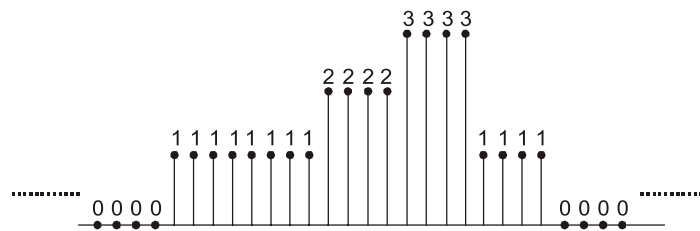
Q.32 A $3\frac{1}{2}$ digit, rectifier type digital meter is set to read in its 2000 V range. A symmetrical square wave of frequency 50 Hz and amplitude ± 100 V is measured using the meter. The meter will read_____.

Ans. (100)

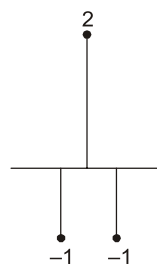
As given meter is $3\frac{1}{2}$ digit meter reading will be displayed as 100.0
As input is symmetrical square wave of amplitude 100 V.

End of Solution

Q.33 The input signal shown below



is passed through the filter with the following taps:



The number of non-zero output sample is _____.



ESE 2021

Mains Exam Conventional Batches

Mode: Live/Online & Offline

Batches commencing from
1st Week of April, 2021

Duration
75 days

Total 275-300
Teaching hours

Streams:
CE, ME, EE, E&T

**More Details will
be updated shortly
at our website**

Ans. (10)

$x(n)$	1	1	1	1	1	1	1	1	2	2	2	2	3	3	3	3	1	1	1	1
$h(n)$	1	1	1	1	1	1	1	1	2	2	2	2	3	3	3	3	1	1	1	1
-1	1	1	1	1	1	1	1	1	2	2	2	2	3	3	3	3	1	1	1	1
2	2	2	2	2	2	2	2	2	4	4	4	4	6	6	6	6	2	2	2	2
-1	1	1	1	1	1	1	1	1	2	2	2	2	3	3	3	3	1	1	1	1

$y[n] = \{-1, 1, 0, 0, 0, 0, 0, 0, 0, -1, 1, 0, 0, -1, 1, 0, 0, 2, -2, 0, 0, 1, -1\}$

Number of non-zero samples in $y[n] = 10$

End of Solution

Q.34 $f(z) = (z - 1)^{-1} - 1 + (z - 1) - (z - 1)^2 + \dots$ is the series expansion of

(a) $\frac{1}{(z-1)^2}$ for $|z-1| < 1$

(b) $\frac{1}{z(z-1)}$ for $|z-1| < 1$

(c) $\frac{-1}{z(z-1)}$ for $|z-1| < 1$

(d) $\frac{-1}{(z-1)}$ for $|z-1| < 1$

Ans. (b)

$$f(z) = (z - 1)^{-1} \left[1 - \frac{1}{(z - 1)^{-1}} + \frac{(z - 1)}{(z - 1)^{-1}} - \frac{(z - 1)^2}{(z - 1)^{-1}} + \dots \right]$$

$$= (z - 1)^{-1} [1 - (z - 1) + (z - 1)^2 - (z - 1)^3 + \dots]$$

We know that, $(1 + x)^{-1} = 1 - x + x^2 - x^3 + \dots$; for $|x| < 1$

$$= \frac{1}{(z - 1)} [1 + (z - 1)]^{-1}; \text{ for } |z - 1| < 1$$

$$= \frac{1}{(z - 1)} [z^{-1}]; \text{ for } |z - 1| < 1$$

$$= \frac{1}{z(z - 1)}; \text{ for } |z - 1| < 1$$

End of Solution

Q.35 A 300 V, 5 A. LPF wattmeter has a full scale of 300 W. The wattmeter can be used for loads supplied by 300 V ac mains with a maximum power factor of (rounded off to one decimal place).

Ans. (0.2) (0.1 to 0.3)

For low power factor wattmeter.

$$VI \cos \phi = 300$$

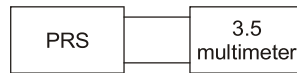
$$300 \times 5 \cos \phi = 300$$

$$\cos \phi = 0.2$$

End of Solution

Q.36 A piezoresistive pressure sensor has a sensitivity of 1 (mV/V) kPa. The sensor is excited with a DC supply of 10 V and the output is read using a $3\frac{1}{2}$ digit 200 mV full-scale digital multimeter. The resolution of the measurement set-up, in pascal is_____.

Ans. (10)



Total counts = 2000 counts

Maximum voltage = 200 mV

$$\text{Sensitivity} = \frac{1\text{mV}}{1\text{kPascal}} \dots \text{(i)}$$

Input voltage = 10 V

Full scale output, $V_0 = 200$ mV

$$\text{Also, Sensitivity} = \frac{200\text{mV}}{10\text{V}} \dots \text{(ii)}$$

From (i) and (ii),

$$\frac{1\text{mV}}{1\text{kPascal}} = \frac{200\text{mV}}{10\text{V}}$$

$$P_{in} = 20 \text{ K Pascal}$$

$$\text{Resolution} = \frac{20 \text{ K pascal}}{2000 \text{ counts}} = 10 \text{ pascal}$$

End of Solution

Q.37 An infinitely long line, with uniform positive charge density, lies along the z-axis. In cylindrical coordinates (r, θ, z) . at any point \vec{P} not on the z-axis. The direction of the electric field is:

- (a) $\hat{\theta}$ (b) $\frac{(\hat{r} + \hat{z})}{\sqrt{2}}$
(c) \hat{z} (d) \hat{r}

Ans. (d)

End of Solution

Q.38 Given $y(t) = e^{-3t} u(t) * u(t + 3)$, where $*$ denotes convolution operation. The value of $y(t)$ as $t \rightarrow \infty$ is _____ (rounded off to two decimal places).

Ans. (0.33)

$$y(t) = e^{-3t} u(t) * u(t + 3)$$

$$Y(s) = e^{3s} \left[\frac{1}{3} \left(\frac{1}{s} - \frac{1}{s+3} \right) \right]$$

$$Y(s) = e^{3s} F(s) \quad \dots (i)$$

where, $F(s) = \frac{1}{3} \left(\frac{1}{s} - \frac{1}{s+3} \right)$

$$f(t) = \frac{1}{3} [1 - e^{-3t}] \times u(t) \quad \dots (ii)$$

From (i), $Y(s) = e^{3s} F(s)$
 $y(t) = f(t + 3)$

$$y(t) = \frac{1}{3} [1 - e^{-3(t+3)}] u(t+3) \dots \text{From (ii)}$$

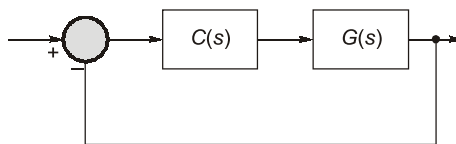
Put $t = \infty$, $y(\infty) = \frac{1}{3} [1 - 0] \times 1 = \frac{1}{3}$

End of Solution

Q.39 Consider the unity feedback configuration with a plant and PID controller as shown in

the figure $G(s) = \frac{1}{(s+1)(s+3)}$ and $C(s) = K \frac{(s+3-j)(s+3+j)}{s}$ with K being scalar.

The closed loop is



- (a) stable for all values of K
- (b) only stable for K between -1 and $+1$
- (c) only stable for $K < 0$
- (d) only stable for $K > 0$

Ans. (d)

$$q(s) = 1 + C(s)G(s) = 0$$

$$q(s) = s^3 + s^2(K + 4) + s(6K + 3) + 10K = 0$$

Necessary: $K > -4$; $K > -\frac{1}{2}$; $K > 0$

Sufficient : $bc > ad$

$$(K + 4)(6K + 3) > 10K$$

$$\Rightarrow 6K^2 + 17K + 12 > 0$$

$$\Rightarrow K > \frac{-4}{3} \text{ and } K > -\frac{3}{2} \text{ (or) } K < -\frac{4}{3} \text{ and } K < -3$$

Finally $K > 0 \text{ and } K > \frac{-4}{3}$

\therefore The closed loop system is stable only for $K > 0$.

End of Solution

Q.40 A strain gage having nominal resistance of 1000Ω has a gage factor of 2.5. If The strain applied to the gage is $100 \mu\text{m/m}$, its resistance in ohm will change to _____ (rounded off to two decimal places).

Ans. (1000.25)

For strain gauge = $\frac{\delta R}{R} = G_f \times \epsilon$ (ϵ = strain)

$$\delta R = 1000 \times 2.5 \times 100 \times 10^{-6} = 0.25 \Omega$$

Resistance of the strain gauge changes to $1000 + 0.25 = 1000.25 \Omega$

End of Solution

Q.41 Consider the rows vectors $v = (1, 0)$ and $w = (2, 0)$. The rank of the matrix $M = 2v^T v + 3w^T w$, where the superscript T denotes the transpose, is

(a) 3 (b) 2
(c) 4 (d) 1

Ans. (d)

$$A = 2 \begin{bmatrix} 1 \\ 0 \end{bmatrix} [1 \ 0] + 3 \begin{bmatrix} 2 \\ 0 \end{bmatrix} [2 \ 0]$$

$$= 2 \begin{bmatrix} 1 & 0 \\ 0 & 0 \end{bmatrix} + 3 \begin{bmatrix} 4 & 0 \\ 0 & 0 \end{bmatrix}$$

$$= \begin{bmatrix} 2 & 0 \\ 0 & 0 \end{bmatrix} + \begin{bmatrix} 12 & 0 \\ 0 & 0 \end{bmatrix} = \begin{bmatrix} 14 & 0 \\ 0 & 0 \end{bmatrix}$$

$\rho(A) = 1$

End of Solution

Q.42 Consider the system with transfer function $G(s) = \frac{2}{s+1}$. A unit step function $u(t)$ is applied to the system, which results in an output $y(t)$. If $e(t) = y(t) - u(t)$, then $\lim_{t \rightarrow \infty} e(t)$ is _____.

Ans. (1)

$$TF = \frac{2}{s+1}$$

$$OLTF = \frac{2}{s-1}$$

$$\text{Type} = 0$$

$$e_{ss} = \frac{1}{1+k_p} \text{ for step input,}$$

$$k_p = \lim_{s \rightarrow 0} \frac{2}{s-1} = -2$$

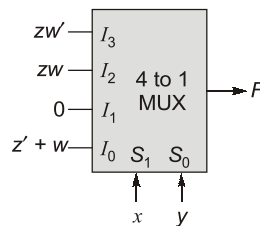
$$\therefore e_{ss} = \frac{1}{1-2} = -1$$

$$e_{ss} = +1$$

(\because In question, $e = Y - U$)

End of Solution

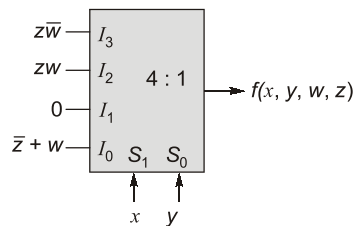
- Q.43** A 4×1 multiplexer with two selector lines is used to realize a Boolean function, F having four Boolean variables X, Y, Z and W as shown below. S_0 and S_1 denote the least significant bit (LSB) and most significant bit (MSB) of the selector lines of the multiplexer respectively. I_0, I_1, I_2, I_3 are the input lines of the multiplexer.



The canonical sum of product representation of F is

- (a) $F(X, Y, Z, W) = \Sigma m(0, 1, 3, 14, 15)$
- (b) $F(X, Y, Z, W) = \Sigma m(0, 1, 3, 11, 14)$
- (c) $F(X, Y, Z, W) = \Sigma m(2, 5, 9, 11, 14)$
- (d) $F(X, Y, Z, W) = \Sigma m(1, 3, 7, 9, 15)$

Ans. (b)



$$f = \bar{x}\bar{y}(\bar{z} + w) + \bar{x}y \cdot 0 + x\bar{y}(zw) + xy(z\bar{w})$$

$$\begin{array}{cccccccccccc} \bar{x} & \bar{y} & \bar{z} & _ & + & \bar{x} & \bar{y} & _ & w & + & x & \bar{y} & z & w & + & x & y & z & \bar{w} \\ 0 & 0 & 0 & 0 & & 0 & 0 & 0 & 1 & & 1 & 0 & 1 & 1 & & 1 & 1 & 1 & 0 \\ 0 & 0 & 0 & 1 & & 0 & 0 & 1 & 1 & & & & & & & & & & \end{array}$$

$$f(x, y, z, w) = \Sigma m(0, 1, 3, 11, 14)$$

End of Solution

- Q.44** A single-phase transformer has maximum efficiency of 98 %. The core losses are 80 W and the equivalent winding resistance as seen from the primary side is 0.5Ω . The rated current on the primary side is 25 A. The percentage of the rated input current at which the maximum efficiency occurs is
- (a) 80.5% (b) 50.6%
(c) 35.7% (d) 100%

Ans. (b)

At maximum efficiency,

$$\text{Core loss} = \text{Copper losses}$$

$$\text{Core loss} = 80 \text{ W}$$

$$\text{Copper loss at rated current} = (25)^2 \times 0.5 = 312.5 \text{ W}$$

When maximum efficiency occurred,

$$I_m^2 R = 80$$

$$I_m^2 = \frac{80}{0.5} = 160$$

$$I_m = 12.649 \text{ A}$$

$$\% \text{ of rate of current} = \frac{12.649}{25} \times 100 = 50.60\%$$

End of Solution

- Q.45** The step response of a circuit is seen to have an oscillatory behaviour at the output with oscillations dying down after some time. The correct inference(s) regarding the transfer function from input to output is/are
- (a) that it is of at least second order.
(b) that it has at least one pole-pair that is underdamped.
(c) that it does not have a real pole.
(d) that it is first order system.

Ans. (a, b)

If system has oscillatory behaviour it should be under damped.

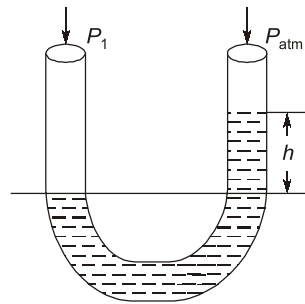
For underdamped system, least order of system should be 2.

For 3rd order system, it can have a real system with under damped in nature.

End of Solution

- Q.46** Given: Density of mercury is 13600 kg/m^3 and acceleration due to gravity is 9.81 m/s^2 . Atmospheric pressure is 101 kPa. In a mercury U-tube manometer, the difference between the heights of the liquid in the U-tube is 1 cm. The differential pressure being measured in pascal is(rounded off to the nearest integer).

Ans. (1334.16)



Density of monometric fluid (ρ) = 13,600 kg/m³

Acceleration due to gravity is (g) = 9.81 m/s²

Height indicated (h) = 1 cm

$$P_1 = P_{atm} + \rho gh$$

$$P_1 - P_{atm} = \rho gh$$

Differential pressure

$$\Delta P = P_1 - P_{atm} = \rho gh$$

$$\Delta P = 13600 \times 9.81 \times 10 \times 10^{-2} = 1334.16 \text{ Pa}$$

End of Solution

Q.47 A bar primary current transformer of rating 1000/1 A, 5VA; UPF has 995 secondary turns. It exhibits zero ratio error and phase error of 30 minutes at 1000 A with rated burden. The watt loss component of the primary excitation current in ampere is (rounded off to one decimal place).

Ans. (5)

$$n = 995$$

$$\text{Ratio error} = 0$$

$$k_n - R = 0$$

$$k_n = R$$

$$k_n = \frac{1000}{1} = 1000$$

So,
$$R = \frac{1000}{R}$$

We know that,
$$R = n + \frac{I_o \sin(\alpha + \delta)}{I_s}$$

Here, $\delta = 0$ as UPF

$$1000 = 995 + \frac{I_w}{1}$$

$$I_w = 5 \text{ A}$$

End of Solution

Q.48 When the movable arm of a Michelson interferometer in vacuum ($n = 1$) is moved by $325 \mu\text{m}$. The number of fringe crossings is 1000. The wavelength of the laser used in nanometers is_____.

Ans. (650)

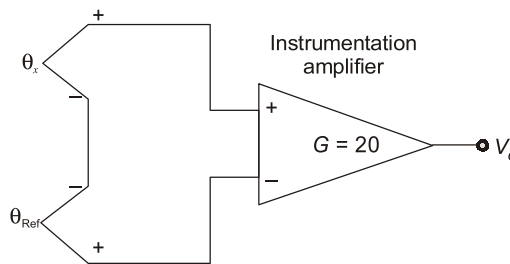
Given, $d = 325 \text{ mm}$
path difference, $= 2d = 2 \times 325 \text{ mm}$
path difference $= n\lambda$

$$\therefore 2d = n\lambda \Rightarrow n = \frac{2d}{\lambda} = \frac{2 \times 325 \mu\text{m}}{1000}$$

$$\therefore n = 650 \text{ nm}$$

End of Solution

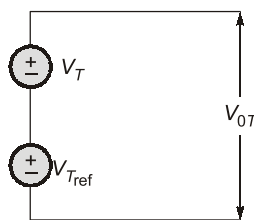
Q.49 A J-type thermocouple has an output voltage $V_{\theta} = (13650 + 50 \theta_x) \mu\text{V}$. where θ_x is the junction temperature in Celsius ($^{\circ}\text{C}$). The thermocouple is used with reference junction compensation, as shown in the figure. The Instrumentation amplifier used has a gain $G = 20$. If θ_{Ref} is 1°C . for an input θ_x of 100°C . the output V_o of the instrumentation amplifier in millivolt is:



- (a) 100 mV
- (c) 99 mV

- (b) 98 mV
- (d) 101 mV

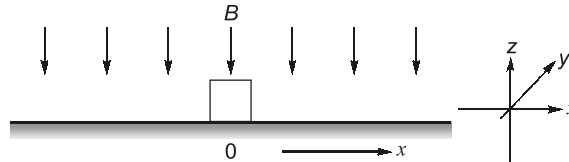
Ans. (c)



$$\begin{aligned} V_{OT} &= V_T - V_{Tref} \\ &= [13650 + 50\theta_x] - [13650 + 50\theta_{ref}] \\ &= 50 [\theta_x - \theta_{ref}] = 50 [100 - 1] \\ &= 4950 \\ V_o &= 20 \times V_{OT} = 4950 \times 20 \mu\text{V} = 99 \text{ mV} \end{aligned}$$

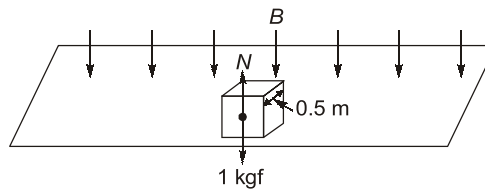
End of Solution

Q.50 The figure below shows an electrically conductive bar of square cross-section resting on a plane surface. The bar of mass of 1 kg has a depth of 0.5 m along the y-direction. The coefficient of friction between the bar and the surface is 0.1. Assume the acceleration due to gravity to be 10 m/s^2 . The system faces a uniform flux density $B = -1\hat{z} \text{ T}$. At time, $t = 0$, a current of 10 A is switched onto the bar and is maintained.



When the bar has moved by 1 m, its speed in metre per second is _____ (rounded off to one decimal place).

Ans. (2.8)



Weight of the body = 1 kg

Normal reaction from surface = $1 \times 10 = 10 \text{ N}$

Friction force, $F_f = \mu N$

Where μ is coefficient of friction of surface = 0.1

$\therefore F_f = 10 \times 0.1 = 1 \text{ N}$ (opposing the motion)

Motion of bar caused by force, $F = BIL = (-1)(10)(0.5) = 5 \text{ N}$

Net force on body = $5 - 1 = 4 \text{ N}$ (in direction of motion)

Force, $F = ma$

$$4 = 1 \times a$$

$$a = 4 \text{ m/s}^2$$

Using motion equation: $v^2 = u^2 + 2aS$

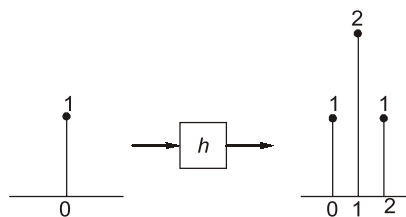
$$u = 0, S = 1 \text{ m}$$

$$v^2 = 2 \times 4 \times 1 = 8$$

$$v = \sqrt{8} \text{ m/sec} = 2.8 \text{ m/sec}$$

End of Solution

Q.51 The input-output relationship of an LTI system is given below:



For an input $x[n]$ shown below:



MADE EASY
India's Best Institute for IES, GATE & PSUs






POSTAL PACKAGE



- **CSE**
- **ESE**
- **GATE**
- **PSUs**
- **SSC-JE**
- **RRB-JE**
- **MPSC**
- **OPSC**
- **BPSC**
- **Other State Engineering Services Exams**

“ **Postal Study Package** is the distance learning program designed to meet the needs of the college going students, working professionals and those who are unable to join the classroom courses. The study material is compact, yet comprehensive & effective and easy to understand. MADE EASY has made all efforts to provide an error free material introducing smart and shortcut techniques for better understanding. ”

Salient Features of Postal Study Package

-  Full Emphasis on both technical and non-technical aspects (Including GS, Aptitude, Reasoning and Engineering Mathematics).
-  Subjectwise Theory and practice sets.
-  Previous year questions along with solutions.
-  Revised and updated study material.
-  Proven track record of making students succeed.

Note:

1. The study material is usually sent in 2 or more packages.
2. Current Affairs for ESE will be sent 1 month prior to examination.

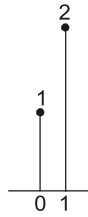
For book list, fee structure & online purchasing, visit : www.madeeasy.in

One can also buy by walk-in at any MADE EASY centre across India. Material will be dispatched to his/her address.

Dispatch procedure: After receiving the online order/demand draft we ship the material within a week, however delivery timing may vary depending on the destination (location).

Address: Corporate Office: 44-A/1, Kalu Sarai, Sarvapriya Vihar, Near Hauz Khas Metro Station, New Delhi-110016

Ph: 011-45124645, 08860378004 | **E-mail:** postalstudycourse@madeeasy.in



The peak value of the output when $x[n]$ passes through h is _____.

- (a) 5 (b) 2
(c) 4 (d) 6

Ans. (a)

When $x[n] = \delta[n]$, then $y[n] = h[n]$

$$h[n] = \delta[n] + 2\delta[n-1] + \delta[n-2]$$

$$= \{1, 2, 1\}$$

Given, $x'[n] = \delta[n] + 2\delta[n-1]$

$$x'[n] = \{1, 2\}$$

$$y[n] = x'[n] * h[n]$$

Sum by column method:

$$\begin{array}{r}
 \begin{array}{r}
 1 \quad 2 \\
 1 \quad 2 \quad 1 \\
 \hline
 1 \quad 2 \\
 \quad 2 \quad 4 \\
 \quad \quad 1 \quad 2 \\
 \hline
 y[n] = \{1 \quad 4 \quad 5 \quad 2\}
 \end{array}
 \end{array}$$

Peak value at the output is (5)

End of Solution

Q.52 An air cored coil having a winding resistance of 10Ω . is connected in series with a variable capacitor C_x . The series circuit is excited by a 10 V sinusoidal voltage source of angular frequency 1000 rad/s. As the value of the capacitor is varied, a maximum voltage of 30 V was observed across it. Neglecting skin-effect, the value of the inductance of the coil in millihenry is_____.

Ans. (30)

As capacitor's varied maximum value of voltage occurs when it is in resonance condition. At resonance condition,

$$I = \frac{V}{R} = \frac{10}{10} = 1 \text{ A}$$

$$V_L = V_C = 30 \text{ V}$$

$$I\omega L = 30 \text{ V}$$

$$\omega L = 30$$

$$L = \frac{30}{1000} = 30 \text{ mH}$$

End of Solution

Q.53 A sinusoid $(\sqrt{2} \sin t)\mu(t)$, where $\mu(t)$ is the step input is applied to a system with transfer function $G(s) = \frac{1}{s+1}$. The amplitude of the steady state output is_____.

Ans. (1)

$$G(s) = \frac{1}{s+1}$$

$$r(t) = A \sin \omega t = \sqrt{2} \sin t$$

$$c(t) = B \sin (\omega t + \phi)$$

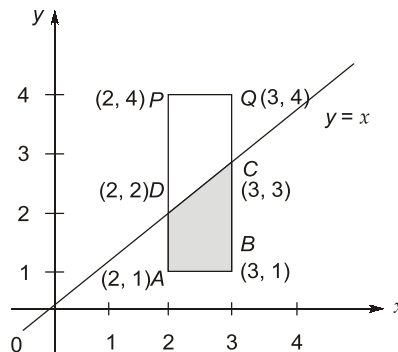
$$B = A|G(j\omega)|$$

$$= \sqrt{2} \left| \frac{1}{s+1} \right|_{s=j1} = 1$$

End of Solution

Q.54 Consider that X and Y are independent continuous valued random variables with uniform PDF given by $X \sim U(2, 3)$ and $Y \sim U(1, 4)$. Then $P(Y \leq X)$ is equal to_____ (rounded off to two decimal places).

Ans. (0.5)



$$\text{Total area} = AB \times AP$$

$$= 1 \times 3 = 3$$

$$\text{Favourable Area } (F_{av}) = \text{Area of } ABCD \text{ (i.e., Trapezium)}$$

$$= \frac{1}{2} (\text{sum of parallel sides}) \times (\text{Distance between them})$$

$$= \frac{1}{2} (AD + BC) \times (AB) = \frac{1}{2} (1 + 2) \times 1 = \frac{3}{2}$$

$$P(Y \leq X) = \frac{F_{av. \text{ area}}}{\text{Total area}} = \frac{3/2}{3} = \frac{3}{6} = 0.5$$

End of Solution

Q.55 The determinant of the matrix M shown below is _____.

$$M = \begin{bmatrix} 1 & 2 & 0 & 0 \\ 3 & 4 & 0 & 0 \\ 0 & 0 & 4 & 3 \\ 0 & 0 & 2 & 1 \end{bmatrix}$$

Ans. (4)

Expanding along R_1

$$\begin{aligned} |A| &= + (1) \begin{vmatrix} 4 & 0 & 0 \\ 0 & 4 & 3 \\ 0 & 2 & 1 \end{vmatrix} - (2) \begin{vmatrix} 3 & 0 & 0 \\ 0 & 4 & 3 \\ 0 & 2 & 1 \end{vmatrix} \\ &= (1)[4(4 - 6)] - 2[3(4 - 6)] = 4 \end{aligned}$$

End of Solution

■■■■