

Andhra Pradesh State Council of Higher Education

Question Paper Name: Fine ArtsVisual Arts
Subject Name: Fine Arts(Visual Arts)
Creation Date: 2019-11-09 18:13:54
Duration: 180
Total Marks: 180
Display Marks: Yes
Share Answer Key With Delivery Engine: Yes

Fine Arts(Visual Arts)

Group Number : 1
Group Id : 62321747
Group Maximum Duration : 0
Group Minimum Duration : 180
Revisit allowed for view? : No
Revisit allowed for edit? : No
Break time: 0
Group Marks: 180
Revisit allowed for group Instructions? : Yes
Maximum Instruction Time: 0
Minimum Instruction Time: 0

Teaching and Research Aptitude

Section Id : 62321793
Section Number : 1
Section type : Online
Mandatory or Optional: Mandatory
Number of Questions: 82
Number of Questions to be attempted: 82
Section Marks: 90
Display Number Panel: Yes
Group All Questions: No

Sub-Section Number: 1
Sub-Section Id: 623217277
Question Shuffling Allowed : Yes

Question Number : 1 Question Id : 6232178327 Question Type : MCQ Option Shuffling : Yes Display Question Number : Yes
Single Line Question Option : No Option Orientation : Vertical

Wrong Marks : 0

If there is unrest in the college, the main reason may be

Options :

Management

1.

System of education

2.

Teacher

3.

Student

4.

Question Number : 2 Question Id : 6232178328 Question Type : MCQ Option Shuffling : Yes Display Question Number : Yes
Single Line Question Option : No Option Orientation : Vertical

Wrong Marks : 0

Students like the teacher most because he

Options :

Gives more marks

1.

Maintains student discipline

2.

Shows concern about students

3.

Avoids meeting the students

4.

Question Number : 3 Question Id : 6232178329 Question Type : MCQ Option Shuffling : Yes Display Question Number : Yes
Single Line Question Option : No Option Orientation : Vertical

Wrong Marks : 0

A teacher can prevent the fluctuations of attention of the students in the classroom by

Options :

Reprimanding them

1.

Using proper stimulus

2.

3. Implementing rules strictly

4. Repeating the important points

Question Number : 4 Question Id : 6232178330 Question Type : MCQ Option Shuffling : Yes Display Question Number : Yes
Single Line Question Option : No Option Orientation : Vertical

Wrong Marks : 0

Teacher should correct the work done by the students by following one of the techniques

Options :

1. Ill treatment

2. Pass and fail

3. Good relationship

4. Bad Affect

Question Number : 5 Question Id : 6232178331 Question Type : MCQ Option Shuffling : Yes Display Question Number : Yes
Single Line Question Option : No Option Orientation : Vertical

Wrong Marks : 0

Over – motivation by teacher in the class room leads to

Options :

1. Ill treatment

2. Good environment

3. Good relationship

4. Bad Affect

Wrong Marks : 0

‘Achievement Motivation’ can be influenced mostly by

Options :

1. Reinforcement by teacher
2. Environment
3. Teaching – learning material
4. Self – Evaluation by student

Wrong Marks : 0

A teacher can identify a disabled with the help of

Options :

1. Who is affected by the environment
2. Who may not be affected by the environment
3. Who is well with the other people
4. Who is equally competent with others

Wrong Marks : 0

The full form of ‘ITEP’ is

Options :

1. Integrated Teacher Education Programme
2. Intensive Teacher Education Programme
3. Inclusive Teacher Education Programme
4. In-service Teacher Education Programme

Question Number : 9 Question Id : 6232178335 Question Type : MCQ Option Shuffling : Yes Display Question Number : Yes
Single Line Question Option : No Option Orientation : Vertical

Wrong Marks : 0

If a teacher wish to improve his classroom teaching well, he should better involve?

Options :

1. Personal Activity
2. School programmes
3. Governmental Activities
4. Action Research

Question Number : 10 Question Id : 6232178336 Question Type : MCQ Option Shuffling : Yes Display Question Number : Yes
Single Line Question Option : No Option Orientation : Vertical

Wrong Marks : 0

The following is not a measure of dispersion

Options :

1. Standard deviation
2. Variance

3. Quartile deviation

3.

4. Mean

4.

Question Number : 11 Question Id : 6232178337 Question Type : MCQ Option Shuffling : Yes Display Question Number : Yes
Single Line Question Option : No Option Orientation : Vertical

Wrong Marks : 0

An appropriate source to find out descriptive information is

Options :

1. Directory

1.

2. Bibliography

2.

3. Encyclopaedia

3.

4. Dictionary

4.

Question Number : 12 Question Id : 6232178338 Question Type : MCQ Option Shuffling : Yes Display Question Number : Yes
Single Line Question Option : No Option Orientation : Vertical

Wrong Marks : 0

The term “ Control Group” is used in

Options :

1. Historical research

1.

2. Experimental research

2.

3. Survey research

3.

4. Descriptive research

4.

Wrong Marks : 0

The following is not related to plagiarism

Options :

1. Academic dishonesty
2. Branch of Journalistic ethics
3. Stealing and publication of another author
4. Self-citations

Wrong Marks : 0

As sample size increases the following is true

Options :

1. Sampling error increases
2. Sampling error decreases
3. Non sampling error decreases
4. Level of significance increases

Wrong Marks : 0

The full form of APA in citation is

Options :

1. American psychological Association

2. American Philosophical Association

3. All people Alphabets

4. American Pedagogical Association

Question Number : 16 Question Id : 6232178342 Question Type : MCQ Option Shuffling : Yes Display Question Number : Yes
Single Line Question Option : No Option Orientation : Vertical

Wrong Marks : 0

Scaling method is used to measure

Options :

1. Quantitative variables

2. Attributes

3. Associations

4. Relations

Question Number : 17 Question Id : 6232178343 Question Type : MCQ Option Shuffling : Yes Display Question Number : Yes
Single Line Question Option : No Option Orientation : Vertical

Wrong Marks : 0

The data collected from records is called

Options :

1. Census data

2. Primary data

3. Secondary data

4. Field data

Question Number : 18 Question Id : 6232178344 Question Type : MCQ Option Shuffling : Yes Display Question Number : Yes
Single Line Question Option : No Option Orientation : Vertical

Wrong Marks : 0

The Null hypothesis contains

Options :

1. Population parameter

2. Sample statistic

3. Sampling distribution

4. Estimator

Sub-Section Number:	2
Sub-Section Id:	623217278
Question Shuffling Allowed :	Yes

Question Id : 6232178345 Question Type : COMPREHENSION Sub Question Shuffling Allowed : Yes Group Comprehension
Questions : No

Question Numbers : (19 to 27)

Question Label : Comprehension

Read the following passage and answer the questions given:

From the 1920s onwards, we also find an increasingly active engagement of women in the freedom struggle. Much has been said – and with justice – about the co-option of women’s struggle for subjectivity into the nationalist agenda. Yet our analysis would remain simplistic if we do not admit that the increasing active participation of women in these nation – wide movements was changing the parameters of man-woman relationship both within the movement and in society in general in subtle and indirect ways. It was also making dents in the ideological boundaries within which the consciousness of the middle class woman traditionally operated. The experience of participating in the Non-cooperation Movement and courting arrest involved a perception of oneself that did not tally with traditionally – constructed self – images. Then again when women, in their contact with armed revolutionaries, graduated from the role of giving shelter and hiding arms to that of participating in or even leading armed action, they had to breach very stiff barriers of conventional behaviour. There is no doubt that the strategies of the armed revolutionaries imposed severe control over women’s sexuality and that the ultimate leadership in armed struggle remained with the men. Yet it cannot be denied that this participation demanded that women should create new roles for themselves and in doing so should transgress norms of gender and class relationship. This process became more pronounced when women joined mass-movements organized by the Leftist forces.

Sub questions

Question Number : 19 Question Id : 6232178346 Question Type : MCQ Option Shuffling : Yes Display Question Number : Yes Single Line Question Option : No Option Orientation : Vertical

Wrong Marks : 0

What was the turning point in our Freedom Movement from 1920s?

Options :

1. Withdrawal of women from the Movement
2. Passive role of women in the Movement
3. Increasingly active engagement of women

Conflict between men and women

4.

Question Number : 20 Question Id : 6232178347 Question Type : MCQ Option Shuffling : Yes Display Question Number : Yes
Single Line Question Option : No Option Orientation : Vertical

Wrong Marks : 0

What was the option of women in those times?

Options :

1. Subjectivity into the national agenda
2. Mere observation of the movement
3. Supporting men from home'
4. Non – interfering attitude

Question Number : 21 Question Id : 6232178348 Question Type : MCQ Option Shuffling : Yes Display Question Number : Yes
Single Line Question Option : No Option Orientation : Vertical

Wrong Marks : 0

Why were the parameters of man – woman relationship changed

Options :

1. Imposition of British culture on Indian society
2. Women's opposition to male domination
3. Increase in the rate of women's education
4. Active participation of women in the Movement

Question Number : 22 Question Id : 6232178349 Question Type : MCQ Option Shuffling : Yes Display Question Number : Yes
Single Line Question Option : No Option Orientation : Vertical

Wrong Marks : 0

The ideological boundaries of the middle class women of 1920s were

Options :

1. Steadfast
2. Modified
3. Dangerous
4. Strengthened

Question Number : 23 Question Id : 6232178350 Question Type : MCQ Option Shuffling : Yes Display Question Number : Yes
Single Line Question Option : No Option Orientation : Vertical

Wrong Marks : 0

What were the reasons for transformation of traditionally constructed self-image of women?

Options :

1. Women's active participation in the freedom struggle
2. Women taking part in Non-cooperation Movement'
3. Women courting arrest and going to jail
4. All of the other options

Question Number : 24 Question Id : 6232178351 Question Type : MCQ Option Shuffling : Yes Display Question Number : Yes
Single Line Question Option : No Option Orientation : Vertical

Wrong Marks : 0

Why did women breach stiff barriers of convention?

Options :

1. To lead armed action
2. To discourage the male activists and revolutionaries
3. To disconnect themselves from the Movement

To control their sexuality

4.

Question Number : 25 Question Id : 6232178352 Question Type : MCQ Option Shuffling : Yes Display Question Number : Yes
Single Line Question Option : No Option Orientation : Vertical

Wrong Marks : 0

How did the men revolutionaries keep the ultimate leadership in armed struggle with them?

Options :

1. By restricting women to household chores
2. By sending women to educational institutes
3. By encouraging them to learn handicrafts
4. By imposing severe control over women's sexuality

Question Number : 26 Question Id : 6232178353 Question Type : MCQ Option Shuffling : Yes Display Question Number : Yes
Single Line Question Option : No Option Orientation : Vertical

Wrong Marks : 0

What did women do in order to create new roles for themselves?

Options :

1. Trained their children to be patriotic
2. Abided by the norms of society
3. Transgressed gender and class
4. Honed their skills

Question Number : 27 Question Id : 6232178354 Question Type : MCQ Option Shuffling : Yes Display Question Number : Yes
Single Line Question Option : No Option Orientation : Vertical

Wrong Marks : 0

To further their role in armed revolution, women joined mass movements organized by

Options :

1. Mahatma Gandhi

2. Leftists

3. Arya Samaj

4. Azad Hind Fauj

Sub-Section Number:	3
Sub-Section Id:	623217279
Question Shuffling Allowed :	Yes

Question Number : 28 Question Id : 6232178355 Question Type : MCQ Option Shuffling : Yes Display Question Number : Yes
Single Line Question Option : No Option Orientation : Vertical
Wrong Marks : 0

One of the following is not related to the areas of Johari Window's interpersonal communication.

Options :

1. Hidden Area

2. Known Area

3. Blind Area

4. Unknown Area

Question Number : 29 Question Id : 6232178356 Question Type : MCQ Option Shuffling : Yes Display Question Number : Yes
Single Line Question Option : No Option Orientation : Vertical
Wrong Marks : 0

The questioning device of communication “who says what in which channel to whom with what effect?”. Suggested by

Options :

1. Herald Laswell
2. Herald Lasky
3. George Gerbene
4. Herbert spencer

Question Number : 30 Question Id : 6232178357 Question Type : MCQ Option Shuffling : Yes Display Question Number : Yes
Single Line Question Option : No Option Orientation : Vertical

Wrong Marks : 0

The purpose of the freedom in communication results in

Options :

1. Authority
2. Reduction
3. Control
4. Demotivation

Question Number : 31 Question Id : 6232178358 Question Type : MCQ Option Shuffling : Yes Display Question Number : Yes
Single Line Question Option : No Option Orientation : Vertical

Wrong Marks : 0

Computer Assisted Instruction (CAI) is based on one of the following principle.

Options :

1. Classical conditioning
2. Sender conditioning

3. Operant conditioning

4. Respondent conditioning

Question Number : 32 Question Id : 6232178359 Question Type : MCQ Option Shuffling : Yes Display Question Number : Yes
Single Line Question Option : No Option Orientation : Vertical

Wrong Marks : 0

Berlo's model of communication has the following four elements

Options :

1. Source, message, noise, barrier

2. Source, message, channel, receiver

3. Source, channel, receiver, feedback

4. Source, receiver, message, medium

Question Number : 33 Question Id : 6232178360 Question Type : MCQ Option Shuffling : Yes Display Question Number : Yes
Single Line Question Option : No Option Orientation : Vertical

Wrong Marks : 0

Community radio comes under

Options :

1. Instructional Media

2. Social Media

3. Mass Media

4. Digital Media

Question Number : 34 Question Id : 6232178361 Question Type : MCQ Option Shuffling : Yes Display Question Number : Yes
Single Line Question Option : No Option Orientation : Vertical

Wrong Marks : 0

‘Diorama’ is an extension of the following

Options :

1. Four Dimension
2. Uni – Dimension
3. Two – Dimension
4. Three – Dimension

Question Number : 35 Question Id : 6232178362 Question Type : MCQ Option Shuffling : Yes Display Question Number : Yes
Single Line Question Option : No Option Orientation : Vertical

Wrong Marks : 0

In a ‘Dyad’ communication, the number of persons involved are

Options :

1. 3
2. 4
3. 2
4. 5

Question Number : 36 Question Id : 6232178363 Question Type : MCQ Option Shuffling : Yes Display Question Number : Yes
Single Line Question Option : No Option Orientation : Vertical

Wrong Marks : 0

‘Hermeneutics’ is a branch of knowledge, whose main role of the teacher is to

Options :

1. Teach the philosophy of behaviour
2. Interprets the meanings of codes

3. Indicates the process of communication

4. Announces political statements

Question Number : 37 Question Id : 6232178364 Question Type : MCQ Option Shuffling : Yes Display Question Number : Yes
Single Line Question Option : No Option Orientation : Vertical

Wrong Marks : 0

The number that comes next in the sequence 4, 60, 212 is _____.

Options :

1. 339

2. 345

3. 508

4. 612

Question Number : 38 Question Id : 6232178365 Question Type : MCQ Option Shuffling : Yes Display Question Number : Yes
Single Line Question Option : No Option Orientation : Vertical

Wrong Marks : 0

Identify the missing number in the sequence $33\frac{1}{3}$, $37\frac{1}{2}$, $42\frac{6}{7}$, _____, 60.

Options :

1. 50

2. 45

3. $46\frac{3}{5}$

4. 55

Question Number : 39 Question Id : 6232178366 Question Type : MCQ Option Shuffling : Yes Display Question Number : Yes
Single Line Question Option : No Option Orientation : Vertical

Wrong Marks : 0

Which term comes next in the sequence YEB, VHG, SKL, PNQ, _____?

Options :

1. MQV

2. MOR

3. ROS

4. SQT

Question Number : 40 Question Id : 6232178367 Question Type : MCQ Option Shuffling : Yes Display Question Number : Yes
Single Line Question Option : No Option Orientation : Vertical

Wrong Marks : 0

A man purchased 20 watches for a cost of ₹200 and sold them for ₹300. What is the percentage of profit he got?

Options :

1. 50

2. 40

3. 60

4. 100

Question Number : 41 Question Id : 6232178368 Question Type : MCQ Option Shuffling : Yes Display Question Number : Yes
Single Line Question Option : No Option Orientation : Vertical

Wrong Marks : 0

If $x : y = 3 : 4$, then $(5x + 3y) : (4x + 7y) =$

Options :

1. 11 : 8

2. 8 : 11

3. 27 : 40

4. 40 : 27

Question Number : 42 Question Id : 6232178369 Question Type : MCQ Option Shuffling : Yes Display Question Number : Yes Single Line Question Option : No Option Orientation : Vertical

Wrong Marks : 0

The average marks of 23 students is 45 and the average marks of another 27 students is 55. Then the average marks of all the students put together is

Options :

1. 50

2. 50.4

3. 48

4. 48.5

Question Number : 43 Question Id : 6232178370 Question Type : MCQ Option Shuffling : Yes Display Question Number : Yes Single Line Question Option : No Option Orientation : Vertical

Wrong Marks : 0

The difference between the compound interest and the simple interest on a certain sum for two years at the same interest rate 8% per annum is 64. Then the sum is in rupees

Options :

1. 15,000

2. 12,000

3. 10,000

4. 8,000

Question Number : 44 Question Id : 6232178371 Question Type : MCQ Option Shuffling : Yes Display Question Number : Yes
Single Line Question Option : No Option Orientation : Vertical
Wrong Marks : 0

In a certain code 4523 is written as 5476 and 2871 is written as 7128. Then the code for 2018 is

Options :

1. 7981

2. 9001

3. 7901

4. 5798

Question Number : 45 Question Id : 6232178372 Question Type : MCQ Option Shuffling : Yes Display Question Number : Yes
Single Line Question Option : No Option Orientation : Vertical
Wrong Marks : 0

A train passes a pole of height 3 meters in 10 seconds and a platform of 130 meters long in 36 seconds. Then the speed of the train in km/h is

Options :

1. 25

2. 18

3. 50

4. 27

Sub-Section Number: 4
Sub-Section Id: 623217280
Question Shuffling Allowed : No

Wrong Marks : 0

Which word does not belong with the other?

Options :

1. Congar
2. Leopard
3. Elephant
4. Lion

Wrong Marks : 0

The word in the bottom row one related in the same way as the words in the top row.

For each item find the word that completes the bottom row of words

Candle, Lamp, Flood light

Hut, Cottage, _____.

Options :

1. Tent
2. City'
3. Dwelling
4. House

Wrong Marks : 0

In the following a statement is given. The statement is followed by two conclusions.

Identify which of the given conclusions logically follows:

Statement: Some actors are singers. All the singers are dancers.

Conclusions : 1. Some actors are dancers

2. No singer is actor

Options :

1. Only (1) conclusion follows

2. Only (2) conclusion follows

3. Both (1) and (2) follows

4. Neither (1) nor (2) follows

Question Number : 49 Question Id : 6232178376 Question Type : MCQ Option Shuffling : Yes Display Question Number : Yes
Single Line Question Option : No Option Orientation : Vertical

Wrong Marks : 0

In the following series, you will be looking a pattern. Fill the blank in the series.

SCD, TEF, UGH, WKL, _____.

Options :

1. CMN

2. UJI

3. VIJ

4. IJT

Question Number : 50 Question Id : 6232178377 Question Type : MCQ Option Shuffling : Yes Display Question Number : Yes
Single Line Question Option : No Option Orientation : Vertical

Wrong Marks : 0

In the following series, you will be looking pattern. Fill the blank in the series.

BCB, DED, FGF, HIH _____.

Options :

1. JKJ
2. HJH
3. IJI
4. JHJ

Question Number : 51 Question Id : 6232178378 Question Type : MCQ Option Shuffling : Yes Display Question Number : Yes
Single Line Question Option : No Option Orientation : Vertical

Wrong Marks : 0

Here are some words translated from an artificial language:

Heplesh means cloudburst

Srenchoch means pinball

Resbosrench mean minepin

Which word could mean Clonalnine?

Options :

1. Leshsrench
2. Haplresho
3. Haploch
4. Ochhapl

Question Number : 52 Question Id : 6232178379 Question Type : MCQ Option Shuffling : Yes Display Question Number : Yes
Single Line Question Option : No Option Orientation : Vertical

Wrong Marks : 0

If the day after the day after tomorrow is four days before Monday. What day is it today?

Options :

1. Tuesday
2. Wednesday
3. Thursday
4. Monday

Question Number : 53 Question Id : 6232178380 Question Type : MCQ Option Shuffling : Yes Display Question Number : Yes
Single Line Question Option : No Option Orientation : Vertical

Wrong Marks : 0

Rama is younger than Rao

Raju was born after Rama

If the above two statements are true, then which the following statement is correct?

Options :

1. Rao is older than Raju
2. Rama is older than Raju
3. Both Rao and Rama are older than Raju
4. None of the other options

Question Number : 54 Question Id : 6232178381 Question Type : MCQ Option Shuffling : Yes Display Question Number : Yes
Single Line Question Option : No Option Orientation : Vertical

Wrong Marks : 0

Knowledge based on memory is known as

Options :

1. Direct perception

2. Indirect perception

3. Inference

4. Analogy

Question Number : 55 Question Id : 6232178382 Question Type : MCQ Option Shuffling : Yes Display Question Number : Yes
Single Line Question Option : No Option Orientation : Vertical
Wrong Marks : 0

Study the following tabular statement which indicates the performance of department of surgery of a hospital for the period January to July 2019. Based on this information answer the question given below.

Month	Total successful operations		Total unsuccessful operations
	ENT	Eyes	
January	4	6	6
February	6	2	8
March	6	4	4
April	8	4	6
May	4	4	4
June	2	4	6
July	1	3	8

The total number of successful operations performed during the months having 31 days of the given period is

Options :

1. 32

2. 48

3. 26

4. 40

Question Number : 56 Question Id : 6232178383 Question Type : MCQ Option Shuffling : Yes Display Question Number : Yes
Single Line Question Option : No Option Orientation : Vertical

Wrong Marks : 0

Study the following tabular statement which indicates the performance of department of surgery of a hospital for the period January to July 2019. Based on this information answer the question given below.

Month	Total successful operations		Total unsuccessful operations
	ENT	Eyes	
January	4	6	6
February	6	2	8
March	6	4	4
April	8	4	6
May	4	4	4
June	2	4	6
July	1	3	8

The percentage of successful operations from January to April of the year 2019

Options :

1. 40

2. 60.5

3. 62.5

4. 64

Question Number : 57 Question Id : 6232178384 Question Type : MCQ Option Shuffling : Yes Display Question Number : Yes
Single Line Question Option : No Option Orientation : Vertical

Wrong Marks : 0

Study the following tabular statement which indicates the performance of department of surgery of a hospital for the period January to July 2019. Based on this information answer the question given below.

Month	Total successful operations		Total unsuccessful operations
	ENT	Eyes	
January	4	6	6
February	6	2	8
March	6	4	4
April	8	4	6
May	4	4	4
June	2	4	6
July	1	3	8

If there are 50 more operations left to be performed, then how many operations must be successful in order to make the overall percentage of successful operations to 60?

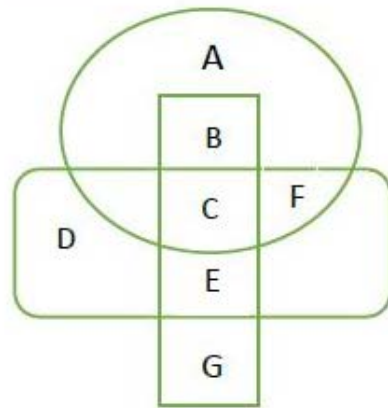
Options :

1. 42
2. 32
3. 38
4. 36

Question Number : 58 Question Id : 6232178385 Question Type : MCQ Option Shuffling : Yes Display Question Number : Yes Single Line Question Option : No Option Orientation : Vertical

Wrong Marks : 0

Study the following figure carefully and answer the question given below. In the figure ○ represents the students studying Mathematics, □ represents the students studying Physics and ▭ represents the students studying Chemistry.



Students who study Mathematics and Physics only are represented by

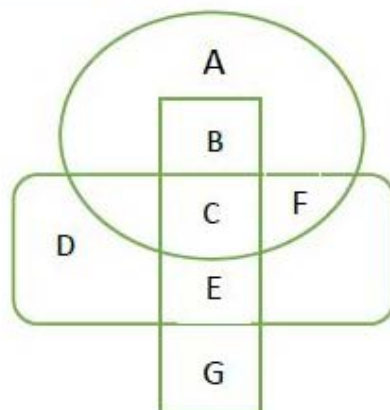
Options :

1. C
2. E
3. A
4. B

Question Number : 59 Question Id : 6232178386 Question Type : MCQ Option Shuffling : Yes Display Question Number : Yes Single Line Question Option : No Option Orientation : Vertical

Wrong Marks : 0

Study the following figure carefully and answer the question given below. In the figure ○ represents the students studying Mathematics, □ represents the students studying Physics and ▭ represents the students studying Chemistry.






Students who study Chemistry only are represented by

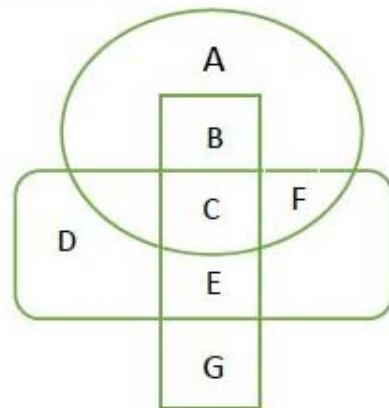
Options :

1. B, G D and F
2. D and F
3. C, D, E and F
4. D, E and F

Question Number : 60 Question Id : 6232178387 Question Type : MCQ Option Shuffling : Yes Display Question Number : Yes Single Line Question Option : No Option Orientation : Vertical

Wrong Marks : 0

Study the following figure carefully and answer the question given below. In the figure  represents the students studying Mathematics,  represents the students studying Physics and  represents the students studying Chemistry.



Students who study all the three subjects, i.e., Mathematics, Physics and Chemistry

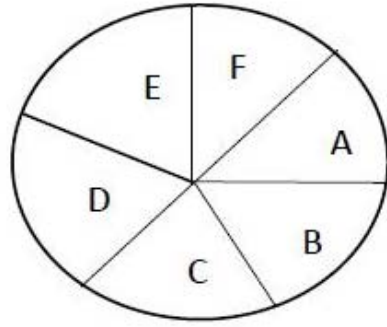
Options :

1. C, D and F
2. B and C
3. C and F
4. C

Question Number : 61 Question Id : 6232178388 Question Type : MCQ Option Shuffling : Yes Display Question Number : Yes Single Line Question Option : No Option Orientation : Vertical

Wrong Marks : 0

The following Pie chart represents the percentage distribution of the expenditure incurred in publishing a book. Study the chart carefully and answer the question given below.



A – Printing cost 20%, B – Paper cost 25% C – Binding cost 20%, D – Royalty 15%
E – Promotion cost 10%, F – Transportation cost.

If for a certain type of books, the publisher has to pay 24000 rupees towards Royalty, then the amount to be paid towards the transportation is in rupees.

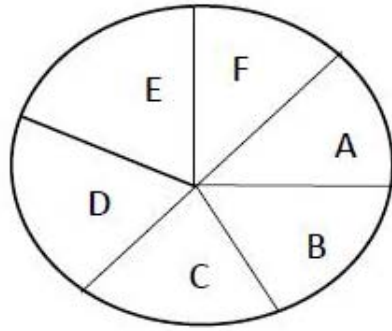
Options :

1. 16000
2. 12000
3. 10500
4. 16800

Question Number : 62 Question Id : 6232178389 Question Type : MCQ Option Shuffling : Yes Display Question Number : Yes
Single Line Question Option : No Option Orientation : Vertical

Wrong Marks : 0

The following Pie chart represents the percentage distribution of the expenditure incurred in publishing a book. Study the chart carefully and answer the question given below.



A – Printing cost 20%, B – Paper cost 25% C – Binding cost 20%, D – Royalty 15%
E – Promotion cost 10%, F – Transportation cost.

The angle of the sector corresponding to the expenditure incurred on the binding cost, is in degrees.

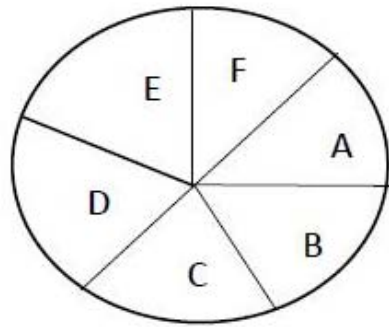
Options :

1. 36
2. 48
3. 72
4. 54

Question Number : 63 Question Id : 6232178390 Question Type : MCQ Option Shuffling : Yes Display Question Number : Yes
Single Line Question Option : No Option Orientation : Vertical

Wrong Marks : 0

The following Pie chart represents the percentage distribution of the expenditure incurred in publishing a book. Study the chart carefully and answer the question given below.



A – Printing cost 20%, B – Paper cost 25% C – Binding cost 20%, D – Royalty 15%
E – promotion cost 10%, F – Transportation cost.

If for a certain edition of a book, the paper cost in rupees 55000, then the expenditure involved for the printing and the transportation together is in rupees

Options :

1. 50000
2. 66000
3. 45000
4. 38750

Sub-Section Number: 5
Sub-Section Id: 623217281
Question Shuffling Allowed : Yes

Question Number : 64 Question Id : 6232178391 Question Type : MCQ Option Shuffling : Yes Display Question Number : Yes
Single Line Question Option : No Option Orientation : Vertical

Wrong Marks : 0

The following pollutants (s) can cause cancer in humans.

Options :

1. Mercury
2. Lead

Ozone

3.

Pesticides

4.

Question Number : 65 Question Id : 6232178392 Question Type : MCQ Option Shuffling : Yes Display Question Number : Yes
Single Line Question Option : No Option Orientation : Vertical

Wrong Marks : 0

Which year Biosphere reserve project was initiated in India?

Options :

1. 1986

2. 1984

3. 1989

4. 1985

Question Number : 66 Question Id : 6232178393 Question Type : MCQ Option Shuffling : Yes Display Question Number : Yes
Single Line Question Option : No Option Orientation : Vertical

Wrong Marks : 0

Phytoplanktons are the members of

Options :

1. Grass land ecosystem

2. Forest ecosystem

3. Aquatic ecosystem

4. Desert ecosystem

Question Number : 67 Question Id : 6232178394 Question Type : MCQ Option Shuffling : Yes Display Question Number : Yes
Single Line Question Option : No Option Orientation : Vertical

Wrong Marks : 0

Photosphere is described as the

Options :

1. Lower layer of atmosphere
2. Wave length of solar spectrum
3. Visible surface of the sun from which radiation emanates
4. Global warming

Question Number : 68 Question Id : 6232178395 Question Type : MCQ Option Shuffling : Yes Display Question Number : Yes
Single Line Question Option : No Option Orientation : Vertical
Wrong Marks : 0

The earthquake waves which have transverse movements are known as

Options :

1. Secondary waves
2. Tidal waves
3. Primary waves
4. Surface waves

Question Number : 69 Question Id : 6232178396 Question Type : MCQ Option Shuffling : Yes Display Question Number : Yes
Single Line Question Option : No Option Orientation : Vertical
Wrong Marks : 0

A lunar eclipse occurs when.

Options :

1. Sun, Moon and Earth are not in the same line
2. Earth comes between the Sun and the Moon
3. Moon comes between the Sun and the Earth
4. Sun comes between the Earth and the Moon

Question Number : 70 Question Id : 6232178397 Question Type : MCQ Option Shuffling : Yes Display Question Number : Yes
Single Line Question Option : No Option Orientation : Vertical

Wrong Marks : 0

“Joy water fall” is located in

Options :

1. Karnataka
2. Kerala
3. Andhra Pradesh
4. Maharashtra

Question Number : 71 Question Id : 6232178398 Question Type : MCQ Option Shuffling : Yes Display Question Number : Yes
Single Line Question Option : No Option Orientation : Vertical

Wrong Marks : 0

The central pollution Board was established under the following Act in India.

Options :

1. Water (Prevention and control of pollution) Act, 1974
2. Air (Prevention and control of pollution) Act, 1981
3. Urban area (Prevention and control of pollution) Act, 1976
4. Noise pollution (Regulations and control) Act, 2013

Question Number : 72 Question Id : 6232178399 Question Type : MCQ Option Shuffling : Yes Display Question Number : Yes
Single Line Question Option : No Option Orientation : Vertical

Wrong Marks : 0

According to Andhra Pradesh government sand mining policy announced on 4th September 2019, the stock yards are operated by.

Options :

1. APMDC
2. APPCB

3. CREDAI

4. AP Green Tribunal

Question Number : 73 Question Id : 6232178400 Question Type : MCQ Option Shuffling : Yes Display Question Number : Yes
Single Line Question Option : No Option Orientation : Vertical

Wrong Marks : 0

The full form of FTP is

Options :

1. File Transaction Protocol

2. File Truncation Protocol

3. File Transfer Protocol

4. File Transfer Processing

Question Number : 74 Question Id : 6232178401 Question Type : MCQ Option Shuffling : Yes Display Question Number : Yes
Single Line Question Option : No Option Orientation : Vertical

Wrong Marks : 0

With regard to computer memory which of the following statement (s) is/are true.

(i) ROM is volatile memory

(ii) RAM is volatile memory

(iii) Secondary memory is volatile

Options :

1. (i) only

2. (ii) only

3. Both (i) and (ii)

4. (i) and (iii) only

Question Number : 75 Question Id : 6232178402 Question Type : MCQ Option Shuffling : Yes Display Question Number : Yes
Single Line Question Option : No Option Orientation : Vertical

Wrong Marks : 0

If binary equivalent of the decimal number 48 is 110000, then the binary equivalent of decimal numbers 51 is

Options :

1. 110010
2. 110011
3. 110001
4. 110100

Question Number : 76 Question Id : 6232178403 Question Type : MCQ Option Shuffling : Yes Display Question Number : Yes
Single Line Question Option : No Option Orientation : Vertical

Wrong Marks : 0

Which of the following is not open source software?

Options :

1. Internet explorer
2. Open office
3. Fedora Linux
4. Apache HTTP server

Question Number : 77 Question Id : 6232178404 Question Type : MCQ Option Shuffling : Yes Display Question Number : Yes
Single Line Question Option : No Option Orientation : Vertical

Wrong Marks : 0

Fire wall in computers is used for

Options :

1. Security
2. Data transmission

3. Authentication

4. Monitoring

Question Number : 78 Question Id : 6232178405 Question Type : MCQ Option Shuffling : Yes Display Question Number : Yes
Single Line Question Option : No Option Orientation : Vertical

Wrong Marks : 0

IC chips for computer are made of

Options :

1. Silver

2. Aluminium

3. Silicon

4. Steel

Question Number : 79 Question Id : 6232178406 Question Type : MCQ Option Shuffling : Yes Display Question Number : Yes
Single Line Question Option : No Option Orientation : Vertical

Wrong Marks : 0

The following protect computer system from hackers.

Options :

1. Antivirus

2. Backup

3. Hard disk

4. Firewall

Question Number : 80 Question Id : 6232178407 Question Type : MCQ Option Shuffling : Yes Display Question Number : Yes
Single Line Question Option : No Option Orientation : Vertical

Wrong Marks : 0

“IT for mass” is a plan scheme.

Options :

1. Department of electronics and information technology
2. University grants commission
3. MHRD
4. AICTE

Question Number : 81 Question Id : 6232178408 Question Type : MCQ Option Shuffling : Yes Display Question Number : Yes
Single Line Question Option : No Option Orientation : Vertical

Wrong Marks : 0

The full form of NPTEL is

Options :

1. National Programme on Technology Enhanced Learning
2. National Programme on Technology Enforced Learning
3. National Project for Technology Enhanced Learning
4. National Project for Technology Enforced Learning

Question Number : 82 Question Id : 6232178409 Question Type : MCQ Option Shuffling : Yes Display Question Number : Yes
Single Line Question Option : No Option Orientation : Vertical

Wrong Marks : 0

The first Open University was set up in the State of

Options :

1. New Delhi
2. Arunachal Pradesh
3. Tamil Nadu
4. Andhra Pradesh

Question Number : 83 Question Id : 6232178410 Question Type : MCQ Option Shuffling : Yes Display Question Number : Yes
Single Line Question Option : No Option Orientation : Vertical

Wrong Marks : 0

During Vedic period the students who studied in Gurukula lived in

Options :

1. Ashram
2. Guru's house
3. Parents' home
4. Forest

Question Number : 84 Question Id : 6232178411 Question Type : MCQ Option Shuffling : Yes Display Question Number : Yes
Single Line Question Option : No Option Orientation : Vertical

Wrong Marks : 0

The concept of 'Smritimana' given by Yagya-Valkya was based on the principle of

Options :

1. Accuracy
2. Purity
3. Yagna
4. Memorization

Question Number : 85 Question Id : 6232178412 Question Type : MCQ Option Shuffling : Yes Display Question Number : Yes
Single Line Question Option : No Option Orientation : Vertical

Wrong Marks : 0

The Buddhist Education was offered in

Options :

1. Home
2. Sanghas
3. Ashramas

4. Congregation

Question Number : 86 Question Id : 6232178413 Question Type : MCQ Option Shuffling : Yes Display Question Number : Yes
Single Line Question Option : No Option Orientation : Vertical

Wrong Marks : 0

In an Open University one of the system of evaluation will be

Options :

1. Formal Assessment
2. Summative evaluation
3. Self – evaluation
4. Formative evaluation

Question Number : 87 Question Id : 6232178414 Question Type : MCQ Option Shuffling : Yes Display Question Number : Yes
Single Line Question Option : No Option Orientation : Vertical

Wrong Marks : 0

‘Build school in every village’ was propagated by

Options :

1. Robert De Nobilli
2. St Xavier
3. St. Thomas
4. Robert Clive

Question Number : 88 Question Id : 6232178415 Question Type : MCQ Option Shuffling : Yes Display Question Number : Yes
Single Line Question Option : No Option Orientation : Vertical

Wrong Marks : 0

An illiterate and ignorant nation can never make any solid progress and must fall back
in the race for life” said by

Options :

1. M.K. Gandhi

2. Sarvepalli Radhakrishnan

3. G.K. Gokhale

4. Raja Ram Mohan Roy

Question Number : 89 Question Id : 6232178416 Question Type : MCQ Option Shuffling : Yes Display Question Number : Yes
Single Line Question Option : No Option Orientation : Vertical

Wrong Marks : 0

The original meaning of 'Vandemataram' sung by students in the schools is

Options :

1. Long live the King

2. King is the God

3. King and God are alive

4. God save the King

Question Number : 90 Question Id : 6232178417 Question Type : MCQ Option Shuffling : Yes Display Question Number : Yes
Single Line Question Option : No Option Orientation : Vertical

Wrong Marks : 0

'Shikshak Samakhya' (Teacher Empowerment) was initiated and first began in the state of Madhya Pradesh by UNICEF emphasizes on

Options :

1. Teacher effectiveness

2. Teachers' creativity

3. Teacher autonomy

4. Teachers' creativity and Teacher autonomy

Fine Arts(Visual Arts)

Section Id :	62321794
Section Number :	2
Section type :	Online
Mandatory or Optional:	Mandatory
Number of Questions:	90
Number of Questions to be attempted:	90
Section Marks:	90
Display Number Panel:	Yes
Group All Questions:	No

Sub-Section Number:	1
Sub-Section Id:	623217282
Question Shuffling Allowed :	Yes

Question Number : 91 Question Id : 6232178418 Question Type : MCQ Option Shuffling : Yes Display Question Number : Yes
Single Line Question Option : No Option Orientation : Vertical

Wrong Marks : 0

Which is the chief text dealing with the iconography of goddess Durga Mahisasuramardini?

Options :

1. Markandeya Purana
2. Gita Govinda
3. Vishnu Purana
4. Skanda Purana

Question Number : 92 Question Id : 6232178419 Question Type : MCQ Option Shuffling : Yes Display Question Number : Yes
Single Line Question Option : No Option Orientation : Vertical

Wrong Marks : 0

In which Iconography , chakra purusha and Gada Devi are depicted as attending divinities of

Options :

1. Brahma
2. Vishnu
3. Shiva
4. Lakshmi

Question Number : 93 Question Id : 6232178420 Question Type : MCQ Option Shuffling : Yes Display Question Number : Yes
Single Line Question Option : No Option Orientation : Vertical

Wrong Marks : 0

Horse is a vehicle of

Options :

1. Yama
2. Varuna
3. Indra
4. Vayu

Question Number : 94 Question Id : 6232178421 Question Type : MCQ Option Shuffling : Yes Display Question Number : Yes
Single Line Question Option : No Option Orientation : Vertical

Wrong Marks : 0

Buddha Iconography represents

Options :

1. Different postures of Buddha
2. Jataka stories
3. Mythical concept of Buddha
4. Standing postures of Buddha

Question Number : 95 Question Id : 6232178422 Question Type : MCQ Option Shuffling : Yes Display Question Number : Yes
Single Line Question Option : No Option Orientation : Vertical

Wrong Marks : 0

On which gate of the sanchi Mahastupa is the 'War of Relics' sculpted

Options :

1. North Gate
2. South Gate
3. East Gate

West Gate

4.

Question Number : 96 Question Id : 6232178423 Question Type : MCQ Option Shuffling : Yes Display Question Number : Yes
Single Line Question Option : No Option Orientation : Vertical

Wrong Marks : 0

In which museum bust image of kushan emperor Kanishka is housed

Options :

1. National museum , New Delhi
2. Indian museum , Kolkata
3. Lohore museum ,Pakistan
4. Archaeological museum , Mathura

Question Number : 97 Question Id : 6232178424 Question Type : MCQ Option Shuffling : Yes Display Question Number : Yes
Single Line Question Option : No Option Orientation : Vertical

Wrong Marks : 0

Sarnath buddha was carved out of

Options :

1. Jodhapur sand stone
2. Ambaji Marble
3. Chunar sand Stone
4. Red sand stone

Question Number : 98 Question Id : 6232178425 Question Type : MCQ Option Shuffling : Yes Display Question Number : Yes
Single Line Question Option : No Option Orientation : Vertical

Wrong Marks : 0

Famous Parkham Yaksha housed in Mathura museum belongs to which period ?

Options :

1. Mauryana period

2. **Sunga period**

3. **Kushan period**

4. **Gupta period**

Question Number : 99 Question Id : 6232178426 Question Type : MCQ Option Shuffling : Yes Display Question Number : Yes Single Line Question Option : No Option Orientation : Vertical

Wrong Marks : 0

Which sculpture of elephant caves represents creation, protection and destruction ?

Options :

1. **Shiv-Parvati**

2. **Gangadhara**

3. **Trimurti**

4. **Yogishwara**

Question Number : 100 Question Id : 6232178427 Question Type : MCQ Option Shuffling : Yes Display Question Number : Yes Single Line Question Option : No Option Orientation : Vertical

Wrong Marks : 0

Which is the architectural style of the Khajuraho ?

Options :

1. **Dravid**

2. **Nagar**

3. **Yaksha**

4. **Mughal**

Question Number : 101 Question Id : 6232178428 Question Type : MCQ Option Shuffling : Yes Display Question Number : Yes Single Line Question Option : No Option Orientation : Vertical

Wrong Marks : 0

During whose reign Mughal architecture was predominantly influenced by Rajasthan architecture ?

Options :

1. Akbar
2. Jahangir
3. Shahjahan
4. Aurangzeb

Question Number : 102 Question Id : 6232178429 Question Type : MCQ Option Shuffling : Yes Display Question Number : Yes
Single Line Question Option : No Option Orientation : Vertical

Wrong Marks : 0

In Indian art, the term medhi is related to which discipline from following

Options :

1. Painting
2. Sculpture
3. Architecture
4. None of the other options

Question Number : 103 Question Id : 6232178430 Question Type : MCQ Option Shuffling : Yes Display Question Number : Yes
Single Line Question Option : No Option Orientation : Vertical

Wrong Marks : 0

Where is the temple called 'teli ka mandir' ?

Options :

1. Gwalior
2. Orchha
3. Jaipur
4. Bhopal

Question Number : 104 Question Id : 6232178431 Question Type : MCQ Option Shuffling : Yes Display Question Number : Yes
Single Line Question Option : No Option Orientation : Vertical

Wrong Marks : 0

Final of the famous Brihadeswara temple of Tanjavur represents the form of

Options :

1. Dhvaja
2. Trishul
3. Kalash
4. Stupika

Question Number : 105 Question Id : 6232178432 Question Type : MCQ Option Shuffling : Yes Display Question Number : Yes
Single Line Question Option : No Option Orientation : Vertical

Wrong Marks : 0

In India architecture, first time arched entrance appeared at

Options :

1. Ajanta caves
2. Lomash Rishi caves
3. Bagh caves
4. Badami caves

Question Number : 106 Question Id : 6232178433 Question Type : MCQ Option Shuffling : Yes Display Question Number : Yes
Single Line Question Option : No Option Orientation : Vertical

Wrong Marks : 0

Modhera Sun Temple was erected during the period of

Options :

1. Solanki dynasty
2. Pallava dynasty
3. Chola period

Chuluka

4.

Question Number : 107 Question Id : 6232178434 Question Type : MCQ Option Shuffling : Yes Display Question Number : Yes
Single Line Question Option : No Option Orientation : Vertical

Wrong Marks : 0

Who was the great artist of the Kishangarh school of painting ?

Options :

Manakhu

1.

Nihal chand

2.

Nain sukh

3.

Bishandas

4.

Question Number : 108 Question Id : 6232178435 Question Type : MCQ Option Shuffling : Yes Display Question Number : Yes
Single Line Question Option : No Option Orientation : Vertical

Wrong Marks : 0

Chavand Ragmala is an important painted manuscript from

Options :

Mewar

1.

Kishangarh

2.

Bundi

3.

Guler

4.

Question Number : 109 Question Id : 6232178436 Question Type : MCQ Option Shuffling : Yes Display Question Number : Yes
Single Line Question Option : No Option Orientation : Vertical

Wrong Marks : 0

Which of the following is not from Akbar reign ?

Options :

Hamzanama

1.

2. Tutinama

3. Akbarnama

4. Padshanama

Question Number : 110 Question Id : 6232178437 Question Type : MCQ Option Shuffling : Yes Display Question Number : Yes
Single Line Question Option : No Option Orientation : Vertical

Wrong Marks : 0

Illuminated manuscripted of kalpasutra is found from

Options :

1. Malwa

2. Gujarat

3. Orcha

4. Decan

Question Number : 111 Question Id : 6232178438 Question Type : MCQ Option Shuffling : Yes Display Question Number : Yes
Single Line Question Option : No Option Orientation : Vertical

Wrong Marks : 0

Basawan was court painter of which school ?

Options :

1. Pahari

2. Rajasthani

3. Mughal

4. Pal

Question Number : 112 Question Id : 6232178439 Question Type : MCQ Option Shuffling : Yes Display Question Number : Yes
Single Line Question Option : No Option Orientation : Vertical

Wrong Marks : 0

An Indus valley seal , representing a yogi figure with three heads and four animals around is called

Options :

1. Pashupati seal
2. Shiva seal
3. Yogi seal
4. Krishna seal

Question Number : 113 Question Id : 6232178440 Question Type : MCQ Option Shuffling : Yes Display Question Number : Yes
Single Line Question Option : No Option Orientation : Vertical

Wrong Marks : 0

Select the correct chronological order of architecture sites of wall paintings

Options :

1. Badami , Ajanta caves, ellora , Sittanavasal
2. Ajanta caves, Badami , Ellora , Sittanavasal
3. Ellora , Sittanavasal, Ajanta caves ,Badami
4. Sittanavasal ,Ajanta caves ,Badami , Ellora

Question Number : 114 Question Id : 6232178441 Question Type : MCQ Option Shuffling : Yes Display Question Number : Yes
Single Line Question Option : No Option Orientation : Vertical

Wrong Marks : 0

Who patronised the painter Raja Ravi Varma ?

Options :

1. Nizam of Hyderabad
2. King of mysore
3. King of sholapur

4. British Government

Question Number : 115 Question Id : 6232178442 Question Type : MCQ Option Shuffling : Yes Display Question Number : Yes
Single Line Question Option : No Option Orientation : Vertical

Wrong Marks : 0

Whose painting depicts photo realism ?

Options :

1. Vivan Sundaram
2. Bikas Bhattacharyaji
3. Ranbir kaleka
4. Manu Parikh

Question Number : 116 Question Id : 6232178443 Question Type : MCQ Option Shuffling : Yes Display Question Number : Yes
Single Line Question Option : No Option Orientation : Vertical

Wrong Marks : 0

Wooden sculpture created by Abanindranath Tagore are in the collection of

Options :

1. Lalit kal academy
2. National gallery of modern art
3. National museum of New delhi
4. Indian museum of Kolkata

Question Number : 117 Question Id : 6232178444 Question Type : MCQ Option Shuffling : Yes Display Question Number : Yes
Single Line Question Option : No Option Orientation : Vertical

Wrong Marks : 0

Whose paintings are related with tantric feel

Options :

1. V.S Gaitonde

2. K.K Hebbar

3. G.R Santosh

4. Vivan Sundaram

Question Number : 118 Question Id : 6232178445 Question Type : MCQ Option Shuffling : Yes Display Question Number : Yes
Single Line Question Option : No Option Orientation : Vertical

Wrong Marks : 0

Centre of Kalighat painting was

Options :

1. Calcutta

2. Delhi

3. Bombay

4. Madras

Question Number : 119 Question Id : 6232178446 Question Type : MCQ Option Shuffling : Yes Display Question Number : Yes
Single Line Question Option : No Option Orientation : Vertical

Wrong Marks : 0

Tiger in moon night ,1978 is work by the artist

Options :

1. Ram Kinkar Baij

2. Mrinalini Mukherjee

3. Anupam sood

4. Jogen Choudhary

Question Number : 120 Question Id : 6232178447 Question Type : MCQ Option Shuffling : Yes Display Question Number : Yes
Single Line Question Option : No Option Orientation : Vertical

Wrong Marks : 0

Kalibangan , an Indus valley civilization site is located in

Options :

1. Pakistan
2. Rajasthan
3. Punjab
4. Gujarat

Question Number : 121 Question Id : 6232178448 Question Type : MCQ Option Shuffling : Yes Display Question Number : Yes
Single Line Question Option : No Option Orientation : Vertical

Wrong Marks : 0

Who painted 'moonlight music party'?

Options :

1. Abanindranath Tagore
2. Nandal bose
3. Gaganendernath Tagore
4. Asit kumar Halder

Question Number : 122 Question Id : 6232178449 Question Type : MCQ Option Shuffling : Yes Display Question Number : Yes
Single Line Question Option : No Option Orientation : Vertical

Wrong Marks : 0

Santhal family was a work of

Options :

1. Asit Haldar
2. Ganesh Pyne
3. Rabindranath tagore
4. Ram kinker baij

Question Number : 123 Question Id : 6232178450 Question Type : MCQ Option Shuffling : Yes Display Question Number : Yes
Single Line Question Option : No Option Orientation : Vertical

Wrong Marks : 0

Who is the centric image in the paintings of Nandlal Bose ?

Options :

1. Shiva
2. Vishnu
3. Kali
4. Rama

Question Number : 124 Question Id : 6232178451 Question Type : MCQ Option Shuffling : Yes Display Question Number : Yes
Single Line Question Option : No Option Orientation : Vertical

Wrong Marks : 0

Himmat shah studied at

Options :

1. Delhi college of art
2. Vishnu bharati
3. M.S University
4. B.H.U

Question Number : 125 Question Id : 6232178452 Question Type : MCQ Option Shuffling : Yes Display Question Number : Yes
Single Line Question Option : No Option Orientation : Vertical

Wrong Marks : 0

Water –colour woodcut `Boats on padma 'in 1936 was made by

Options :

1. Amrita Shergill
2. Anupam sood
3. Ramendranath chakraborty

4. Jamini Roy

Question Number : 126 Question Id : 6232178453 Question Type : MCQ Option Shuffling : Yes Display Question Number : Yes
Single Line Question Option : No Option Orientation : Vertical

Wrong Marks : 0

Large number of pre – historic painting are found in

Options :

1. Orissa

2. Madhya Pradesh

3. karnataka

4. Maharashtra

Question Number : 127 Question Id : 6232178454 Question Type : MCQ Option Shuffling : Yes Display Question Number : Yes
Single Line Question Option : No Option Orientation : Vertical

Wrong Marks : 0

Leonardo da vinchi`s painting ` The last supper` is painted in which medium ?

Options :

1. Fresco

2. Oil paint

3. Acrylic

4. Water

Question Number : 128 Question Id : 6232178455 Question Type : MCQ Option Shuffling : Yes Display Question Number : Yes
Single Line Question Option : No Option Orientation : Vertical

Wrong Marks : 0

Which painting was created by Edouard Munch ?

Options :

1. The studio

2. Stone breaker
3. The scream
4. The blue circus

Question Number : 129 Question Id : 6232178456 Question Type : MCQ Option Shuffling : Yes Display Question Number : Yes
Single Line Question Option : No Option Orientation : Vertical

Wrong Marks : 0

France halls the dutch painters is the best known for his ?

Options :

1. Landscape painting
2. still life painting
3. portrait painting
4. murals

Question Number : 130 Question Id : 6232178457 Question Type : MCQ Option Shuffling : Yes Display Question Number : Yes
Single Line Question Option : No Option Orientation : Vertical

Wrong Marks : 0

From the following who is known for lithography posters

Options :

1. Pablo Picasso
2. E. Alkazi
3. Toulouse Lautrec
4. Degas

Question Number : 131 Question Id : 6232178458 Question Type : MCQ Option Shuffling : Yes Display Question Number : Yes
Single Line Question Option : No Option Orientation : Vertical

Wrong Marks : 0

The famous painting of Picasso

Options :

1. Last supper
2. Guernica
3. Sunflower
4. Birth of venus

Question Number : 132 Question Id : 6232178459 Question Type : MCQ Option Shuffling : Yes Display Question Number : Yes
Single Line Question Option : No Option Orientation : Vertical

Wrong Marks : 0

Painter who is known as father of cubism

Options :

1. Picasso
2. Cezanne
3. Braque
4. Van Gogh

Question Number : 133 Question Id : 6232178460 Question Type : MCQ Option Shuffling : Yes Display Question Number : Yes
Single Line Question Option : No Option Orientation : Vertical

Wrong Marks : 0

Where did Rococo art style blossom ?

Options :

1. Greece
2. France
3. Spain
4. Italy

Question Number : 134 Question Id : 6232178461 Question Type : MCQ Option Shuffling : Yes Display Question Number : Yes
Single Line Question Option : No Option Orientation : Vertical

Wrong Marks : 0

Who painted the raft of medusa ?

Options :

1. Theodore
2. Puet Mondrian
3. Wassily Kandinsky
4. Gustave Courbet

Question Number : 135 Question Id : 6232178462 Question Type : MCQ Option Shuffling : Yes Display Question Number : Yes
Single Line Question Option : No Option Orientation : Vertical

Wrong Marks : 0

Johann Joachim winckelmann is associated with

Options :

1. Romanticism
2. Neoclassicm
3. Realism
4. Impressionism

Question Number : 136 Question Id : 6232178463 Question Type : MCQ Option Shuffling : Yes Display Question Number : Yes
Single Line Question Option : No Option Orientation : Vertical

Wrong Marks : 0

Who is colour field painter

Options :

1. Mark Rothoko
2. Paul Klee
3. Jackson Pollock

4. Bridget Riley

Question Number : 137 Question Id : 6232178464 Question Type : MCQ Option Shuffling : Yes Display Question Number : Yes
Single Line Question Option : No Option Orientation : Vertical

Wrong Marks : 0

Alexander Calder is known as

Options :

1. Sculptor

2. Painter

3. Graphic Artist

4. Art historian

Question Number : 138 Question Id : 6232178465 Question Type : MCQ Option Shuffling : Yes Display Question Number : Yes
Single Line Question Option : No Option Orientation : Vertical

Wrong Marks : 0

The 'Blue Circus' is painted by

Options :

1. Henri Matisse

2. Joan Miro

3. Marc Chagall

4. John Kennedy

Question Number : 139 Question Id : 6232178466 Question Type : MCQ Option Shuffling : Yes Display Question Number : Yes
Single Line Question Option : No Option Orientation : Vertical

Wrong Marks : 0

Who has called his paintings 'Hand Painted' dream images?

Options :

1. Picasso

2. Salvador Dali

3. Joan miro

4. Franz marc

Question Number : 140 Question Id : 6232178467 Question Type : MCQ Option Shuffling : Yes Display Question Number : Yes
Single Line Question Option : No Option Orientation : Vertical

Wrong Marks : 0

Luca Della Robbia is a

Options :

1. Cinematographer

2. sculptor

3. Musician

4. Dancer

Question Number : 141 Question Id : 6232178468 Question Type : MCQ Option Shuffling : Yes Display Question Number : Yes
Single Line Question Option : No Option Orientation : Vertical

Wrong Marks : 0

Etruscan art related to

Options :

1. Ancient Egypt

2. Ancient Greek

3. Ancient Rome

4. Ancient China

Question Number : 142 Question Id : 6232178469 Question Type : MCQ Option Shuffling : Yes Display Question Number : Yes
Single Line Question Option : No Option Orientation : Vertical

Wrong Marks : 0

Notre dame at Paris is

Options :

1. Chapel
2. Church
3. cathedral
4. Basilica

Question Number : 143 Question Id : 6232178470 Question Type : MCQ Option Shuffling : Yes Display Question Number : Yes
Single Line Question Option : No Option Orientation : Vertical

Wrong Marks : 0

A group of constructivist sculptors are

Options :

1. Malevich, Gabo, Radchenko
2. Picasso, Malevich, Gabo
3. Picasso, Tatlin, Pevsner
4. Tatlin, Boccioni, Jeanarp

Question Number : 144 Question Id : 6232178471 Question Type : MCQ Option Shuffling : Yes Display Question Number : Yes
Single Line Question Option : No Option Orientation : Vertical

Wrong Marks : 0

Marx Earnst associated with

Options :

1. Surlism
2. Futurism
3. Post Modernism
4. Dadaism

Question Number : 145 Question Id : 6232178472 Question Type : MCQ Option Shuffling : Yes Display Question Number : Yes
Single Line Question Option : No Option Orientation : Vertical

Wrong Marks : 0

Porcelain can only be cast by the following process

Options :

1. Lost wax
2. Press Mould
3. Piece Mould
4. Slip casting

Question Number : 146 Question Id : 6232178473 Question Type : MCQ Option Shuffling : Yes Display Question Number : Yes
Single Line Question Option : No Option Orientation : Vertical

Wrong Marks : 0

Ukio-e is a genre of wood block printing which flourished in Japan from

Options :

1. 12th and 13th century
2. 14th to 16th century
3. 17th and 19th century
4. 18th to 19th century

Question Number : 147 Question Id : 6232178474 Question Type : MCQ Option Shuffling : Yes Display Question Number : Yes
Single Line Question Option : No Option Orientation : Vertical

Wrong Marks : 0

Who is described as 'Japan' consummate visual communicator ?

Options :

1. Shiego Fukudo
2. Masaru Katsumi

3. **Giovani Pintori**

4. **Stefan sagmesistar**

Question Number : 148 Question Id : 6232178475 Question Type : MCQ Option Shuffling : Yes Display Question Number : Yes Single Line Question Option : No Option Orientation : Vertical

Wrong Marks : 0

Which one of these is a famous Hindu monument in Indonesia?

Options :

1. **Borobudur**

2. **Angkorwat**

3. **Prambanam**

4. **Angkorthom**

Question Number : 149 Question Id : 6232178476 Question Type : MCQ Option Shuffling : Yes Display Question Number : Yes Single Line Question Option : No Option Orientation : Vertical

Wrong Marks : 0

Which one of these is not a style of Kalakari Art ?

Options :

1. **Masulipatnam**

2. **Kanchipuram**

3. **Karrupar**

4. **Srikalahasti**

Question Number : 150 Question Id : 6232178477 Question Type : MCQ Option Shuffling : Yes Display Question Number : Yes Single Line Question Option : No Option Orientation : Vertical

Wrong Marks : 0

Malar Artist are known for this

Options :

1. Wood carving

2. Terracotta

3. Metal casting

4. Iron work

Question Number : 151 Question Id : 6232178478 Question Type : MCQ Option Shuffling : Yes Display Question Number : Yes
Single Line Question Option : No Option Orientation : Vertical

Wrong Marks : 0

Kantha is a folk form of textile where does it comes from

Options :

1. Orissa

2. Bihar

3. Bengal

4. Andhra Pradesh

Question Number : 152 Question Id : 6232178479 Question Type : MCQ Option Shuffling : Yes Display Question Number : Yes
Single Line Question Option : No Option Orientation : Vertical

Wrong Marks : 0

To print photographic tones the image converted in to a series of

Options :

1. Dots

2. Lines

3. Lines and Dots

4. Pixels

Question Number : 153 Question Id : 6232178480 Question Type : MCQ Option Shuffling : Yes Display Question Number : Yes
Single Line Question Option : No Option Orientation : Vertical

Wrong Marks : 0

Collage plate printing process was introduced in India by

Options :

1. Kanwal Krishna
2. Jai Jharotia
3. Paramjeet singh
4. Yusuf

Question Number : 154 Question Id : 6232178481 Question Type : MCQ Option Shuffling : Yes Display Question Number : Yes
Single Line Question Option : No Option Orientation : Vertical

Wrong Marks : 0

intaglio is a technique of

Options :

1. Photography
2. Printmaking
3. Serigraphy
4. Sculpture

Question Number : 155 Question Id : 6232178482 Question Type : MCQ Option Shuffling : Yes Display Question Number : Yes
Single Line Question Option : No Option Orientation : Vertical

Wrong Marks : 0

A technique of two colour half- tone printing done from two identical plates of a single colour image is called

Options :

1. Half-tone
2. Duotone

Continous tone

3.

Quarter tone

4.

Question Number : 156 Question Id : 6232178483 Question Type : MCQ Option Shuffling : Yes Display Question Number : Yes
Single Line Question Option : No Option Orientation : Vertical

Wrong Marks : 0

Stencil technique in visual art is also reffered as

Options :

1. Etching

2. Pochoir

3. Graffiti

4. Island

Question Number : 157 Question Id : 6232178484 Question Type : MCQ Option Shuffling : Yes Display Question Number : Yes
Single Line Question Option : No Option Orientation : Vertical

Wrong Marks : 0

The earliest print making technique first developed as a mean of

Options :

1. Patterns on cloth

2. Image on paper

3. Text on paper

4. Symbols on billboard

Question Number : 158 Question Id : 6232178485 Question Type : MCQ Option Shuffling : Yes Display Question Number : Yes
Single Line Question Option : No Option Orientation : Vertical

Wrong Marks : 0

A unit of type size is point seventy two points approximately equalling

Options :

1. A centimetre
2. An inch
3. A millimetre
4. A Meter

Question Number : 159 Question Id : 6232178486 Question Type : MCQ Option Shuffling : Yes Display Question Number : Yes
Single Line Question Option : No Option Orientation : Vertical
Wrong Marks : 0

Bronze is an alloy of

Options :

1. Aluminium and zinc
2. Aluminium, zinc and yin
3. Copper, Zinc and Tin
4. Copper, zinc and Iron

Question Number : 160 Question Id : 6232178487 Question Type : MCQ Option Shuffling : Yes Display Question Number : Yes
Single Line Question Option : No Option Orientation : Vertical
Wrong Marks : 0

Bauhaus is movement evolved in

Options :

1. Weimar, Germany
2. New York, USA
3. Bahirian, UAE
4. Moscow , Russia

Question Number : 161 Question Id : 6232178488 Question Type : MCQ Option Shuffling : Yes Display Question Number : Yes
Single Line Question Option : No Option Orientation : Vertical

Wrong Marks : 0

Who was the architect of Chandigarh ?

Options :

1. Charles Correa
2. Le Corbusier
3. Philp Johson
4. Satish Gujral

Question Number : 162 Question Id : 6232178489 Question Type : MCQ Option Shuffling : Yes Display Question Number : Yes
Single Line Question Option : No Option Orientation : Vertical

Wrong Marks : 0

Select the correct sequence of colour occurred in rainbow

Options :

1. Blue, Indigo, Violet, Green
2. Indigo, Blue, Green, Violet
3. Green, Violet, Indigo, Blue
4. Violet, Indigo, Blue, Green

Question Number : 163 Question Id : 6232178490 Question Type : MCQ Option Shuffling : Yes Display Question Number : Yes
Single Line Question Option : No Option Orientation : Vertical

Wrong Marks : 0

Who is attributed from the following to make powerful muscular female figure in action ?

Options :

1. Rodin
2. Bernini
3. Maillol

4. Duchamp

Question Number : 164 Question Id : 6232178491 Question Type : MCQ Option Shuffling : Yes Display Question Number : Yes
Single Line Question Option : No Option Orientation : Vertical

Wrong Marks : 0

Which of the following is an example of sales promotional tool ?

Options :

1. The media mix
2. A money refund offer
3. Consumer promotion
4. Market segmentation

Question Number : 165 Question Id : 6232178492 Question Type : MCQ Option Shuffling : Yes Display Question Number : Yes
Single Line Question Option : No Option Orientation : Vertical

Wrong Marks : 0

. Match the following

- | | |
|--------------------|-----------------------|
| a) Oleography | (i) Intaglio printing |
| b) Metal engraving | (ii) Stencil printing |
| c) Wood engraving | (iii) Planography |
| d) Silk Screen | (iv) Relief printing |

Options :

1. (i) (iv) (ii) (iii)
2. (iv) (ii) (iii) (i)
3. (ii) (iii) (i) (iv)

4. (iii) (i) (iv) (ii)

Question Number : 166 Question Id : 6232178493 Question Type : MCQ Option Shuffling : Yes Display Question Number : Yes
Single Line Question Option : No Option Orientation : Vertical

Wrong Marks : 0

Who experimented with photographic technique of `Solarisation from the mid -1920`s?

Options :

1. Man Ray
2. Louis Daguerre
3. John Heinrich Schulze
4. W. Henry Fox Talbot

Question Number : 167 Question Id : 6232178494 Question Type : MCQ Option Shuffling : Yes Display Question Number : Yes
Single Line Question Option : No Option Orientation : Vertical

Wrong Marks : 0

Scraper is used on plate for

Options :

1. Polishing
2. Scraping
3. Texturing
4. Burnishing

Question Number : 168 Question Id : 6232178495 Question Type : MCQ Option Shuffling : Yes Display Question Number : Yes
Single Line Question Option : No Option Orientation : Vertical

Wrong Marks : 0

Company`s logo is its

Options :

1. Corporate Image

2. Corporate Identity

3. Brand Recognition

4. Brand Image

Question Number : 169 Question Id : 6232178496 Question Type : MCQ Option Shuffling : Yes Display Question Number : Yes
Single Line Question Option : No Option Orientation : Vertical

Wrong Marks : 0

Which one of these is not a form of outdoor advertising ?

Options :

1. Bill Board

2. Bus Shelter

3. Dangher

4. Kiosk

Question Number : 170 Question Id : 6232178497 Question Type : MCQ Option Shuffling : Yes Display Question Number : Yes
Single Line Question Option : No Option Orientation : Vertical

Wrong Marks : 0

Impasto technique is related with

Options :

1. Painting

2. Print making

3. Photography

4. Digital Photography

Question Number : 171 Question Id : 6232178498 Question Type : MCQ Option Shuffling : Yes Display Question Number : Yes
Single Line Question Option : No Option Orientation : Vertical

Wrong Marks : 0

find the sculptor

Options :

1. Biren de
2. Prakash jha
3. Pardosh Das Gupta
4. R. Shiv Kumar

Question Number : 172 Question Id : 6232178499 Question Type : MCQ Option Shuffling : Yes Display Question Number : Yes
Single Line Question Option : No Option Orientation : Vertical

Wrong Marks : 0

Which sculptor is more known for portraiture?

Options :

1. Somananth Hore
2. Ram Sutra
3. P.V Janakiram
4. Balbir singh katt

Question Number : 173 Question Id : 6232178500 Question Type : MCQ Option Shuffling : Yes Display Question Number : Yes
Single Line Question Option : No Option Orientation : Vertical

Wrong Marks : 0

`Art and illusion ` is written by

Options :

1. Stella kramirisch
2. Michael Meister
3. E.H.Gombrich
4. Rudolf Arnheim

Question Number : 174 Question Id : 6232178501 Question Type : MCQ Option Shuffling : Yes Display Question Number : Yes
Single Line Question Option : No Option Orientation : Vertical

Wrong Marks : 0

The sculpture `Flute Player ` by Bhanraj Bhagat is made of

Options :

1. Wood
2. Plaster
3. Cement
4. Copper

Question Number : 175 Question Id : 6232178502 Question Type : MCQ Option Shuffling : Yes Display Question Number : Yes
Single Line Question Option : No Option Orientation : Vertical

Wrong Marks : 0

Who said `Art is a lie that tells the truth?

Options :

1. Tolstoy
2. Picasso
3. Freud
4. Plato

Question Number : 176 Question Id : 6232178503 Question Type : MCQ Option Shuffling : Yes Display Question Number : Yes
Single Line Question Option : No Option Orientation : Vertical

Wrong Marks : 0

The value of White, Black or any colour is called

Options :

1. Value
2. Hues
3. Chroma

Tints

4.

Question Number : 177 Question Id : 6232178504 Question Type : MCQ Option Shuffling : Yes Display Question Number : Yes
Single Line Question Option : No Option Orientation : Vertical

Wrong Marks : 0

‘Varnika Bangam’ is among the

Options :

1. Five elements of art
2. Six Principles of art
3. Six limbs of art
4. Two specialization of art

Question Number : 178 Question Id : 6232178505 Question Type : MCQ Option Shuffling : Yes Display Question Number : Yes
Single Line Question Option : No Option Orientation : Vertical

Wrong Marks : 0

‘Man with Dog’ is a sculpture by

Options :

1. Auguste Rodin
2. Aristide Maillol
3. Dhruva Mistry
4. Mahendra Pandya

Question Number : 179 Question Id : 6232178506 Question Type : MCQ Option Shuffling : Yes Display Question Number : Yes
Single Line Question Option : No Option Orientation : Vertical

Wrong Marks : 0

Who sculpted ‘Triumph of labour’ ?

Options :

1. D.P Roy choudhary

2. P.V Jankiram

3. M. Dharmini

4. Mahendra Pandya

Question Number : 180 Question Id : 6232178507 Question Type : MCQ Option Shuffling : Yes Display Question Number : Yes
Single Line Question Option : No Option Orientation : Vertical

Wrong Marks : 0

Who sculpted ` David ' ?

Options :

1. Donatello

2. Lorenzo Ghiberti

3. Cellini

4. Bologna