

Andhra Pradesh State Council of Higher Education

Question Paper Name: ECONOMICS
Subject Name: ECONOMICS
Creation Date: 2019-11-08 13:40:57
Duration: 180
Total Marks: 180
Display Marks: Yes
Share Answer Key With Delivery Engine: Yes

ECONOMICS

Group Number : 1
Group Id : 6232178
Group Maximum Duration : 0
Group Minimum Duration : 180
Revisit allowed for view? : No
Revisit allowed for edit? : No
Break time: 0
Group Marks: 180
Revisit allowed for group Instructions? : Yes
Maximum Instruction Time: 0
Minimum Instruction Time: 0

Teaching and Research Aptitude

Section Id : 62321715
Section Number : 1
Section type : Online
Mandatory or Optional: Mandatory
Number of Questions: 82
Number of Questions to be attempted: 82
Section Marks: 90
Display Number Panel: Yes
Group All Questions: No

Sub-Section Number: 1
Sub-Section Id: 62321743
Question Shuffling Allowed : Yes

Question Number : 1 Question Id : 6232171268 Question Type : MCQ Option Shuffling : Yes Display Question Number : Yes
Single Line Question Option : No Option Orientation : Vertical

Wrong Marks : 0

Discussion method can be used when

Options :

1. the topic is different
2. the topic is easy
3. the topic is very difficult
4. the topic is known

Question Number : 2 Question Id : 6232171269 Question Type : MCQ Option Shuffling : Yes Display Question Number : Yes
Single Line Question Option : No Option Orientation : Vertical
Wrong Marks : 0

Which of the following is not a teaching aid?

Options :

1. 16 mm film projector
2. Working model of photosynthesis
3. Tape records
4. Computer system

Question Number : 3 Question Id : 6232171270 Question Type : MCQ Option Shuffling : Yes Display Question Number : Yes
Single Line Question Option : No Option Orientation : Vertical
Wrong Marks : 0

The quality of teaching is reflected

Options :

1. by the quality questions asked by students
2. by the duration of sentence maintained in the class
3. by the pass percentage of students

by the attendance of students in the class

4.

Question Number : 4 Question Id : 6232171271 Question Type : MCQ Option Shuffling : Yes Display Question Number : Yes
Single Line Question Option : No Option Orientation : Vertical

Wrong Marks : 0

The detention system in primary schools may reflect the

Options :

1. pass rate in the classroom
2. absenteeism of students
3. drop-out rate increase
4. disinterest among the students

Question Number : 5 Question Id : 6232171272 Question Type : MCQ Option Shuffling : Yes Display Question Number : Yes
Single Line Question Option : No Option Orientation : Vertical

Wrong Marks : 0

The team teaching has the potential to develop

Options :

1. the habit of supplementary teaching of each other
2. competitive spirit among students
3. co-operation among the students
4. highlighting the gaps in each other's teaching

Question Number : 6 Question Id : 6232171273 Question Type : MCQ Option Shuffling : Yes Display Question Number : Yes
Single Line Question Option : No Option Orientation : Vertical

Wrong Marks : 0

In open learning system, the teacher's role is to

Options :

1. guide the students of their interest
2. supply material needed
3. give coaching through a centre
4. leave the students to learn on their own

Question Number : 7 Question Id : 6232171274 Question Type : MCQ Option Shuffling : Yes Display Question Number : Yes
Single Line Question Option : No Option Orientation : Vertical
Wrong Marks : 0

One of the most powerful factors affecting teaching is related to

Options :

1. prevailing political situation
2. economic status of the student
3. social system of the country
4. education system

Question Number : 8 Question Id : 6232171275 Question Type : MCQ Option Shuffling : Yes Display Question Number : Yes
Single Line Question Option : No Option Orientation : Vertical
Wrong Marks : 0

In which teaching method learner's participation is made optional and pro-active?

Options :

1. Project method
2. Buzz session
3. Discussion method

Brain storming session

4.

Question Number : 9 Question Id : 6232171276 Question Type : MCQ Option Shuffling : Yes Display Question Number : Yes
Single Line Question Option : No Option Orientation : Vertical

Wrong Marks : 0

Effectiveness of teaching has to be judged in terms of

Options :

1. student's interest
2. learning outcomes
3. course coverage
4. use of teaching aids in the classroom

Question Number : 10 Question Id : 6232171277 Question Type : MCQ Option Shuffling : Yes Display Question Number : Yes
Single Line Question Option : No Option Orientation : Vertical

Wrong Marks : 0

Formulation of hypothesis may not be necessary in

Options :

1. normative studies
2. experimental studies
3. historical studies
4. survey studies

Question Number : 11 Question Id : 6232171278 Question Type : MCQ Option Shuffling : Yes Display Question Number : Yes
Single Line Question Option : No Option Orientation : Vertical

Wrong Marks : 0

The information about population is called a parameter while the information corresponding to a sample is called

Options :

1. Inference
2. Universe
3. Sampling design
4. Statistic

Question Number : 12 Question Id : 6232171279 Question Type : MCQ Option Shuffling : Yes Display Question Number : Yes
Single Line Question Option : No Option Orientation : Vertical
Wrong Marks : 0

Reliability of a research result implies its

Options :

1. usefulness
2. uniqueness
3. verifiability
4. validity

Question Number : 13 Question Id : 6232171280 Question Type : MCQ Option Shuffling : Yes Display Question Number : Yes
Single Line Question Option : No Option Orientation : Vertical
Wrong Marks : 0

A good researcher lays his hands on

Options :

1. any area of his interest
2. many areas and tries to understand them at basic level
3. a specific area and tries to study it in great details

4. a specific area and tries to study it in minute details

Question Number : 14 Question Id : 6232171281 Question Type : MCQ Option Shuffling : Yes Display Question Number : Yes
Single Line Question Option : No Option Orientation : Vertical

Wrong Marks : 0

The usual sequence of steps in doing action research is

Options :

1. reflect, observe, plan, act

2. plan, act, observe, reflect

3. plan, reflect, observe, act

4. act, observe, plan, reflect

Question Number : 15 Question Id : 6232171282 Question Type : MCQ Option Shuffling : Yes Display Question Number : Yes
Single Line Question Option : No Option Orientation : Vertical

Wrong Marks : 0

Which one of the following is a non-probabilistic method of sampling?

Options :

1. Stratified sampling

2. Purposive sampling

3. Systematic sampling

4. Simple random sampling

Question Number : 16 Question Id : 6232171283 Question Type : MCQ Option Shuffling : Yes Display Question Number : Yes
Single Line Question Option : No Option Orientation : Vertical

Wrong Marks : 0

The appropriate sequence of steps of research that a researcher has to follow is

- A) Collection of data
- B) Listing of the objectives of research
- C) Methodology to be adopted
- D) Data analysis
- E) Results and discussion
- F) Identification of the research problem

Options :

1. F, C, B, D, A, E

2. F, B, A, D, C, E

3. F, A, B, C, D, E

4. F, B, C, A, D, E

Question Number : 17 Question Id : 6232171284 Question Type : MCQ Option Shuffling : Yes Display Question Number : Yes
Single Line Question Option : No Option Orientation : Vertical

Wrong Marks : 0

The research stream that has an immediate application is

Options :

1. Action research

2. Empirical research

3. Fundamental research

4. Experimental research

Question Number : 18 Question Id : 6232171285 Question Type : MCQ Option Shuffling : Yes Display Question Number : Yes
Single Line Question Option : No Option Orientation : Vertical

Wrong Marks : 0

Ethical norms in research do not involve guidelines for

Options :

1. patenting policy
2. data sharing policy
3. copy right policy
4. format of thesis

Sub-Section Number:	2
Sub-Section Id:	62321744
Question Shuffling Allowed :	Yes

Question Id : 6232171286 Question Type : COMPREHENSION Sub Question Shuffling Allowed : Yes Group Comprehension Questions : No

Question Numbers : (19 to 27)

Question Label : Comprehension

Read the following passage and answer the questions given:

Education and ambition by themselves would have taken people nowhere without an expanding economy. Perhaps, even, the expanding economy explained the shift in Indian education. For Pravas, an engineer, the expansion had started some time before independence, when the old British emphasis on law and order (especially after the Indian Mutiny of 1857) had been modified by the idea of development.

Many people were sucked into that process. There was an explosive growth in India around 1930. It built momentum around 1947, had a big growth thereafter, and is now slowing down. In 1962, when I was thinking of universities and a career, I had a choice of professions and institutions. People today have to struggle hard. But these things have a positive side.

‘The average aspiration of the Indian is to grow under a shadow-and this is all right as long as someone else throws the shadow. In concrete terms, this means you look for employment, you try to get into structures created by other people. That’s how we got governed in the first place. The attitude is “As long as the local environment is the same, I don’t care who is running things at the top”. I read something in a paper some time ago. It was to the effect that, before the British came to India, the Indians were like bees in a garden. And that’s fine as long as someone else looked after the garden. And of course the Britishers became both the owners of the garden and the gardeners, the *malis* – with those other guys, the bees, going happily from flower to flower’.

‘What about the positive side of the struggle today?’

‘That shadow area I talked about is becoming congested now. It is forcing people to go out on their own. It is forcing them to be entrepreneurial.’

Sub questions

Question Number : 19 Question Id : 6232171287 Question Type : MCQ Option Shuffling : Yes Display Question Number : Yes
Single Line Question Option : No Option Orientation : Vertical

Wrong Marks : 0

What is fundamental for the growth of a nation?

Options :

1. Education
2. Ambition
3. Economy
4. Law and order

Question Number : 20 Question Id : 6232171288 Question Type : MCQ Option Shuffling : Yes Display Question Number : Yes
Single Line Question Option : No Option Orientation : Vertical
Wrong Marks : 0

What did the British emphasize on after the Indian Mutiny of 1857?

Options :

1. The idea of development
2. Law and order
3. Ancient Indian model of education
4. Expansion of the Empire

Question Number : 21 Question Id : 6232171289 Question Type : MCQ Option Shuffling : Yes Display Question Number : Yes
Single Line Question Option : No Option Orientation : Vertical
Wrong Marks : 0

When did choice of professions and institutions become comparatively easier?

Options :

1. After 1857
2. Around 1962
3. Around 1930

After 1947

4.

Question Number : 22 Question Id : 6232171290 Question Type : MCQ Option Shuffling : Yes Display Question Number : Yes
Single Line Question Option : No Option Orientation : Vertical

Wrong Marks : 0

What is the average aspiration of the Indian?

Options :

1. Employment in structures created by other people

1.

2. To be governed by the British

2.

3. Expanding economy

3.

4. Self employment

4.

Question Number : 23 Question Id : 6232171291 Question Type : MCQ Option Shuffling : Yes Display Question Number : Yes
Single Line Question Option : No Option Orientation : Vertical

Wrong Marks : 0

According to the passage, what is the concern of Indians?

Options :

1. The rulers at the helm of affairs

1.

2. Newspaper items

2.

3. Engineering education

3.

4. Local environment

4.

Question Number : 24 Question Id : 6232171292 Question Type : MCQ Option Shuffling : Yes Display Question Number : Yes
Single Line Question Option : No Option Orientation : Vertical

Wrong Marks : 0

Who are compared to bees in a garden?

Options :

1. The British officers
2. The Indians
3. The gardeners
4. Owners of the garden

Question Number : 25 Question Id : 6232171293 Question Type : MCQ Option Shuffling : Yes Display Question Number : Yes
Single Line Question Option : No Option Orientation : Vertical
Wrong Marks : 0

Who become the owners of the garden and the gardeners?

Options :

1. Only the bees
2. The Indians
3. Only the flowers
4. The Britishers

Question Number : 26 Question Id : 6232171294 Question Type : MCQ Option Shuffling : Yes Display Question Number : Yes
Single Line Question Option : No Option Orientation : Vertical
Wrong Marks : 0

What is the positive side of the struggle?

Options :

1. Indian find shelter
2. Indians love green gardens
3. Indians are forced to be entrepreneurial

4. Indians could freely roam around

Question Number : 27 Question Id : 6232171295 Question Type : MCQ Option Shuffling : Yes Display Question Number : Yes
Single Line Question Option : No Option Orientation : Vertical

Wrong Marks : 0

What do you understand by “That shadow area is becoming congested now”?

Options :

1. Densely populated
2. Heavy competition for employment in structures created by other people
3. Shadow becomes darker
4. Thinly populated

Sub-Section Number:	3
Sub-Section Id:	62321745
Question Shuffling Allowed :	Yes

Question Number : 28 Question Id : 6232171296 Question Type : MCQ Option Shuffling : Yes Display Question Number : Yes
Single Line Question Option : No Option Orientation : Vertical

Wrong Marks : 0

The non-verbal communication is also known as

Options :

1. Speaking communication
2. Verbal communication
3. Body language
4. Interpersonal communication

Question Number : 29 Question Id : 6232171297 Question Type : MCQ Option Shuffling : Yes Display Question Number : Yes
Single Line Question Option : No Option Orientation : Vertical

Wrong Marks : 0

The communication about the relationship among people is called

Options :

1. Interpersonal communication
2. Meta-communication
3. Speaking communication
4. Media communication

Question Number : 30 Question Id : 6232171298 Question Type : MCQ Option Shuffling : Yes Display Question Number : Yes
Single Line Question Option : No Option Orientation : Vertical

Wrong Marks : 0

Communication with touch behaviour called

Options :

1. Aesthetics
2. Proximics
3. Eugenics
4. Haptics

Question Number : 31 Question Id : 6232171299 Question Type : MCQ Option Shuffling : Yes Display Question Number : Yes
Single Line Question Option : No Option Orientation : Vertical

Wrong Marks : 0

Effective communication involves

Options :

1. One-way process
2. Two-way communication

3. Two-way communication with feedback

4. Two-way communication and Two-way communication with feedback

Question Number : 32 Question Id : 6232171300 Question Type : MCQ Option Shuffling : Yes Display Question Number : Yes
Single Line Question Option : No Option Orientation : Vertical

Wrong Marks : 0

One of the following is not related to communication cycle.

Options :

1. Sender

2. Message

3. Channel

4. Noise

Question Number : 33 Question Id : 6232171301 Question Type : MCQ Option Shuffling : Yes Display Question Number : Yes
Single Line Question Option : No Option Orientation : Vertical

Wrong Marks : 0

“With words we govern peoples”, said by

Options :

1. John Dewey

2. Benjamin Disrael

3. Rufford Murdock

4. Mc Greger

Question Number : 34 Question Id : 6232171302 Question Type : MCQ Option Shuffling : Yes Display Question Number : Yes
Single Line Question Option : No Option Orientation : Vertical

Wrong Marks : 0

The number of ingredients involved in the Aristotle's model of communication are

Options :

1. 5
2. 4
3. 3
4. 2

Question Number : 35 Question Id : 6232171303 Question Type : MCQ Option Shuffling : Yes Display Question Number : Yes
Single Line Question Option : No Option Orientation : Vertical

Wrong Marks : 0

'Shared Experience' is considered to be a key element in communication emphasised by

Options :

1. John Dewey
2. Aristotle
3. David Berlo
4. John Locke

Question Number : 36 Question Id : 6232171304 Question Type : MCQ Option Shuffling : Yes Display Question Number : Yes
Single Line Question Option : No Option Orientation : Vertical

Wrong Marks : 0

The 'Nobel' style of communication is on one of the following elements.

Options :

1. Rehetoric
2. Non-assertion

Persuasion

3.

Authority

4.

Question Number : 37 Question Id : 6232171305 Question Type : MCQ Option Shuffling : Yes Display Question Number : Yes
Single Line Question Option : No Option Orientation : Vertical

Wrong Marks : 0

The following numbers have a pattern. Identify the pattern and fill the blank.

165, 195, 255, 285, _____.

Options :

345

1.

365

2.

395

3.

435

4.

Question Number : 38 Question Id : 6232171306 Question Type : MCQ Option Shuffling : Yes Display Question Number : Yes
Single Line Question Option : No Option Orientation : Vertical

Wrong Marks : 0

The following words have a pattern. Identify the pattern and fill the blank.

CDJP, EEIQ, GFGS, _____, KHZZ.

Options :

IGDU

1.

IGDV

2.

JGDU

3.

GJDV

4.

Question Number : 39 Question Id : 6232171307 Question Type : MCQ Option Shuffling : Yes Display Question Number : Yes
Single Line Question Option : No Option Orientation : Vertical

Wrong Marks : 0

The following words have a pattern. Identify the pattern and fill the blank.

ACE, JJJ, SQO, BXT, _____.

Options :

1. KKK

2. JEK

3. ZAB

4. KEY

Question Number : 40 Question Id : 6232171308 Question Type : MCQ Option Shuffling : Yes Display Question Number : Yes
Single Line Question Option : No Option Orientation : Vertical

Wrong Marks : 0

The following items have a pattern. Identify the pattern and fill the blank.

B2E, D5H, F12K, H27N, _____.

Options :

1. J56I

2. J58Q

3. I64Q

4. Q62J

Question Number : 41 Question Id : 6232171309 Question Type : MCQ Option Shuffling : Yes Display Question Number : Yes
Single Line Question Option : No Option Orientation : Vertical

Wrong Marks : 0

A man leaves city A at 6.00 am and reaches city B at 10.00 am. Another man leaves city B at 8.00 am and reaches the city A at 12.00 noon. They will meet at time

Options :

1. 9.00 am
2. 9.30 am
3. 9.45 am
4. 10.00 am

Question Number : 42 Question Id : 6232171310 Question Type : MCQ Option Shuffling : Yes Display Question Number : Yes
Single Line Question Option : No Option Orientation : Vertical

Wrong Marks : 0

An year ago, the ratio between Anil's and Sunil's salaries was 3:5. The ratio of their individual salaries of last year and present are 2:3 and 4:5 respectively. If their total salaries for the present year are ₹ 43,000, the present salary of Anil is

Options :

1. ₹ 20,000
2. ₹ 19,600
3. ₹ 18,400
4. ₹ 18,000

Question Number : 43 Question Id : 6232171311 Question Type : MCQ Option Shuffling : Yes Display Question Number : Yes
Single Line Question Option : No Option Orientation : Vertical

Wrong Marks : 0

The present expenditure of an employee on food and other items is ₹ 2,590. There is an increase of prices of 10% on food items and 15% on other items. If the ratio of an employees expenditure on food items and other items is 2:5, by how much should his expenditure be increased on these items in order that he may maintain the same level of consumption as before?

Options :

1. ₹ 351-50

2. ₹ 360-50

3. ₹ 382-50

4. ₹ 410-75

Question Number : 44 Question Id : 6232171312 Question Type : MCQ Option Shuffling : Yes Display Question Number : Yes
Single Line Question Option : No Option Orientation : Vertical

Wrong Marks : 0

The profit earned by selling an article for ₹ 900 is twice the loss incurred when the same article is sold for ₹ 600. At what price should the article be sold to make 30% profit?

Options :

1. ₹ 750

2. ₹ 810

3. ₹ 840

4. ₹ 910

Question Number : 45 Question Id : 6232171313 Question Type : MCQ Option Shuffling : Yes Display Question Number : Yes
Single Line Question Option : No Option Orientation : Vertical

Wrong Marks : 0

What percent simple interest does a man get for his money when in discounting a bill due 10 months hence, he deducts 10% of the amount of the bill?

Options :

1. $11\frac{2}{3}$

2. $12\frac{1}{3}$

3. $13\frac{1}{3}$

4. $14\frac{2}{3}$

Sub-Section Number: 4
Sub-Section Id: 62321746
Question Shuffling Allowed : No

Question Number : 46 Question Id : 6232171314 Question Type : MCQ Option Shuffling : Yes Display Question Number : Yes
Single Line Question Option : No Option Orientation : Vertical

Wrong Marks : 0

If the conclusion of an argument follows from its premise/premises conclusively, that argument is called

Options :

1. Inductive argument

2. Deductive argument

3. Analogical argument

4. Circular argument

Question Number : 47 Question Id : 6232171315 Question Type : MCQ Option Shuffling : Yes Display Question Number : Yes
Single Line Question Option : No Option Orientation : Vertical

Wrong Marks : 0

In the following question Assertion and Reasoning statements are given. Based on that choose correct answer.

Assertion (A) : All teaching implies learning

Reason (R) : Learning to be useful must be derived from teaching

Options :

1. Both (A) and (B) are true but (R) is not a correct explanation of (A)

2. (A) is true but (R) is false

3. (A) is false but (R) is true

4. Both (A) and (B) are true; (R) is a correct explanation of (A)

Question Number : 48 Question Id : 6232171316 Question Type : MCQ Option Shuffling : Yes Display Question Number : Yes
Single Line Question Option : No Option Orientation : Vertical

Wrong Marks : 0

Consider the two premises and the four conclusions drawn from those two premises.
Select the code that expresses conclusion drawn validly from the premises (jointly or separately).

Premises:

A) All cows are mammals

B) No cats are cows

Conclusions:

I) No cats are mammals

II) Some cats are mammals

III) No cows are cats

IV) No cows are non-mammals

Options :

1. Only I

2. I and II

3. III and IV

4. II and III

Question Number : 49 Question Id : 6232171317 Question Type : MCQ Option Shuffling : Yes Display Question Number : Yes
Single Line Question Option : No Option Orientation : Vertical

Wrong Marks : 0

You are given a statement followed by three assumptions numbered I, II and III. You have to consider the statement and the following assumptions, decide which assumptions is/are implicit in the statement and choose your answer accordingly statement:

Statement: “If you are intelligent, we are the right people for improving your performance” – An advertisement of a coaching centre.

- Assumptions:
- I) Brilliant students prefer to join coaching classes
 - II) Coaching classes help the students to improve their performance
 - III) No other institute provides such coaching

Options :

1. Only (I) and (II) are implicit
2. Only (II) and (III) are implicit
3. Only (I) and (III) are implicit
4. All are implicit

Question Number : 50 Question Id : 6232171318 Question Type : MCQ Option Shuffling : Yes Display Question Number : Yes
Single Line Question Option : No Option Orientation : Vertical

Wrong Marks : 0

The following words have some relationships. The two blanks given are also having the relationships. Identify the two words and choose the correct answer.

Fury : Ire : : _____ : _____.

Options :

1. Convulsion : Spasm
2. Amusement : Happiness
3. Joke : Laugh
4. Dispassion : Emotion

Wrong Marks : 0

The following words have some relationships. The two blanks given are also having the relationships. Identify the two words and choose the correct answer.

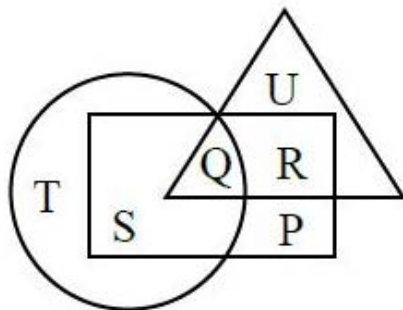
Wine : Grapes :: Vodka : _____.

Options :

1. Apples
2. Potatoes
3. Oranges
4. Flour

Wrong Marks : 0

Study the following figure and answer the question below.



- Rectangle → Married people
- Circle → People living in joint family
- Triangle → School teachers

Married teachers who live in joint family are represented by the letter

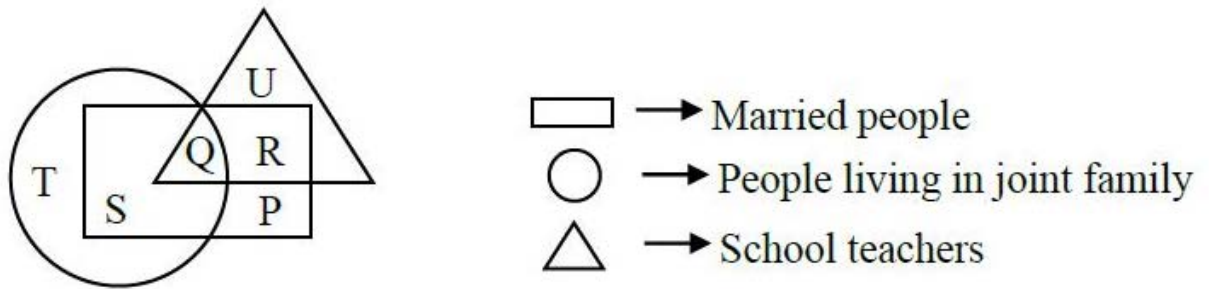
Options :

1. P
2. Q
3. R
4. S

Question Number : 53 Question Id : 6232171321 Question Type : MCQ Option Shuffling : Yes Display Question Number : Yes
Single Line Question Option : No Option Orientation : Vertical

Wrong Marks : 0

Study the following figure and answer the question below.



The people who live in joint family but are neither married nor teachers are represented by the letter

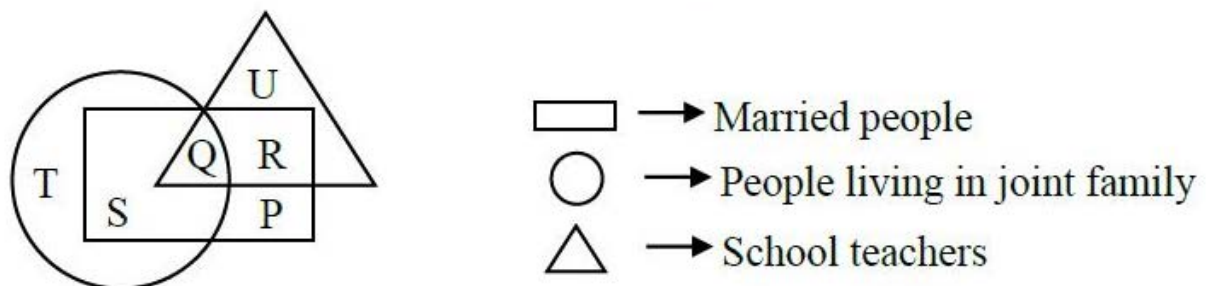
Options :

1. Q
2. R
3. S
4. T

Question Number : 54 Question Id : 6232171322 Question Type : MCQ Option Shuffling : Yes Display Question Number : Yes
Single Line Question Option : No Option Orientation : Vertical

Wrong Marks : 0

Study the following figure and answer the question below.



Married people who live in joint family but not are school teachers, are represented by the letter

Options :

1. S

2. R

3. P

4. U

Question Number : 55 Question Id : 6232171323 Question Type : MCQ Option Shuffling : Yes Display Question Number : Yes
Single Line Question Option : No Option Orientation : Vertical

Wrong Marks : 0

The following data gives the number of smartphones sold by five stores P, Q, R, S and T in five months. Study this data carefully and answer the question below it.

Store Month	P	Q	R	S	T
January	126	121	105	103	113
February	100	105	112	82	156
March	131	116	95	115	215
April	170	166	146	165	282
May	225	234	204	295	408

The total number of smartphones sold by store S in April and May together is what percent of the number of smartphones sold by Store T in the same months together?

Options :

1. $66\frac{2}{3}\%$

2. $59\frac{2}{3}\%$

3. $58\frac{1}{3}\%$

4. $65\frac{3}{4}\%$

Wrong Marks : 0

The following data gives the number of smartphones sold by five stores P, Q, R, S and T in five months. Study this data carefully and answer the question below it.

Store Month	P	Q	R	S	T
January	126	121	105	103	113
February	100	105	112	82	156
March	131	116	95	115	215
April	170	166	146	165	282
May	225	234	204	295	408

The total number of smartphones sold by all the stores together in July was 25% more than the total number of smartphones sold by all the stores together in January. How many smartphones were sold by all the stores together in July?

Options :

1. 745
2. 719
3. 710
4. 695

Wrong Marks : 0

The following data gives the number of smartphones sold by five stores P, Q, R, S and T in five months. Study this data carefully and answer the question below it.

Store Month	P	Q	R	S	T
January	126	121	105	103	113
February	100	105	112	82	156
March	131	116	95	115	215
April	170	166	146	165	282
May	225	234	204	295	408

What is the ratio of the total number of smartphones sold by store Q in April and May together to the total number of smartphones sold by stores R in the same month together?

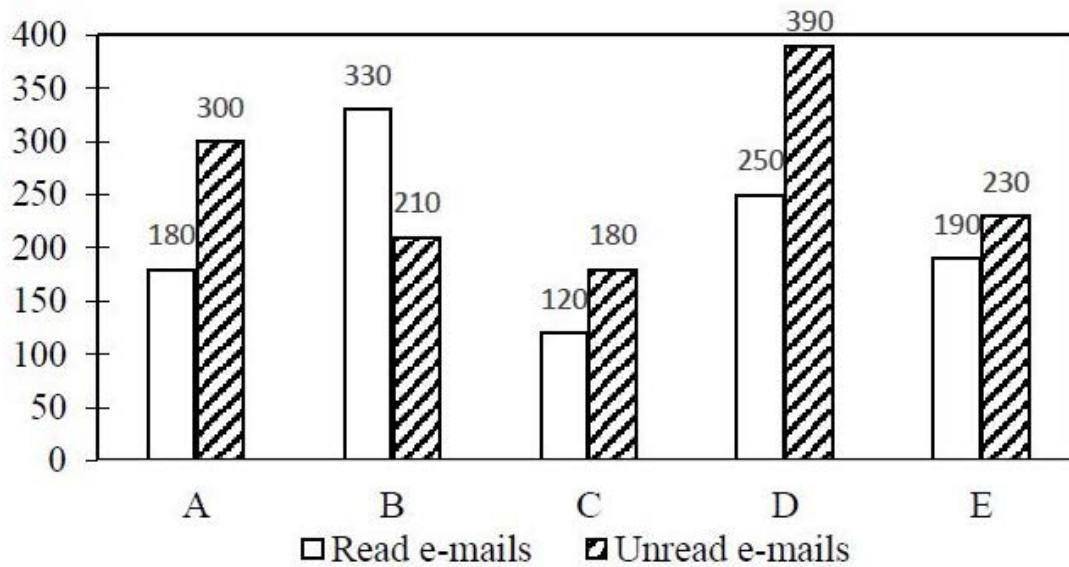
Options :

1. 6:7
2. 8:7
3. 9:7
4. 11:9

Question Number : 58 Question Id : 6232171326 Question Type : MCQ Option Shuffling : Yes Display Question Number : Yes Single Line Question Option : No Option Orientation : Vertical

Wrong Marks : 0

The graph given below gives the number of received e-mails read by five persons A, B, C, D, E on Monday. This number includes the e-mails read and e-mails unread. Assume that there are no pending e-mails carried forward from previous days to Monday. Data relates to the number of mails received on Monday only.



If the number of e-mails received by F was 38% more than that by C and the number of e-mails read by F was 25% more than that unread by him, then how many e-mails were read by F?

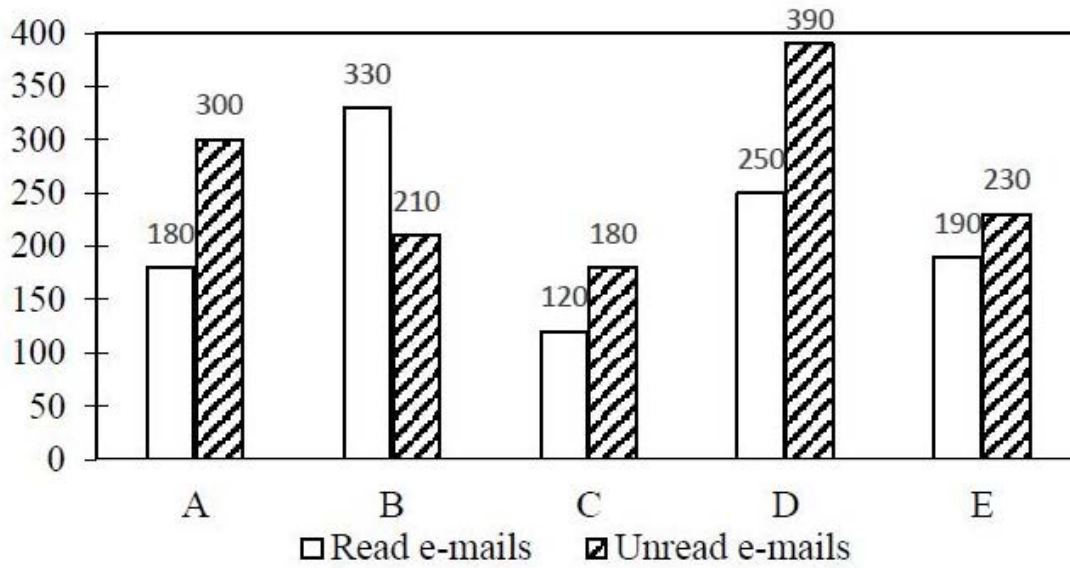
Options :

1. 230
2. 220
3. 210
4. 250

Question Number : 59 Question Id : 6232171327 Question Type : MCQ Option Shuffling : Yes Display Question Number : Yes Single Line Question Option : No Option Orientation : Vertical

Wrong Marks : 0

The graph given below gives the number of received e-mails read by five persons A, B, C, D, E on Monday. This number includes the e-mails read and e-mails unread. Assume that there are no pending e-mails carried forward from previous days to Monday. Data relates to the number of mails received on Monday only.



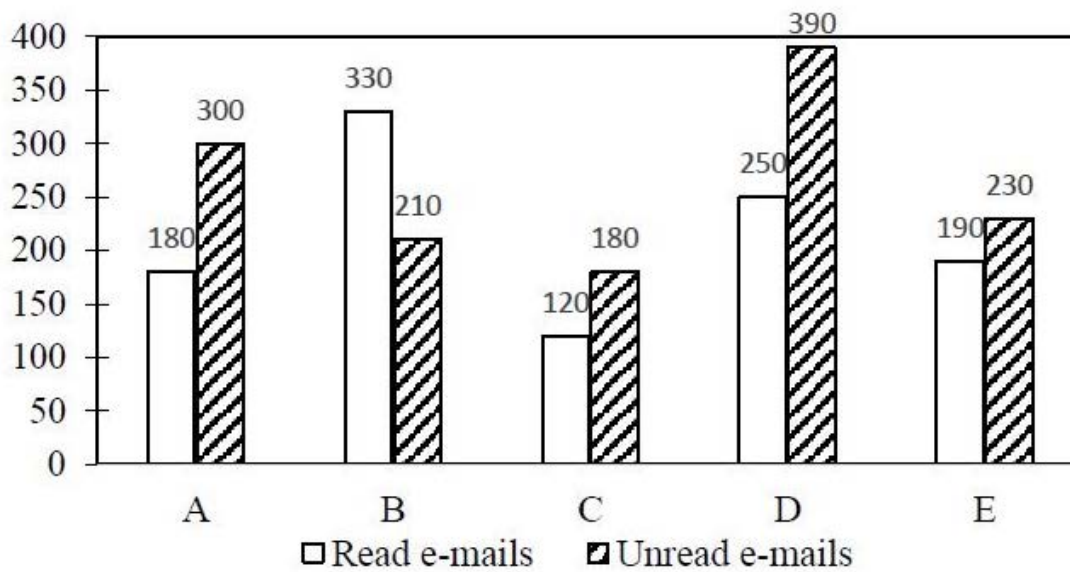
The percentage of read e-mails for A and G (out of received e-mails for each of them) were equal. If the number of e-mails received by G is 360, then how many e-mails were unread by G?

Options :

1. 235
2. 230
3. 225
4. 220

Question Number : 60 Question Id : 6232171328 Question Type : MCQ Option Shuffling : Yes Display Question Number : Yes
 Single Line Question Option : No Option Orientation : Vertical
 Wrong Marks : 0

The graph given below gives the number of received e-mails read by five persons A, B, C, D, E on Monday. This number includes the e-mails read and e-mails unread. Assume that there are no pending e-mails carried forward from previous days to Monday. Data relates to the number of mails received on Monday only.



Out of the e-mails read by B, 60% are from male customers. The number of unread e-mails from female customers is 51 less than that of the read e-mails from female customers. What is the number of unread e-mails from male customers?

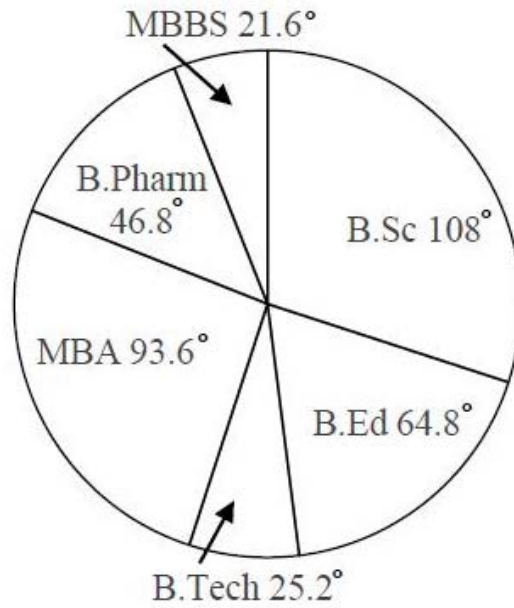
Options :

1. 135
2. 133
3. 131
4. 129

Question Number : 61 Question Id : 6232171329 Question Type : MCQ Option Shuffling : Yes Display Question Number : Yes Single Line Question Option : No Option Orientation : Vertical

Wrong Marks : 0

The following pie-chart shows the distribution of students in different courses. Study this chart carefully and answer the following question. Total number of students = 6,800.



How much less percentage (approximately) of students are there in MBBS course as compared to B.Sc. course?

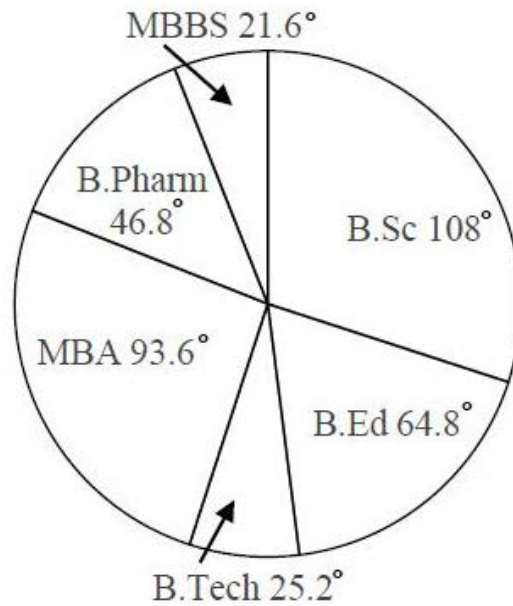
Options :

1. 80%
2. 60%
3. 40%
4. 36%

Question Number : 62 Question Id : 6232171330 Question Type : MCQ Option Shuffling : Yes Display Question Number : Yes Single Line Question Option : No Option Orientation : Vertical

Wrong Marks : 0

The following pie-chart shows the distribution of students in different courses. Study this chart carefully and answer the following question. Total number of students = 6,800.



If in MBA the ratio of boys to girls is 5:3 and 20% of boys are in Finance course, then what is the number of boys in the Finance course?

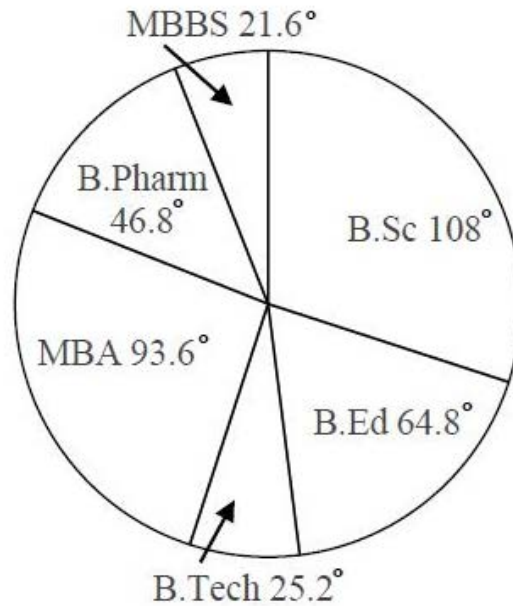
Options :

1. 325
2. 225
3. 229
4. 221

Question Number : 63 Question Id : 6232171331 Question Type : MCQ Option Shuffling : Yes Display Question Number : Yes Single Line Question Option : No Option Orientation : Vertical

Wrong Marks : 0

The following pie-chart shows the distribution of students in different courses. Study this chart carefully and answer the following question. Total number of students = 6,800.



The number of students in MBBS and B.Tech together is what percent of that in B.Ed course?

Options :

1. 69.33%
2. 72.22%
3. 76%
4. 79.34%

Sub-Section Number: 5
Sub-Section Id: 62321747
Question Shuffling Allowed : Yes

Question Number : 64 Question Id : 6232171332 Question Type : MCQ Option Shuffling : Yes Display Question Number : Yes
Single Line Question Option : No Option Orientation : Vertical

Wrong Marks : 0

Which of the following refers to unsolicited e-mails in the form of advertising or chain letters?

Options :

1. Inbox
2. Trash
3. Spam
4. Compose

Question Number : 65 Question Id : 6232171333 Question Type : MCQ Option Shuffling : Yes Display Question Number : Yes
Single Line Question Option : No Option Orientation : Vertical

Wrong Marks : 0

The tags placed on an animal to record and track in a database all of the animal's movements is known as

Options :

1. POS
2. PPS
3. GPS
4. RFID

Question Number : 66 Question Id : 6232171334 Question Type : MCQ Option Shuffling : Yes Display Question Number : Yes
Single Line Question Option : No Option Orientation : Vertical

Wrong Marks : 0

Internal communication within institutions is done through

Options :

1. WAN
2. LAN
3. EBB

MMS

4.

Question Number : 67 Question Id : 6232171335 Question Type : MCQ Option Shuffling : Yes Display Question Number : Yes
Single Line Question Option : No Option Orientation : Vertical

Wrong Marks : 0

The total number of command buttons on the title bar of an opened word processing windows is

Options :

1. 6

2. 5

3. 3

4. 2

Question Number : 68 Question Id : 6232171336 Question Type : MCQ Option Shuffling : Yes Display Question Number : Yes
Single Line Question Option : No Option Orientation : Vertical

Wrong Marks : 0

The complete (full)) form of USB as used in computer related activities is

Options :

1. Universal Security Block

2. Universal Serial Bus

3. United Serial Bus

4. Ultra Security Block

Question Number : 69 Question Id : 6232171337 Question Type : MCQ Option Shuffling : Yes Display Question Number : Yes
Single Line Question Option : No Option Orientation : Vertical

Wrong Marks : 0

The key on the QWERTY keyboard used to produce alphabetic upper case letters is

Options :

1. Home
2. Tab
3. Num lock
4. Caps lock

Question Number : 70 Question Id : 6232171338 Question Type : MCQ Option Shuffling : Yes Display Question Number : Yes
Single Line Question Option : No Option Orientation : Vertical
Wrong Marks : 0

Which one of the following is not included in the basic functions of operating system?

Options :

1. Job control
2. Job scheduling
3. Memory management
4. Data management

Question Number : 71 Question Id : 6232171339 Question Type : MCQ Option Shuffling : Yes Display Question Number : Yes
Single Line Question Option : No Option Orientation : Vertical
Wrong Marks : 0

The temporary working memory of a computer system is the

Options :

1. arithmetic logic unit
2. flash memory
3. random access memory

4. read only memory

Question Number : 72 Question Id : 6232171340 Question Type : MCQ Option Shuffling : Yes Display Question Number : Yes
Single Line Question Option : No Option Orientation : Vertical

Wrong Marks : 0

A compiler is a software which converts

Options :

1. characters to bits

2. high level language to machine language

3. words to bits

4. machine language to high level language

Question Number : 73 Question Id : 6232171341 Question Type : MCQ Option Shuffling : Yes Display Question Number : Yes
Single Line Question Option : No Option Orientation : Vertical

Wrong Marks : 0

The aggregation of all eco systems on the earth is referred to as

Options :

1. Atmosphere

2. Ecosphere

3. Stratosphere

4. Ionosphere

Question Number : 74 Question Id : 6232171342 Question Type : MCQ Option Shuffling : Yes Display Question Number : Yes
Single Line Question Option : No Option Orientation : Vertical

Wrong Marks : 0

In which of the following area does radiant drainage fully develop?

Options :

1. On a point bar
2. Near a delta
3. Around an ox-bow lake
4. Around a volcano

Question Number : 75 Question Id : 6232171343 Question Type : MCQ Option Shuffling : Yes Display Question Number : Yes
Single Line Question Option : No Option Orientation : Vertical
Wrong Marks : 0

When the environmental lapse rate is less than the adiabatic lapse rate, the atmosphere is

Options :

1. Stable
2. Moderately unstable
3. High unstable
4. Neutral

Question Number : 76 Question Id : 6232171344 Question Type : MCQ Option Shuffling : Yes Display Question Number : Yes
Single Line Question Option : No Option Orientation : Vertical
Wrong Marks : 0

When a disaster has occurred, the early action in a Disaster Management Plan could be

Options :

1. Response and Rescue
2. Warning and preparedness
3. Relief and Rehabilitation
4. Shelter and food supply

Question Number : 77 Question Id : 6232171345 Question Type : MCQ Option Shuffling : Yes Display Question Number : Yes
Single Line Question Option : No Option Orientation : Vertical

Wrong Marks : 0

Ecosystem diversity can be best studied using the

Options :

1. Topographical maps
2. Geoinformatics
3. Geodesy
4. Geology

Question Number : 78 Question Id : 6232171346 Question Type : MCQ Option Shuffling : Yes Display Question Number : Yes
Single Line Question Option : No Option Orientation : Vertical

Wrong Marks : 0

The geometric mean of the data 2, 4, 27 is

Options :

1. 6
2. $6\sqrt{6}$
3. 16.5
4. $\sqrt{33}$

Question Number : 79 Question Id : 6232171347 Question Type : MCQ Option Shuffling : Yes Display Question Number : Yes
Single Line Question Option : No Option Orientation : Vertical

Wrong Marks : 0

Which of the following frequency region is part of sun's radiation?

Options :

1. Visible frequency region
2. Infrared frequency region

3. Ultraviolet frequency region

4. All of the other options

Question Number : 80 Question Id : 6232171348 Question Type : MCQ Option Shuffling : Yes Display Question Number : Yes
Single Line Question Option : No Option Orientation : Vertical

Wrong Marks : 0

In the standard hydrogen electrode, the pressure of hydrogen and hydrogen ion concentration respectively are:

Options :

1. 1 atm and 10 mol/L

2. 10 atm and 1 mol/L

3. 1 atm and 1 mol/L

4. 1 atm and 5 mol/L

Question Number : 81 Question Id : 6232171349 Question Type : MCQ Option Shuffling : Yes Display Question Number : Yes
Single Line Question Option : No Option Orientation : Vertical

Wrong Marks : 0

About half of the earth's photosynthesis is carried out by

Options :

1. Cyanobacteria

2. Rainforest flora

3. Protists

4. Marine phytoplankton

Question Number : 82 Question Id : 6232171350 Question Type : MCQ Option Shuffling : Yes Display Question Number : Yes
Single Line Question Option : No Option Orientation : Vertical

Wrong Marks : 0

The purpose of value education is best served by focussing on

Options :

1. cultural practices prevailing in the society
2. religious, moral practices and instruction
3. norms of conduct laid down by a social group
4. concern of human values

Question Number : 83 Question Id : 6232171351 Question Type : MCQ Option Shuffling : Yes Display Question Number : Yes
Single Line Question Option : No Option Orientation : Vertical

Wrong Marks : 0

The design of 5+3+3+4 suggested by New Education Policy, 2019 (Draft) in which the first stage of 5 year education is divided into

Options :

1. pre-primary school and post primary school
2. primary school and pre-primary school
3. pre-primary school , class-I and class-II
4. pre-primary , class-IV and class-V

Question Number : 84 Question Id : 6232171352 Question Type : MCQ Option Shuffling : Yes Display Question Number : Yes
Single Line Question Option : No Option Orientation : Vertical

Wrong Marks : 0

One of the following is not related to the aims of New Education Policy, 2019 (Draft)

Options :

1. Justice
2. Access

3. Equality

4. Equity

Question Number : 85 Question Id : 6232171353 Question Type : MCQ Option Shuffling : Yes Display Question Number : Yes
Single Line Question Option : No Option Orientation : Vertical

Wrong Marks : 0

The number of languages recognized by the 8th schedule of constitution of India in the beginning

Options :

1. 20

2. 22

3. 15

4. 12

Question Number : 86 Question Id : 6232171354 Question Type : MCQ Option Shuffling : Yes Display Question Number : Yes
Single Line Question Option : No Option Orientation : Vertical

Wrong Marks : 0

The Indian Education Policy is mostly influenced by the following method

Options :

1. Materialism

2. Metaphysics

3. Empencism

4. Constructivism

Question Number : 87 Question Id : 6232171355 Question Type : MCQ Option Shuffling : Yes Display Question Number : Yes
Single Line Question Option : No Option Orientation : Vertical

Wrong Marks : 0

The learning of outcomes envisaged by Benzamin Bloom has been confined to the following three domains.

Options :

1. Precisim – Affective – Psychomotor
2. Psychomotor – Perceplin – Attitude
3. Cognitive – Affective – Psychomotor
4. Articulation – Perception – Affective

Question Number : 88 Question Id : 6232171356 Question Type : MCQ Option Shuffling : Yes Display Question Number : Yes
Single Line Question Option : No Option Orientation : Vertical

Wrong Marks : 0

The document on Examination Reforms – A plan of action by UGC brought out to focus mainly on

Options :

1. Choice-based credit system
2. Open book system
3. Internal assessment
4. Assessment by students

Question Number : 89 Question Id : 6232171357 Question Type : MCQ Option Shuffling : Yes Display Question Number : Yes
Single Line Question Option : No Option Orientation : Vertical

Wrong Marks : 0

The technic of ‘School Mapping’ is used for

Options :

1. Mobilising finance for education

2. Mobilising people for education
3. Establishing school committees
4. Introducing new schools

Question Number : 90 Question Id : 6232171358 Question Type : MCQ Option Shuffling : Yes Display Question Number : Yes
Single Line Question Option : No Option Orientation : Vertical

Wrong Marks : 0

Who said that “adult education as inclusive and of education of politics, of citizenship and also of morality”?

Options :

1. S.N. Mukerjee
2. Humayun Kabir
3. K.G. Sayyidain
4. Jakir Hussian

ECONOMICS

Section Id :	62321716
Section Number :	2
Section type :	Online
Mandatory or Optional:	Mandatory
Number of Questions:	90
Number of Questions to be attempted:	90
Section Marks:	90
Display Number Panel:	Yes
Group All Questions:	No

Sub-Section Number:	1
Sub-Section Id:	62321748
Question Shuffling Allowed :	Yes

Question Number : 91 Question Id : 6232171359 Question Type : MCQ Option Shuffling : Yes Display Question Number : Yes
Single Line Question Option : No Option Orientation : Vertical

Wrong Marks : 0

Which one of the following is identical to Demand Price?

Options :

1. Total Revenue
2. Marginal Revenue
3. Average Revenue
4. Sale Price

Question Number : 92 Question Id : 6232171360 Question Type : MCQ Option Shuffling : Yes Display Question Number : Yes
Single Line Question Option : No Option Orientation : Vertical

Wrong Marks : 0

Which one of the following is the simple dynamic model of output and price where quantity supplied in any period depends on price in the previous period?

Options :

1. Kinked demand curve model
2. Cobweb model
3. Cobb-Douglas Model
4. Cournot Model

Question Number : 93 Question Id : 6232171361 Question Type : MCQ Option Shuffling : Yes Display Question Number : Yes
Single Line Question Option : No Option Orientation : Vertical

Wrong Marks : 0

If the price elasticity of demand is given as unity, then total revenue will be

Options :

1. Constant
2. Increase
3. Decrease

4. Unpredicted

Question Number : 94 Question Id : 6232171362 Question Type : MCQ Option Shuffling : Yes Display Question Number : Yes
Single Line Question Option : No Option Orientation : Vertical

Wrong Marks : 0

The relationship between Long run Average Cost (LAC) curve and Long run Marginal Cost (LMC) curve is such that

Options :

1. Falls when the Long run Marginal Cost (LMC) falls
2. Rises when the Long run Marginal Cost (LMC) rises
3. Goes through the lowest point of the Long run Marginal Cost (LMC) curve
4. Falls when Long run Marginal Cost (LMC) < Long run Average Cost (LAC) and rises when Long run Marginal Cost (LMC) > Long run Average Cost (LAC).

Question Number : 95 Question Id : 6232171363 Question Type : MCQ Option Shuffling : Yes Display Question Number : Yes
Single Line Question Option : No Option Orientation : Vertical

Wrong Marks : 0

Which of the following industries most closely approximates the perfectly competitive model?

Options :

1. Automobile
2. Cigarette
3. Newspaper
4. Wheat farming

Question Number : 96 Question Id : 6232171364 Question Type : MCQ Option Shuffling : Yes Display Question Number : Yes
Single Line Question Option : No Option Orientation : Vertical

Wrong Marks : 0

In the case of price leadership by the dominant firm, all the firms in the purely oligopolistic industry will produce their best level of output

Options :

1. Always
2. Never
3. Sometimes
4. Often

Question Number : 97 Question Id : 6232171365 Question Type : MCQ Option Shuffling : Yes Display Question Number : Yes
Single Line Question Option : No Option Orientation : Vertical
Wrong Marks : 0

The locus of Pareto optimality in production and consumption is given by

Options :

1. The social welfare function
2. The utility – possibility curve
3. The grand – utility possibility curve
4. The transformation curve

Question Number : 98 Question Id : 6232171366 Question Type : MCQ Option Shuffling : Yes Display Question Number : Yes
Single Line Question Option : No Option Orientation : Vertical
Wrong Marks : 0

The locus of points where one producer's isoquant is tangent to other producer's isoquant is known as

Options :

1. Production Isoquant curve
2. Production contract curve
3. Utility - possibility curve

Product transformation curve

4.

Question Number : 99 Question Id : 6232171367 Question Type : MCQ Option Shuffling : Yes Display Question Number : Yes
Single Line Question Option : No Option Orientation : Vertical

Wrong Marks : 0

A duopolistic market in which the firms aim at the maximization of their profit can be explained as

Options :

1. Non-zero - sum game
2. Two-person zero-sum-game
3. n – person zero-sum-game
4. Two person zero – sum – game without saddle point

Question Number : 100 Question Id : 6232171368 Question Type : MCQ Option Shuffling : Yes Display Question Number : Yes
Single Line Question Option : No Option Orientation : Vertical

Wrong Marks : 0

Which one of the following implies the term ‘subsidies’?

Options :

1. Payment by government for purchase of goods and services
2. Payment by business enterprises to factors of production
3. Payment by government to business enterprises without buying any goods and services
4. Payment by companies to shareholders

Question Number : 101 Question Id : 6232171369 Question Type : MCQ Option Shuffling : Yes Display Question Number : Yes
Single Line Question Option : No Option Orientation : Vertical

Wrong Marks : 0

According to Keynes, the effective demand is governed by

Options :

1. Aggregate supply function
2. Aggregate demand function
3. Aggregate saving function and investment function
4. Aggregate supply function and aggregate demand function

Question Number : 102 Question Id : 6232171370 Question Type : MCQ Option Shuffling : Yes Display Question Number : Yes
Single Line Question Option : No Option Orientation : Vertical

Wrong Marks : 0

Find the marginal propensity to save, given the household consumption as Rs. 9000/- when disposable income is Rs. 10000/- and Rs. 13500/- when disposable income is Rs. 15000/-

Options :

1. 0.9
2. 0.1
3. 0.09
4. 0.01

Question Number : 103 Question Id : 6232171371 Question Type : MCQ Option Shuffling : Yes Display Question Number : Yes
Single Line Question Option : No Option Orientation : Vertical

Wrong Marks : 0

Match the following List – I with List – II

List – I

List – II

- | | |
|---|-------------------------------------|
| A. Dynamic Multiplier | (I) Horizontal line |
| B. Ratio of Consumption to Income | (II) Consumption |
| C. Keynesian Aggregate Supply Curve | (III) Average Propensity to consume |
| D. Keynesian Cross diagram connected with | (IV) Sequence multiplier |

Options :

1. A –IV, B – III, C – I, D – II

2. A –IV, B – III, C – II, D – I

3. A –IV, B – I, C – III, D – II

4. A –IV, B – II, C – III, D – I

Question Number : 104 Question Id : 6232171372 Question Type : MCQ Option Shuffling : Yes Display Question Number : Yes
Single Line Question Option : No Option Orientation : Vertical

Wrong Marks : 0

As the capital stock increases, the Marginal Efficiency of Capital (MEC)

Options :

1. Becomes constant

2. Becomes zero

3. Falls

4. Increases

Question Number : 105 Question Id : 6232171373 Question Type : MCQ Option Shuffling : Yes Display Question Number : Yes
Single Line Question Option : No Option Orientation : Vertical

Wrong Marks : 0

The Acceleration principle is based on the assumption of

A. Constant capital-output ratio

B. Inelastic supply of credit and capital

C. Absence of excess or idle capacity in plants

Based on the above, which one of the following responses is correct?

Options :

1. A and B
2. A and C
3. B and C
4. A, B and C

Question Number : 106 Question Id : 6232171374 Question Type : MCQ Option Shuffling : Yes Display Question Number : Yes
Single Line Question Option : No Option Orientation : Vertical
Wrong Marks : 0

The Phillips curve examines

Options :

1. A positive relationship between the rate of unemployment and inflation
2. A positive relationship between the rate of inflation and nominal wages
3. An inverse relationship between the rate of unemployment and inflation
4. An inverse relationship between the rate of inflation and nominal wages

Question Number : 107 Question Id : 6232171375 Question Type : MCQ Option Shuffling : Yes Display Question Number : Yes
Single Line Question Option : No Option Orientation : Vertical
Wrong Marks : 0

Kaldor's model of trade cycle is based on

Options :

1. Principle of Multiplier – accelerator interaction
2. Monetary phenomenon
3. Theory of innovations
4. Keynesian terminology of Saving – investment

Wrong Marks : 0

. Based on the following statements, identify the correct response:

- A. If the LM curve is horizontal, monetary policy is completely ineffective
- B. If IS curve is vertical, monetary policy is fully effective
- C. Fiscal policy is completely ineffective, if LM curve is vertical
- D. Fiscal policy is fully effective, if IS curve is horizontal

Options :

- 1. A and B
- 2. A and C
- 3. A and D
- 4. B and C

Wrong Marks : 0

In a population of women from a certain city, 3% are observed to suffer from breast cancer, 15% are found to be smokers, while 10% are noticed to be either smokers or breast cancer patients. If a woman is selected at random, what is the probability that she is a smoker and suffering from breast cancer?

Options :

- 1. 0.08
- 2. 0.8
- 3. 0.02
- 4. 0.2

Wrong Marks : 0

For a bi-variate data, given Covariance between two variables i.e., $Cov(X,Y) = 3.57$, correlation coefficient = 0.81 and standard deviation of $X = 2$, what is the value of standard deviation of Y ?

Options :

1. 8.81
2. 1.79
3. 2.20
4. Information not sufficient

Question Number : 111 Question Id : 6232171379 Question Type : MCQ Option Shuffling : Yes Display Question Number : Yes
Single Line Question Option : No Option Orientation : Vertical

Wrong Marks : 0

Match the following List – I with List – II

List – I

List – II

- | | |
|-------------------------|---|
| A. Type – I Error | I. $H_0: \mu \leq \mu_0$ and σ is known |
| B. Type – II Error | II. $H_0: \mu_1 = \mu_2$ against $H_1: \mu_1 > \mu_2$ |
| C. Composite hypothesis | III. Reject H_0 , when it is true |
| D. Right tailed test | IV. Accept H_0 , when it is false |

Options :

1. A – IV, B – III, C – I, D – II
2. A – IV, B – III, C – II, D – I
3. A – III, B – IV, C – II, D – I
4. A – III, B – IV, C – I, D – II

Question Number : 112 Question Id : 6232171380 Question Type : MCQ Option Shuffling : Yes Display Question Number : Yes
Single Line Question Option : No Option Orientation : Vertical

Wrong Marks : 0

Which one of the given responses refers to “Other things being equal, as the sample size increases, the results tend to be more reliable and accurate”?

Options :

1. Theory of sampling
2. Principle of Inertia of Large Numbers
3. Principle of Optimization
4. Principle of validity

Question Number : 113 Question Id : 6232171381 Question Type : MCQ Option Shuffling : Yes Display Question Number : Yes
Single Line Question Option : No Option Orientation : Vertical

Wrong Marks : 0

What are consequences of presence of heteroscedasticity problem in the regression analysis?

Options :

1. Least square estimators are biased, but efficient
2. Least square estimators are biased and inefficient
3. Least square estimators are unbiased and efficient
4. Least square estimators are unbiased, but inefficient

Question Number : 114 Question Id : 6232171382 Question Type : MCQ Option Shuffling : Yes Display Question Number : Yes
Single Line Question Option : No Option Orientation : Vertical

Wrong Marks : 0

Which one of the following statements is true?

Options :

1. Order Condition is sufficient for identification of an equation
2. Order Condition is not necessary, but sufficient of an equation

3. Rank Condition is necessary, but not sufficient for identification of an equation

4. Rank Condition is necessary and sufficient for identification of an equation

Question Number : 115 Question Id : 6232171383 Question Type : MCQ Option Shuffling : Yes Display Question Number : Yes
Single Line Question Option : No Option Orientation : Vertical

Wrong Marks : 0

An instrumental variable is a variable that is

Options :

1. Correlated with the error term, but uncorrelated with the explanatory variables in the equation

2. Uncorrelated with the error term, but correlated with the explanatory variables in the equation.

3. Correlated with the error term, but uncorrelated with the explained variable in the equation

4. Uncorrelated with the error term, but correlated with the explained variable in the equation

Question Number : 116 Question Id : 6232171384 Question Type : MCQ Option Shuffling : Yes Display Question Number : Yes
Single Line Question Option : No Option Orientation : Vertical

Wrong Marks : 0

An example of multivariate time-series analysis is

Options :

1. Analysis of weekly changes in price level

2. Analysis of monthly changes in price level

3. Analysis of relationships among unemployment, price level and money supply

4. Analysis of relationships among unemployment, price level and money supply based on monthly data

Wrong Marks : 0

A time series under the conditions

$E[X(t)] = \mu$ and $\text{Cov} [X(t), X(t+k)] = \gamma(k)$ is said to be

Options :

1. Strictly Stationary
2. Nonstationary
3. Weakly Stationary
4. Can't be defined

Wrong Marks : 0

Match the following List – I with List – II

List – I

List – II

- | | |
|-------------------------|---------------------------|
| A. Linear Function | I. $Y = a b^X$ |
| B. Exponential function | II. $Y = a + b X + C X^2$ |
| C. Power function | III. $Y = a + b X$ |
| D. Quadratic function | IV. $Y = a X^b$ |

where a, b and c in above equations are constants

Options :

1. A – III, B – I, C – IV, D – II
2. A – III, B – IV, C – I, D – II

3. A – III, B – IV, C – II, D – I

4. A – III, B – II, C – I, D – IV

Question Number : 119 Question Id : 6232171387 Question Type : MCQ Option Shuffling : Yes Display Question Number : Yes
Single Line Question Option : No Option Orientation : Vertical

Wrong Marks : 0

Given $MR = AR [1 - 1/e]$, where e is the price elasticity of demand, then the limit MR , when $e \rightarrow \infty$ will be

Options :

1. ∞

2. AR

3. MR

4. Cannot be determined

Question Number : 120 Question Id : 6232171388 Question Type : MCQ Option Shuffling : Yes Display Question Number : Yes
Single Line Question Option : No Option Orientation : Vertical

Wrong Marks : 0

Given the average cost function $AC = (160/Q) + 5 - 3Q + 2Q^2$, where Q is the output, the marginal cost at $Q = 3$ will be

Options :

1. 67.33

2. 27

3. 41

4. Cannot be determined

Question Number : 121 Question Id : 6232171389 Question Type : MCQ Option Shuffling : Yes Display Question Number : Yes
Single Line Question Option : No Option Orientation : Vertical

Wrong Marks : 0

Given the revenue function $R = 24Q - Q^2 + 8$, where Q is the output, the maximum revenue will be

Options :

1. 12
2. 152
3. 144
4. 1736

Question Number : 122 Question Id : 6232171390 Question Type : MCQ Option Shuffling : Yes Display Question Number : Yes Single Line Question Option : No Option Orientation : Vertical

Wrong Marks : 0

The inverse of given matrix $A = \begin{pmatrix} 2 & -2 \\ 3 & -1 \end{pmatrix}$ is

Options :

1. $A^{-1} = \begin{pmatrix} -1/4 & 1/2 \\ -3/4 & 1/2 \end{pmatrix}$

2. $A^{-1} = \begin{pmatrix} -1/4 & -3/4 \\ 1/2 & 1/2 \end{pmatrix}$

3.
$$A^{-1} = \begin{pmatrix} -3/4 & 1/2 \\ -1/4 & 1/2 \end{pmatrix}$$

4.
$$A^{-1} = \begin{pmatrix} 1/4 & 1/2 \\ 3/4 & 1/2 \end{pmatrix}$$

Question Number : 123 Question Id : 6232171391 Question Type : MCQ Option Shuffling : Yes Display Question Number : Yes
Single Line Question Option : No Option Orientation : Vertical
Wrong Marks : 0

Vertices of feasible region in an LPP are known as

Options :

1. Basic solution
2. Feasible solution
3. Infeasible solution
4. Unbounded solution

Question Number : 124 Question Id : 6232171392 Question Type : MCQ Option Shuffling : Yes Display Question Number : Yes
Single Line Question Option : No Option Orientation : Vertical
Wrong Marks : 0

Given the Technological coefficient matrix

$$A = \begin{pmatrix} 0.2 & 0.1 \\ 0.6 & 0.1 \end{pmatrix}$$

Verify whether Hawkins-Simon conditions are satisfied?

Options :

1. Only condition I satisfied
2. Only condition II satisfied
3. Both conditions are satisfied
4. Both conditions are not satisfied

Question Number : 125 Question Id : 6232171393 Question Type : MCQ Option Shuffling : Yes Display Question Number : Yes
Single Line Question Option : No Option Orientation : Vertical

Wrong Marks : 0

Given marginal revenue function $MR = 84 - 4Q - Q^2$, where Q is the output, the demand function is given by

Options :

1. $P = 84Q - 2Q^2 - (1/3)Q^3$, where P is price
2. $P = 84 - 2Q - (1/3)Q^2$, where P is price
3. $P = -4 - 2Q$, where P is price
4. Not possible to arrive at demand function with the given information

Question Number : 126 Question Id : 6232171394 Question Type : MCQ Option Shuffling : Yes Display Question Number : Yes
Single Line Question Option : No Option Orientation : Vertical

Wrong Marks : 0

Given the demand function $P = 42 - 5Q - Q^2$, assuming that the equilibrium price to be 6, the consumer surplus (approximated to two decimal places) is given by

Options :

1. 969.00
2. 106.33
3. 58.67
4. 82.67

Question Number : 127 Question Id : 6232171395 Question Type : MCQ Option Shuffling : Yes Display Question Number : Yes Single Line Question Option : No Option Orientation : Vertical

Wrong Marks : 0

Match the following List – I with List – II

List – I

List – II

- | | |
|-------------------------|---------------------------------|
| A. Gottfried Haberler | I. Theory of Availability |
| B. Prof. Kravis | II. Product Life Cycle Theory |
| C. Prof. Williams | III. Opportunity Cost Theory |
| D. Prof. Raymond Vernon | IV. Vent - for - Surplus Theory |

Options :

1. A – III, B – I, C – II, D – IV
2. A – III, B – I, C – IV, D – II
3. A – II, B – I, C – III, D – IV
4. A – II, B – I, C – IV, D – III

Question Number : 128 Question Id : 6232171396 Question Type : MCQ Option Shuffling : Yes Display Question Number : Yes Single Line Question Option : No Option Orientation : Vertical

Wrong Marks : 0

According to Heckscher – Ohlin Theory, trade results from

Options :

1. Differences in comparative costs
2. Domestic availability or non-availability of goods
3. Factor endowment differences
4. Opportunity cost theory

Question Number : 129 Question Id : 6232171397 Question Type : MCQ Option Shuffling : Yes Display Question Number : Yes
Single Line Question Option : No Option Orientation : Vertical

Wrong Marks : 0

A tax imposed on a commodity crossing the national frontier originating from and destined for other countries is called as

Options :

1. Transit duties
2. Specific duties
3. Export duties
4. Compound duties

Question Number : 130 Question Id : 6232171398 Question Type : MCQ Option Shuffling : Yes Display Question Number : Yes
Single Line Question Option : No Option Orientation : Vertical

Wrong Marks : 0

If an American firm earns Rs. 1500 crores dividend on investment in India, then such payment in Balance of Payments of India is recorded as

Options :

1. Credit entry under Capital Account
2. Debit entry under Capital Account

3. Credit entry under Current Account

4. Debit entry under Current Account

Question Number : 131 Question Id : 6232171399 Question Type : MCQ Option Shuffling : Yes Display Question Number : Yes
Single Line Question Option : No Option Orientation : Vertical

Wrong Marks : 0

The ratio of price index of exports and imports multiplied by 100 is known as

Options :

1. Income Terms of Trade

2. Gross Barter Terms of Trade

3. Net Barter Terms of Trade

4. Utility Terms of Trade

Question Number : 132 Question Id : 6232171400 Question Type : MCQ Option Shuffling : Yes Display Question Number : Yes
Single Line Question Option : No Option Orientation : Vertical

Wrong Marks : 0

Which one of the following is not the function of a foreign exchange market?

Options :

1. Transfer of purchasing power

2. Keep balance of payments in equilibrium

3. Provision of credit

4. Provision of hedging facilities

Question Number : 133 Question Id : 6232171401 Question Type : MCQ Option Shuffling : Yes Display Question Number : Yes
Single Line Question Option : No Option Orientation : Vertical

Wrong Marks : 0

If the sum of price elasticity of demand for exports and imports of a country is greater than unity, then devaluation will

Options :

1. Improve the country's Balance of Payments
2. Not have any effect on the Balance of payments
3. Further deteriorate the Balance of payments
4. None of the other options

Question Number : 134 Question Id : 6232171402 Question Type : MCQ Option Shuffling : Yes Display Question Number : Yes
Single Line Question Option : No Option Orientation : Vertical

Wrong Marks : 0

. From which one of the following countries the economic crisis spread to other South East Asian countries popularly known as South East Asian Economic Crisis?

Options :

1. Malaysia
2. Indonesia
3. Thailand
4. Philippines

Question Number : 135 Question Id : 6232171403 Question Type : MCQ Option Shuffling : Yes Display Question Number : Yes
Single Line Question Option : No Option Orientation : Vertical

Wrong Marks : 0

Which one of following is known as 'Third Pillar' of World economy?

Options :

1. IMF
2. WTO
3. World Bank

Question Number : 136 Question Id : 6232171404 Question Type : MCQ Option Shuffling : Yes Display Question Number : Yes
 Single Line Question Option : No Option Orientation : Vertical
 Wrong Marks : 0

A demerit good

Options :

1. Is a public good
2. Involves a positive externality
3. Is under provided in the free market
4. Is over provided in the free market

Question Number : 137 Question Id : 6232171405 Question Type : MCQ Option Shuffling : Yes Display Question Number : Yes
 Single Line Question Option : No Option Orientation : Vertical
 Wrong Marks : 0

Match the following List – I with List – II

List – I

List – II

- | | |
|--------------------|---|
| A. J.M. Buchanan | I. Canons of Public Expenditure |
| B. Findlay Shirras | II. Canons of Taxation |
| C. Adam Smith | III. Public-Choice Theory |
| D. Prof. Dalton | IV. Principle of Maximum Social Advantage |

Options :

1. A – III, B – I, C – IV, D – II
2. A – III, B – I, C – II, D – IV
3. A – II, B – I, C – III, D – IV
4. A – II, B – I, C – IV, D – III

Question Number : 138 Question Id : 6232171406 Question Type : MCQ Option Shuffling : Yes Display Question Number : Yes
Single Line Question Option : No Option Orientation : Vertical

Wrong Marks : 0

Non – rival and non – exclusive are the characteristics of

Options :

1. Public goods
2. Private goods
3. Consumer goods
4. Capital goods

Question Number : 139 Question Id : 6232171407 Question Type : MCQ Option Shuffling : Yes Display Question Number : Yes
Single Line Question Option : No Option Orientation : Vertical

Wrong Marks : 0

The right to acquire unclaimed balances and properties of deceased persons without legal heirs or without making a will by the government is known as

Options :

1. Forfeitures
2. Attachment
3. Escheats
4. Taken over

Question Number : 140 Question Id : 6232171408 Question Type : MCQ Option Shuffling : Yes Display Question Number : Yes
Single Line Question Option : No Option Orientation : Vertical

Wrong Marks : 0

If the rate of tax is slowly progressive up to a certain point and thereafter charged at a flat rate with the increase in the tax base, such a taxation is said to be

Options :

1. Non regressive Taxes

2. Regressive Taxes
3. Progressive Taxes
4. Progressive and constant

Question Number : 141 Question Id : 6232171409 Question Type : MCQ Option Shuffling : Yes Display Question Number : Yes
Single Line Question Option : No Option Orientation : Vertical

Wrong Marks : 0

Match the following List – I with List – II

- | List – I (Economists) | List – II (Classification of Public Expenditure) |
|-----------------------|---|
| A. Mehta | I. Operational and Obligatory expenditure |
| B. Shirras | II. Transferable and Non-transferable expenditure |
| C. Pigou | III. Constant and Variable expenditure |
| D. Mill | IV. Primary and Secondary expenditure |

Options :

1. A – III, B – I, C – IV, D – II
2. A – III, B – IV, C – I, D – II
3. A – III, B – II, C – IV, D – I
4. A – III, B – IV, C – II, D – I

Question Number : 142 Question Id : 6232171410 Question Type : MCQ Option Shuffling : Yes Display Question Number : Yes
Single Line Question Option : No Option Orientation : Vertical

Wrong Marks : 0

Expenditure on education is known as

Options :

1. Active debt
2. Dead weight debt

3. Passive debt

4. Development debt

Question Number : 143 Question Id : 6232171411 Question Type : MCQ Option Shuffling : Yes Display Question Number : Yes
Single Line Question Option : No Option Orientation : Vertical

Wrong Marks : 0

Deficit budget is a cure for

Options :

1. Inflation

2. Trade deficit

3. Devaluation

4. Deflation

Question Number : 144 Question Id : 6232171412 Question Type : MCQ Option Shuffling : Yes Display Question Number : Yes
Single Line Question Option : No Option Orientation : Vertical

Wrong Marks : 0

Which one of the following is not an objective of fiscal policy?

Options :

1. Full employment

2. Stability of foreign exchange rate

3. Price stability

4. Accelerate the rate of economic growth

Question Number : 145 Question Id : 6232171413 Question Type : MCQ Option Shuffling : Yes Display Question Number : Yes
Single Line Question Option : No Option Orientation : Vertical

Wrong Marks : 0

Which one of the following is the primary function of money?

Options :

1. Medium of exchange
2. Store of purchasing power
3. Basis of credit
4. Standard of deferred payment

Question Number : 146 Question Id : 6232171414 Question Type : MCQ Option Shuffling : Yes Display Question Number : Yes
Single Line Question Option : No Option Orientation : Vertical

Wrong Marks : 0

Which one of the following countries is the first country in the World to make use of paper currency?

Options :

1. United Kingdom
2. United States of America
3. China
4. Germany

Question Number : 147 Question Id : 6232171415 Question Type : MCQ Option Shuffling : Yes Display Question Number : Yes
Single Line Question Option : No Option Orientation : Vertical

Wrong Marks : 0

Supply of money refers to

Options :

1. Cash balances held by the Central Government

2. Cash balances held by the Central Bank
3. Cash balances held by the Commercial Banks
4. Aggregate stock of domestic money owned by the public in a country

Question Number : 148 Question Id : 6232171416 Question Type : MCQ Option Shuffling : Yes Display Question Number : Yes
Single Line Question Option : No Option Orientation : Vertical

Wrong Marks : 0

Which one of the following is not a qualitative method of credit control?

Options :

1. Discount rate policy
2. Regulation of consumer credit
3. Open market operations
4. Variable cash reserve ratios

Question Number : 149 Question Id : 6232171417 Question Type : MCQ Option Shuffling : Yes Display Question Number : Yes
Single Line Question Option : No Option Orientation : Vertical

Wrong Marks : 0

If the cash reserve ratio was 20%, then the credit multiplier would be

Options :

1. 20
2. 0.2
3. 10
4. 5

Question Number : 150 Question Id : 6232171418 Question Type : MCQ Option Shuffling : Yes Display Question Number : Yes
Single Line Question Option : No Option Orientation : Vertical

Wrong Marks : 0

Match the following List – I with List – II

List – I

- A. Bank Rate
- B. Variable Reserve Ratio
- C. Open Market Operations
- D. Moral Suasion

List – II

- I. Control Commercial Banks
- II. Securities
- III. Discount Rate
- IV. Excess Reserves

Options :

1. A – III, B – IV, C – II, D – I

2. A – III, B – IV, C – I, D – II

3. A – I, B – IV, C – II, D – III

4. A – I, B – II, C – IV, D – III

Question Number : 151 Question Id : 6232171419 Question Type : MCQ Option Shuffling : Yes Display Question Number : Yes
Single Line Question Option : No Option Orientation : Vertical

Wrong Marks : 0

The ‘growth objective’ is interlinked with other objectives of monetary policy such as

- A. Price Stabilization
- B. Exchange Stabilization
- C. Full Employment
- D. Balance of Payments Equilibrium

Options :

1. A and B only

2. A and C only

3. A, B and D only

4. A, B and C only

Question Number : 152 Question Id : 6232171420 Question Type : MCQ Option Shuffling : Yes Display Question Number : Yes
Single Line Question Option : No Option Orientation : Vertical

Wrong Marks : 0

Which one of the following is not correct from the point of view of business operations of Non-Financial Banking Institutions?

Options :

1. Sanctions loans and advances

2. Accepts demand deposits

3. Deals with acquisition of shares

4. Deals with acquisition of stocks

Question Number : 153 Question Id : 6232171421 Question Type : MCQ Option Shuffling : Yes Display Question Number : Yes
Single Line Question Option : No Option Orientation : Vertical

Wrong Marks : 0

Markets in which new securities are issued by corporations to raise funds are called as

Options :

1. Money Market

2. Exchange Market

3. Primary Market

4. Secondary Market

Question Number : 154 Question Id : 6232171422 Question Type : MCQ Option Shuffling : Yes Display Question Number : Yes
Single Line Question Option : No Option Orientation : Vertical

Wrong Marks : 0

Which one of the following helps promote long-term growth rate?

Options :

1. Increased domestic saving and investment rates
2. Increased domestic saving and consumption rates
3. Creating more employment
4. Reduction of income inequalities

Question Number : 155 Question Id : 6232171423 Question Type : MCQ Option Shuffling : Yes Display Question Number : Yes
Single Line Question Option : No Option Orientation : Vertical

Wrong Marks : 0

Which one of the following is true according to Kuznets Hypothesis?

Options :

1. In the early stages of economic growth, relative income inequality decreases
2. Relative income inequality stabilizes for a time after decrease in the early stages of economic growth.
3. Relative income inequality increases after decrease in the early stages of economic growth.
4. In the early stages of economic growth, relative income inequality increases

Question Number : 156 Question Id : 6232171424 Question Type : MCQ Option Shuffling : Yes Display Question Number : Yes
Single Line Question Option : No Option Orientation : Vertical

Wrong Marks : 0

Match the following List – I with List – II

List – I

List – II

- A. Adam Smith
- B. Robert Malthus
- C. Karl Marx
- D. Schumpeter

- I. Organic Composition of capital
- II. Theory of Innovation
- III. Iron Law of wages
- IV. Optimum Propensity to save

Options :

- 1. A – IV, B – I, C – III, D – II
- 2. A – III, B – IV, C – I, D – II
- 3. A – I, B – III, C – IV, D – II
- 4. A – IV, B – II, C – III, D – I

Question Number : 157 Question Id : 6232171425 Question Type : MCQ Option Shuffling : Yes Display Question Number : Yes
Single Line Question Option : No Option Orientation : Vertical

Wrong Marks : 0

In Harrod's model if $G > G_w$ it implies

Options :

- 1. Saving increases faster than investment and income rises faster than G_w
- 2. Saving increases faster than investment and rise of income is less than G_w
- 3. Investment increases faster than saving and income rises faster than G_w
- 4. Investment increases faster than saving and rise of income is less than G_w

Question Number : 158 Question Id : 6232171426 Question Type : MCQ Option Shuffling : Yes Display Question Number : Yes
Single Line Question Option : No Option Orientation : Vertical

Wrong Marks : 0

According to Hirschman development can only take place by unbalancing the economy and it can be possible by investing

Options :

1. either in social overhead capital or in directly productive activities
2. both in social overhead capital or in directly productive activities
3. only in social overhead capital
4. only in directly productive activities

Question Number : 159 Question Id : 6232171427 Question Type : MCQ Option Shuffling : Yes Display Question Number : Yes
Single Line Question Option : No Option Orientation : Vertical

Wrong Marks : 0

Golden Age according to Robinson occurs

Options :

1. Growth rate of income equals growth rate of capital stock
2. Growth rate of population equals growth rate of income
3. Growth rate of savings equals the growth rate of population
4. Growth rate of population equals the growth rate of capital

Question Number : 160 Question Id : 6232171428 Question Type : MCQ Option Shuffling : Yes Display Question Number : Yes
Single Line Question Option : No Option Orientation : Vertical

Wrong Marks : 0

The model of low – level equilibrium trap recognized the interdependence between

Options :

1. Population growth, per capita income and per capita saving growth
2. Population growth, per capita saving and national income growth
3. Population growth, per capita income and national income growth

4. Population growth, per capita income and employment growth

Question Number : 161 Question Id : 6232171429 Question Type : MCQ Option Shuffling : Yes Display Question Number : Yes
Single Line Question Option : No Option Orientation : Vertical

Wrong Marks : 0

The Human Development Index (HDI) is a composite index constructed using

Options :

1. Life Expectancy, Health and Standard of Living
2. Longevity, Knowledge and Standard of Living
3. Life Expectancy, Education and Wealth
4. Longevity, Knowledge and Capital Stock

Question Number : 162 Question Id : 6232171430 Question Type : MCQ Option Shuffling : Yes Display Question Number : Yes
Single Line Question Option : No Option Orientation : Vertical

Wrong Marks : 0

According to Meade, the 'critical growth rate of the capital stock' is that which makes

Options :

1. the growth rate of income equal to the growth rate of savings
2. the growth rate of income equal to the growth rate of employment
3. the growth rate of income equal to the growth rate of capital stock
4. the growth rate of savings equal to the growth rate of consumption

Question Number : 163 Question Id : 6232171431 Question Type : MCQ Option Shuffling : Yes Display Question Number : Yes
Single Line Question Option : No Option Orientation : Vertical

Wrong Marks : 0

Negative externality is also known as

Options :

1. Resource curse
2. External diseconomies
3. Public costs
4. Public goods

Question Number : 164 Question Id : 6232171432 Question Type : MCQ Option Shuffling : Yes Display Question Number : Yes
Single Line Question Option : No Option Orientation : Vertical
Wrong Marks : 0

Many environmental resources are public goods, which are characterized by

Options :

1. Non-rivalry and non-exclusion in consumption
2. Non-rivalry and exclusion in consumption
3. Non-rivalry and non-exclusion in production
4. Non-rivalry and exclusion in production

Question Number : 165 Question Id : 6232171433 Question Type : MCQ Option Shuffling : Yes Display Question Number : Yes
Single Line Question Option : No Option Orientation : Vertical
Wrong Marks : 0

Which of the following is an example of tragedy of commons?

Options :

1. Common use of public toilets
2. Smoking in a public place
3. Excessive rain

4. Over fishing

Question Number : 166 Question Id : 6232171434 Question Type : MCQ Option Shuffling : Yes Display Question Number : Yes
Single Line Question Option : No Option Orientation : Vertical
Wrong Marks : 0

Total Damage Costs curve is

Options :

1. Downward slopping from left to right and top to bottom
2. U – shaped
3. Upward slopping from left to right and bottom to top
4. Horizontal to X – axis

Question Number : 167 Question Id : 6232171435 Question Type : MCQ Option Shuffling : Yes Display Question Number : Yes
Single Line Question Option : No Option Orientation : Vertical
Wrong Marks : 0

A stationary population is when population growth is

Options :

1. decreasing at increasing rate
2. decreasing at decreasing rate
3. cent percent
4. zero

Question Number : 168 Question Id : 6232171436 Question Type : MCQ Option Shuffling : Yes Display Question Number : Yes
Single Line Question Option : No Option Orientation : Vertical
Wrong Marks : 0

Match the following List – I with List – II

List – I

List – II

- | | |
|---|---------------------------|
| A. Blacker's Theory of Population Growth | I. Three Stages |
| B. Karl Sax's Theory of Population Growth | II. Four Stages |
| C. Landry's Theory of Population Growth | III. Five Stages |
| D. Prof. Sidgwick's Optimum Population | IV. Static Interpretation |

Options :

1. A – III, B – II, C – I, D – IV
2. A – III, B – IV, C – I, D – II
3. A – III, B – I, C – IV, D – II
4. A – IV, B – I, C – III, D – II

Question Number : 169 Question Id : 6232171437 Question Type : MCQ Option Shuffling : Yes Display Question Number : Yes
Single Line Question Option : No Option Orientation : Vertical

Wrong Marks : 0

The total fertility rate (TFR) is

Options :

1. the total number of children born in a country in a given year divided by labor force.
2. the number of births in a country divided by total population in a given year.
3. the number of children born to the average woman during her reproductive years
4. the number of women age 15-45 in a country divided by total population.

Question Number : 170 Question Id : 6232171438 Question Type : MCQ Option Shuffling : Yes Display Question Number : Yes
Single Line Question Option : No Option Orientation : Vertical

Wrong Marks : 0

The simplest explanation based on Lewis's model for rural-urban migration is

Options :

1. that people migrate when urban wages exceed rural wages
2. a higher expected income in urban areas
3. better infrastructure in urban areas
4. the availability of labor-intensive jobs in urban areas

Question Number : 171 Question Id : 6232171439 Question Type : MCQ Option Shuffling : Yes Display Question Number : Yes
Single Line Question Option : No Option Orientation : Vertical

Wrong Marks : 0

Biodiversity

Options :

1. refers to diversifying earth's nonrenewable resources
2. refers to reconstruction of tropical rainforests
3. refers to biological effects on commercial plantation
4. includes genetic, species, ecosystem, and functional diversities

Question Number : 172 Question Id : 6232171440 Question Type : MCQ Option Shuffling : Yes Display Question Number : Yes
Single Line Question Option : No Option Orientation : Vertical

Wrong Marks : 0

Which of the following is not a characteristic feature of Indian economy?

Options :

1. High rate of population growth
2. Higher rate of disguised unemployment

3. Large amount of current account surplus

4. Low level of adult literacy

Question Number : 173 Question Id : 6232171441 Question Type : MCQ Option Shuffling : Yes Display Question Number : Yes
Single Line Question Option : No Option Orientation : Vertical

Wrong Marks : 0

According to A.K. Sen, Khusro and G.R. Saini, the relationship between farm size and agricultural productivity in India is

Options :

1. Direct

2. Inverse

3. Fixed

4. Inverted U-Shaped

Question Number : 174 Question Id : 6232171442 Question Type : MCQ Option Shuffling : Yes Display Question Number : Yes
Single Line Question Option : No Option Orientation : Vertical

Wrong Marks : 0

Match the following List – I with List – II

List – I

A. Silk Industry

B. Cotton Industry

C. Coir Industry

D. Jute Industry

List – II

I. West Bengal

II. Tamil Nadu

III. Maharashtra

IV. Kerala

Options :

1. A – II, B – I, C – III, D – IV

2. A – II, B – III, C – I, D – IV

3. A – IV, B – III, C – I, D – II

4. A – II, B – III, C – IV, D – I

Question Number : 175 Question Id : 6232171443 Question Type : MCQ Option Shuffling : Yes Display Question Number : Yes
Single Line Question Option : No Option Orientation : Vertical

Wrong Marks : 0

The share of service sector in the Gross Value Added of India at current prices during 2018-19 is between

Options :

1. 51 to 52 per cent

2. 52 to 53 per cent

3. 53 to 54 per cent

4. 54 to 55 per cent

Question Number : 176 Question Id : 6232171444 Question Type : MCQ Option Shuffling : Yes Display Question Number : Yes
Single Line Question Option : No Option Orientation : Vertical

Wrong Marks : 0

Rural electrification in India is mainly helped

Options :

1. Village pottery

2. Power loom textiles

3. Rural banking

4. Co-operative farming

Question Number : 177 Question Id : 6232171445 Question Type : MCQ Option Shuffling : Yes Display Question Number : Yes
Single Line Question Option : No Option Orientation : Vertical

Wrong Marks : 0

Public expenditure on education in India as percentage of GDP during 2018-19 accounted for

Options :

1. 1.0%
2. 2.0%
3. 3.0%
4. 4.0%

Question Number : 178 Question Id : 6232171446 Question Type : MCQ Option Shuffling : Yes Display Question Number : Yes
Single Line Question Option : No Option Orientation : Vertical

Wrong Marks : 0

Swarna Jayanthi Gram Swarojgar Yojana (SGSY) is said to be a single self-employment scheme announced in 1999 was designed by merging the programmes

Options :

1. IRDP, TRYSEM, MWS
2. IRDP, DWCRA, MWS
3. IRDP, DWCRA, TRYSEM
4. IRDP, TRYSEM, DWCRA, MWS

Question Number : 179 Question Id : 6232171447 Question Type : MCQ Option Shuffling : Yes Display Question Number : Yes
Single Line Question Option : No Option Orientation : Vertical

Wrong Marks : 0

The combined liabilities of Centre and State as percentage of GDP during the two years 2016-17 and 2017 – 18 was consolidated at

Options :

1. 69%

2. 67%

3. 68%

4. 66%

Question Number : 180 Question Id : 6232171448 Question Type : MCQ Option Shuffling : Yes Display Question Number : Yes
Single Line Question Option : No Option Orientation : Vertical

Wrong Marks : 0

In which Five-Year Plan, the Squared Poverty Gap (SPG) was used to estimate the severity of poverty in India?

Options :

1. 6th Plan

2. 8th Plan

3. 9th Plan

4. 10th Plan