

Andhra Pradesh State Council of Higher Education

Question Paper Name: ARCHAEOLOGY
Subject Name: ARCHAEOLOGY
Creation Date: 2019-11-08 13:40:53
Duration: 180
Total Marks: 180
Display Marks: Yes
Share Answer Key With Delivery Engine: Yes

ARCHAEOLOGY

Group Number : 1
Group Id : 6232171
Group Maximum Duration : 0
Group Minimum Duration : 180
Revisit allowed for view? : No
Revisit allowed for edit? : No
Break time: 0
Group Marks: 180
Revisit allowed for group Instructions? : Yes
Maximum Instruction Time: 0
Minimum Instruction Time: 0

Teaching and Research Aptitude

Section Id : 6232171
Section Number : 1
Section type : Online
Mandatory or Optional: Mandatory
Number of Questions: 82
Number of Questions to be attempted: 82
Section Marks: 90
Display Number Panel: Yes
Group All Questions: No

Sub-Section Number: 1
Sub-Section Id: 6232171
Question Shuffling Allowed : Yes

Question Number : 1 Question Id : 6232171 Question Type : MCQ Option Shuffling : Yes Display Question Number : Yes Single Line Question Option : No Option Orientation : Vertical

Wrong Marks : 0

Discussion method can be used when

Options :

1. the topic is different
2. the topic is easy
3. the topic is very difficult
4. the topic is known

Question Number : 2 Question Id : 6232172 Question Type : MCQ Option Shuffling : Yes Display Question Number : Yes Single Line Question Option : No Option Orientation : Vertical

Wrong Marks : 0

Which of the following is not a teaching aid?

Options :

1. 16 mm film projector
2. Working model of photosynthesis
3. Tape records
4. Computer system

Question Number : 3 Question Id : 6232173 Question Type : MCQ Option Shuffling : Yes Display Question Number : Yes Single Line Question Option : No Option Orientation : Vertical

Wrong Marks : 0

The quality of teaching is reflected

Options :

1. by the quality questions asked by students
2. by the duration of sentence maintained in the class
3. by the pass percentage of students

by the attendance of students in the class

4.

Question Number : 4 Question Id : 6232174 Question Type : MCQ Option Shuffling : Yes Display Question Number : Yes Single Line Question Option : No Option Orientation : Vertical

Wrong Marks : 0

The detention system in primary schools may reflect the

Options :

1. pass rate in the classroom
2. absenteeism of students
3. drop-out rate increase
4. disinterest among the students

Question Number : 5 Question Id : 6232175 Question Type : MCQ Option Shuffling : Yes Display Question Number : Yes Single Line Question Option : No Option Orientation : Vertical

Wrong Marks : 0

The team teaching has the potential to develop

Options :

1. the habit of supplementary teaching of each other
2. competitive spirit among students
3. co-operation among the students
4. highlighting the gaps in each other's teaching

Question Number : 6 Question Id : 6232176 Question Type : MCQ Option Shuffling : Yes Display Question Number : Yes Single Line Question Option : No Option Orientation : Vertical

Wrong Marks : 0

In open learning system, the teacher's role is to

Options :

1. guide the students of their interest
2. supply material needed
3. give coaching through a centre
4. leave the students to learn on their own

Question Number : 7 Question Id : 6232177 Question Type : MCQ Option Shuffling : Yes Display Question Number : Yes Single Line Question Option : No Option Orientation : Vertical

Wrong Marks : 0

One of the most powerful factors affecting teaching is related to

Options :

1. prevailing political situation
2. economic status of the student
3. social system of the country
4. education system

Question Number : 8 Question Id : 6232178 Question Type : MCQ Option Shuffling : Yes Display Question Number : Yes Single Line Question Option : No Option Orientation : Vertical

Wrong Marks : 0

In which teaching method learner's participation is made optional and pro-active?

Options :

1. Project method
2. Buzz session
3. Discussion method

Brain storming session

4.

Question Number : 9 Question Id : 6232179 Question Type : MCQ Option Shuffling : Yes Display Question Number : Yes Single Line Question Option : No Option Orientation : Vertical

Wrong Marks : 0

Effectiveness of teaching has to be judged in terms of

Options :

1. student's interest
2. learning outcomes
3. course coverage
4. use of teaching aids in the classroom

Question Number : 10 Question Id : 62321710 Question Type : MCQ Option Shuffling : Yes Display Question Number : Yes Single Line Question Option : No Option Orientation : Vertical

Wrong Marks : 0

Formulation of hypothesis may not be necessary in

Options :

1. normative studies
2. experimental studies
3. historical studies
4. survey studies

Question Number : 11 Question Id : 62321711 Question Type : MCQ Option Shuffling : Yes Display Question Number : Yes Single Line Question Option : No Option Orientation : Vertical

Wrong Marks : 0

The information about population is called a parameter while the information corresponding to a sample is called

Options :

1. Inference
2. Universe
3. Sampling design
4. Statistic

Question Number : 12 Question Id : 62321712 Question Type : MCQ Option Shuffling : Yes Display Question Number : Yes Single Line Question Option : No Option Orientation : Vertical
Wrong Marks : 0

Reliability of a research result implies its

Options :

1. usefulness
2. uniqueness
3. verifiability
4. validity

Question Number : 13 Question Id : 62321713 Question Type : MCQ Option Shuffling : Yes Display Question Number : Yes Single Line Question Option : No Option Orientation : Vertical
Wrong Marks : 0

A good researcher lays his hands on

Options :

1. any area of his interest
2. many areas and tries to understand them at basic level
3. a specific area and tries to study it in great details

4. a specific area and tries to study it in minute details

Question Number : 14 Question Id : 62321714 Question Type : MCQ Option Shuffling : Yes Display Question Number : Yes Single Line Question Option : No Option Orientation : Vertical

Wrong Marks : 0

The usual sequence of steps in doing action research is

Options :

1. reflect, observe, plan, act

2. plan, act, observe, reflect

3. plan, reflect, observe, act

4. act, observe, plan, reflect

Question Number : 15 Question Id : 62321715 Question Type : MCQ Option Shuffling : Yes Display Question Number : Yes Single Line Question Option : No Option Orientation : Vertical

Wrong Marks : 0

Which one of the following is a non-probabilistic method of sampling?

Options :

1. Stratified sampling

2. Purposive sampling

3. Systematic sampling

4. Simple random sampling

Question Number : 16 Question Id : 62321716 Question Type : MCQ Option Shuffling : Yes Display Question Number : Yes Single Line Question Option : No Option Orientation : Vertical

Wrong Marks : 0

The appropriate sequence of steps of research that a researcher has to follow is

- A) Collection of data
- B) Listing of the objectives of research
- C) Methodology to be adopted
- D) Data analysis
- E) Results and discussion
- F) Identification of the research problem

Options :

1. F, C, B, D, A, E

2. F, B, A, D, C, E

3. F, A, B, C, D, E

4. F, B, C, A, D, E

Question Number : 17 Question Id : 62321717 Question Type : MCQ Option Shuffling : Yes Display Question Number : Yes Single Line Question Option : No Option Orientation : Vertical

Wrong Marks : 0

The research stream that has an immediate application is

Options :

1. Action research

2. Empirical research

3. Fundamental research

4. Experimental research

Question Number : 18 Question Id : 62321718 Question Type : MCQ Option Shuffling : Yes Display Question Number : Yes Single Line Question Option : No Option Orientation : Vertical

Wrong Marks : 0

Ethical norms in research do not involve guidelines for

Options :

1. patenting policy
2. data sharing policy
3. copy right policy
4. format of thesis

Sub-Section Number:	2
Sub-Section Id:	6232172
Question Shuffling Allowed :	Yes

Question Id : 62321719 Question Type : COMPREHENSION Sub Question Shuffling Allowed : Yes Group Comprehension Questions : No

Question Numbers : (19 to 27)

Question Label : Comprehension

Read the following passage and answer the questions given:

Education and ambition by themselves would have taken people nowhere without an expanding economy. Perhaps, even, the expanding economy explained the shift in Indian education. For Pravas, an engineer, the expansion had started some time before independence, when the old British emphasis on law and order (especially after the Indian Mutiny of 1857) had been modified by the idea of development.

Many people were sucked into that process. There was an explosive growth in India around 1930. It built momentum around 1947, had a big growth thereafter, and is now slowing down. In 1962, when I was thinking of universities and a career, I had a choice of professions and institutions. People today have to struggle hard. But these things have a positive side.

‘The average aspiration of the Indian is to grow under a shadow-and this is all right as long as someone else throws the shadow. In concrete terms, this means you look for employment, you try to get into structures created by other people. That’s how we got governed in the first place. The attitude is “As long as the local environment is the same, I don’t care who is running things at the top”. I read something in a paper some time ago. It was to the effect that, before the British came to India, the Indians were like bees in a garden. And that’s fine as long as someone else looked after the garden. And of course the Britishers became both the owners of the garden and the gardeners, the *malis* – with those other guys, the bees, going happily from flower to flower’.

‘What about the positive side of the struggle today?’

‘That shadow area I talked about is becoming congested now. It is forcing people to go out on their own. It is forcing them to be entrepreneurial.’

Sub questions

Question Number : 19 Question Id : 62321720 Question Type : MCQ Option Shuffling : Yes Display Question Number : Yes Single Line Question Option : No Option Orientation : Vertical

Wrong Marks : 0

What is fundamental for the growth of a nation?

Options :

1. Education
2. Ambition
3. Economy
4. Law and order

Question Number : 20 Question Id : 62321721 Question Type : MCQ Option Shuffling : Yes Display Question Number : Yes Single Line Question Option : No Option Orientation : Vertical

Wrong Marks : 0

What did the British emphasize on after the Indian Mutiny of 1857?

Options :

1. The idea of development
2. Law and order
3. Ancient Indian model of education
4. Expansion of the Empire

Question Number : 21 Question Id : 62321722 Question Type : MCQ Option Shuffling : Yes Display Question Number : Yes Single Line Question Option : No Option Orientation : Vertical

Wrong Marks : 0

When did choice of professions and institutions become comparatively easier?

Options :

1. After 1857
2. Around 1962
3. Around 1930

After 1947

4.

Question Number : 22 Question Id : 62321723 Question Type : MCQ Option Shuffling : Yes Display Question Number : Yes Single Line Question Option : No Option Orientation : Vertical

Wrong Marks : 0

What is the average aspiration of the Indian?

Options :

1. Employment in structures created by other people

1.

2. To be governed by the British

2.

3. Expanding economy

3.

4. Self employment

4.

Question Number : 23 Question Id : 62321724 Question Type : MCQ Option Shuffling : Yes Display Question Number : Yes Single Line Question Option : No Option Orientation : Vertical

Wrong Marks : 0

According to the passage, what is the concern of Indians?

Options :

1. The rulers at the helm of affairs

1.

2. Newspaper items

2.

3. Engineering education

3.

4. Local environment

4.

Question Number : 24 Question Id : 62321725 Question Type : MCQ Option Shuffling : Yes Display Question Number : Yes Single Line Question Option : No Option Orientation : Vertical

Wrong Marks : 0

Who are compared to bees in a garden?

Options :

1. The British officers
2. The Indians
3. The gardeners
4. Owners of the garden

Question Number : 25 Question Id : 62321726 Question Type : MCQ Option Shuffling : Yes Display Question Number : Yes Single Line Question Option : No Option Orientation : Vertical

Wrong Marks : 0

Who become the owners of the garden and the gardeners?

Options :

1. Only the bees
2. The Indians
3. Only the flowers
4. The Britishers

Question Number : 26 Question Id : 62321727 Question Type : MCQ Option Shuffling : Yes Display Question Number : Yes Single Line Question Option : No Option Orientation : Vertical

Wrong Marks : 0

What is the positive side of the struggle?

Options :

1. Indian find shelter
2. Indians love green gardens
3. Indians are forced to be entrepreneurial

4. Indians could freely roam around

Question Number : 27 Question Id : 62321728 Question Type : MCQ Option Shuffling : Yes Display Question Number : Yes Single Line Question Option : No Option Orientation : Vertical

Wrong Marks : 0

What do you understand by “That shadow area is becoming congested now”?

Options :

1. Densely populated
2. Heavy competition for employment in structures created by other people
3. Shadow becomes darker
4. Thinly populated

Sub-Section Number:	3
Sub-Section Id:	6232173
Question Shuffling Allowed :	Yes

Question Number : 28 Question Id : 62321729 Question Type : MCQ Option Shuffling : Yes Display Question Number : Yes Single Line Question Option : No Option Orientation : Vertical

Wrong Marks : 0

The non-verbal communication is also known as

Options :

1. Speaking communication
2. Verbal communication
3. Body language
4. Interpersonal communication

Question Number : 29 Question Id : 62321730 Question Type : MCQ Option Shuffling : Yes Display Question Number : Yes Single Line Question Option : No Option Orientation : Vertical

Wrong Marks : 0

The communication about the relationship among people is called

Options :

1. Interpersonal communication
2. Meta-communication
3. Speaking communication
4. Media communication

Question Number : 30 Question Id : 62321731 Question Type : MCQ Option Shuffling : Yes Display Question Number : Yes Single Line Question Option : No Option Orientation : Vertical

Wrong Marks : 0

Communication with touch behaviour called

Options :

1. Aesthetics
2. Proximics
3. Eugenics
4. Haptics

Question Number : 31 Question Id : 62321732 Question Type : MCQ Option Shuffling : Yes Display Question Number : Yes Single Line Question Option : No Option Orientation : Vertical

Wrong Marks : 0

Effective communication involves

Options :

1. One-way process
2. Two-way communication

3. Two-way communication with feedback

4. Two-way communication and Two-way communication with feedback

Question Number : 32 Question Id : 62321733 Question Type : MCQ Option Shuffling : Yes Display Question Number : Yes Single Line Question Option : No Option Orientation : Vertical

Wrong Marks : 0

One of the following is not related to communication cycle.

Options :

1. Sender

2. Message

3. Channel

4. Noise

Question Number : 33 Question Id : 62321734 Question Type : MCQ Option Shuffling : Yes Display Question Number : Yes Single Line Question Option : No Option Orientation : Vertical

Wrong Marks : 0

“With words we govern peoples”, said by

Options :

1. John Dewey

2. Benjamin Disrael

3. Rufford Murdock

4. Mc Greger

Question Number : 34 Question Id : 62321735 Question Type : MCQ Option Shuffling : Yes Display Question Number : Yes Single Line Question Option : No Option Orientation : Vertical

Wrong Marks : 0

The number of ingredients involved in the Aristotle's model of communication are

Options :

1. 5
2. 4
3. 3
4. 2

Question Number : 35 Question Id : 62321736 Question Type : MCQ Option Shuffling : Yes Display Question Number : Yes Single Line Question Option : No Option Orientation : Vertical

Wrong Marks : 0

'Shared Experience' is considered to be a key element in communication emphasised by

Options :

1. John Dewey
2. Aristotle
3. David Berlo
4. John Locke

Question Number : 36 Question Id : 62321737 Question Type : MCQ Option Shuffling : Yes Display Question Number : Yes Single Line Question Option : No Option Orientation : Vertical

Wrong Marks : 0

The 'Nobel' style of communication is on one of the following elements.

Options :

1. Rehetoric
2. Non-assertion

Persuasion

3.

Authority

4.

Question Number : 37 Question Id : 62321738 Question Type : MCQ Option Shuffling : Yes Display Question Number : Yes Single Line Question Option : No Option Orientation : Vertical

Wrong Marks : 0

The following numbers have a pattern. Identify the pattern and fill the blank.

165, 195, 255, 285, _____.

Options :

345

1.

365

2.

395

3.

435

4.

Question Number : 38 Question Id : 62321739 Question Type : MCQ Option Shuffling : Yes Display Question Number : Yes Single Line Question Option : No Option Orientation : Vertical

Wrong Marks : 0

The following words have a pattern. Identify the pattern and fill the blank.

CDJP, EEIQ, GFGS, _____, KHZZ.

Options :

IGDU

1.

IGDV

2.

JGDU

3.

GJDV

4.

Question Number : 39 Question Id : 62321740 Question Type : MCQ Option Shuffling : Yes Display Question Number : Yes Single Line Question Option : No Option Orientation : Vertical

Wrong Marks : 0

The following words have a pattern. Identify the pattern and fill the blank.

ACE, JJJ, SQO, BXT, _____.

Options :

1. KKK

2. JEK

3. ZAB

4. KEY

Question Number : 40 Question Id : 62321741 Question Type : MCQ Option Shuffling : Yes Display Question Number : Yes Single Line Question Option : No Option Orientation : Vertical

Wrong Marks : 0

The following items have a pattern. Identify the pattern and fill the blank.

B2E, D5H, F12K, H27N, _____.

Options :

1. J56I

2. J58Q

3. I64Q

4. Q62J

Question Number : 41 Question Id : 62321742 Question Type : MCQ Option Shuffling : Yes Display Question Number : Yes Single Line Question Option : No Option Orientation : Vertical

Wrong Marks : 0

A man leaves city A at 6.00 am and reaches city B at 10.00 am. Another man leaves city B at 8.00 am and reaches the city A at 12.00 noon. They will meet at time

Options :

1. 9.00 am

2. 9.30 am

3. 9.45 am

4. 10.00 am

Question Number : 42 Question Id : 62321743 Question Type : MCQ Option Shuffling : Yes Display Question Number : Yes Single Line Question Option : No Option Orientation : Vertical

Wrong Marks : 0

An year ago, the ratio between Anil's and Sunil's salaries was 3:5. The ratio of their individual salaries of last year and present are 2:3 and 4:5 respectively. If their total salaries for the present year are ₹ 43,000, the present salary of Anil is

Options :

1. ₹ 20,000

2. ₹ 19,600

3. ₹ 18,400

4. ₹ 18,000

Question Number : 43 Question Id : 62321744 Question Type : MCQ Option Shuffling : Yes Display Question Number : Yes Single Line Question Option : No Option Orientation : Vertical

Wrong Marks : 0

The present expenditure of an employee on food and other items is ₹ 2,590. There is an increase of prices of 10% on food items and 15% on other items. If the ratio of an employees expenditure on food items and other items is 2:5, by how much should his expenditure be increased on these items in order that he may maintain the same level of consumption as before?

Options :

1. ₹ 351-50

2. ₹ 360-50

3. ₹ 382-50

4. ₹ 410-75

Question Number : 44 Question Id : 62321745 Question Type : MCQ Option Shuffling : Yes Display Question Number : Yes Single Line Question Option : No Option Orientation : Vertical

Wrong Marks : 0

The profit earned by selling an article for ₹ 900 is twice the loss incurred when the same article is sold for ₹ 600. At what price should the article be sold to make 30% profit?

Options :

1. ₹ 750

2. ₹ 810

3. ₹ 840

4. ₹ 910

Question Number : 45 Question Id : 62321746 Question Type : MCQ Option Shuffling : Yes Display Question Number : Yes Single Line Question Option : No Option Orientation : Vertical

Wrong Marks : 0

What percent simple interest does a man get for his money when in discounting a bill due 10 months hence, he deducts 10% of the amount of the bill?

Options :

1. $11\frac{2}{3}$

2. $12\frac{1}{3}$

3. $13\frac{1}{3}$

4. $14\frac{2}{3}$

Sub-Section Number: 4
Sub-Section Id: 6232174
Question Shuffling Allowed : No

Question Number : 46 Question Id : 62321747 Question Type : MCQ Option Shuffling : Yes Display Question Number : Yes Single Line Question Option : No Option Orientation : Vertical

Wrong Marks : 0

If the conclusion of an argument follows from its premise/premises conclusively, that argument is called

Options :

1. Inductive argument

2. Deductive argument

3. Analogical argument

4. Circular argument

Question Number : 47 Question Id : 62321748 Question Type : MCQ Option Shuffling : Yes Display Question Number : Yes Single Line Question Option : No Option Orientation : Vertical

Wrong Marks : 0

In the following question Assertion and Reasoning statements are given. Based on that choose correct answer.

Assertion (A) : All teaching implies learning

Reason (R) : Learning to be useful must be derived from teaching

Options :

1. Both (A) and (B) are true but (R) is not a correct explanation of (A)

2. (A) is true but (R) is false

3. (A) is false but (R) is true

4. Both (A) and (B) are true; (R) is a correct explanation of (A)

Question Number : 48 Question Id : 62321749 Question Type : MCQ Option Shuffling : Yes Display Question Number : Yes Single Line Question Option : No Option Orientation : Vertical

Wrong Marks : 0

Consider the two premises and the four conclusions drawn from those two premises. Select the code that expresses conclusion drawn validly from the premises (jointly or separately).

Premises:

A) All cows are mammals

B) No cats are cows

Conclusions:

I) No cats are mammals

II) Some cats are mammals

III) No cows are cats

IV) No cows are non-mammals

Options :

1. Only I

2. I and II

3. III and IV

4. II and III

Question Number : 49 Question Id : 62321750 Question Type : MCQ Option Shuffling : Yes Display Question Number : Yes Single Line Question Option : No Option Orientation : Vertical

Wrong Marks : 0

You are given a statement followed by three assumptions numbered I, II and III. You have to consider the statement and the following assumptions, decide which assumptions is/are implicit in the statement and choose your answer accordingly statement:

Statement: “If you are intelligent, we are the right people for improving your performance” – An advertisement of a coaching centre.

- Assumptions:
- I) Brilliant students prefer to join coaching classes
 - II) Coaching classes help the students to improve their performance
 - III) No other institute provides such coaching

Options :

1. Only (I) and (II) are implicit
2. Only (II) and (III) are implicit
3. Only (I) and (III) are implicit
4. All are implicit

Question Number : 50 Question Id : 62321751 Question Type : MCQ Option Shuffling : Yes Display Question Number : Yes Single Line Question Option : No Option Orientation : Vertical

Wrong Marks : 0

The following words have some relationships. The two blanks given are also having the relationships. Identify the two words and choose the correct answer.

Fury : Ire : : _____ : _____.

Options :

1. Convulsion : Spasm
2. Amusement : Happiness
3. Joke : Laugh
4. Dispassion : Emotion

Wrong Marks : 0

The following words have some relationships. The two blanks given are also having the relationships. Identify the two words and choose the correct answer.

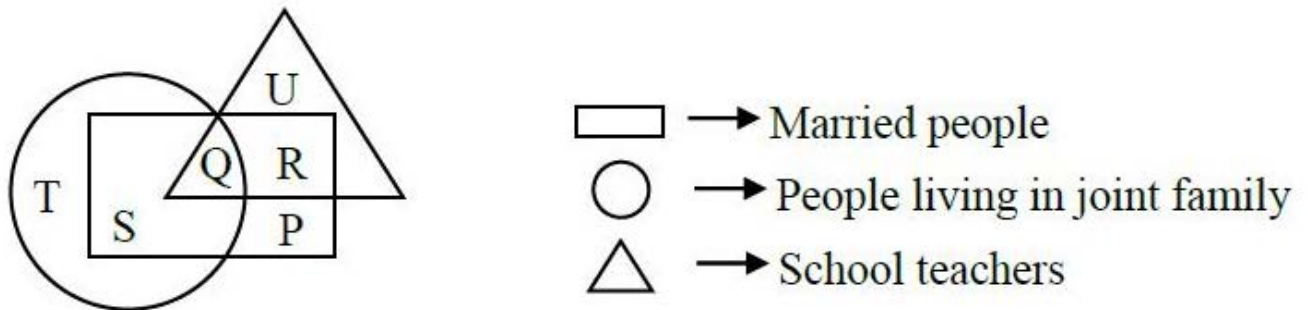
Wine : Grapes :: Vodka : _____.

Options :

1. Apples
2. Potatoes
3. Oranges
4. Flour

Wrong Marks : 0

Study the following figure and answer the question below.



Married teachers who live in joint family are represented by the letter

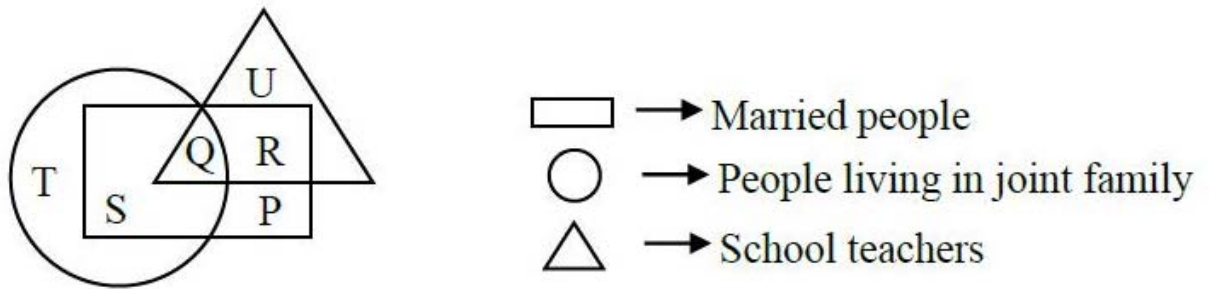
Options :

1. P
2. Q
3. R
4. S

Question Number : 53 Question Id : 62321754 Question Type : MCQ Option Shuffling : Yes Display Question Number : Yes Single Line Question Option : No Option Orientation : Vertical

Wrong Marks : 0

Study the following figure and answer the question below.



The people who live in joint family but are neither married nor teachers are represented by the letter

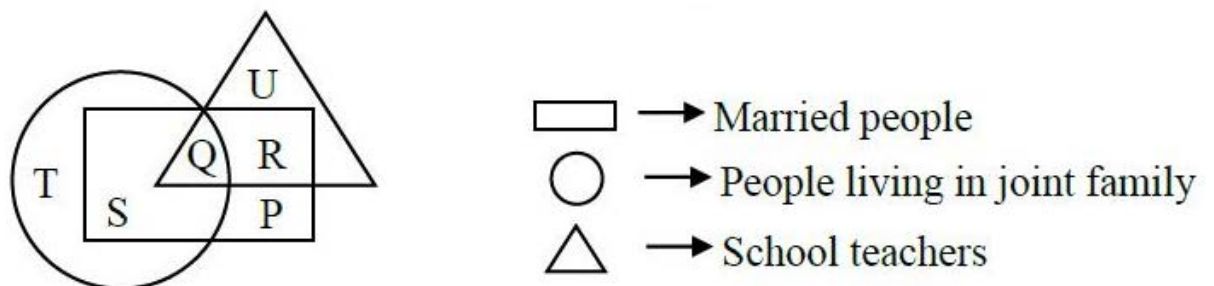
Options :

1. Q
2. R
3. S
4. T

Question Number : 54 Question Id : 62321755 Question Type : MCQ Option Shuffling : Yes Display Question Number : Yes Single Line Question Option : No Option Orientation : Vertical

Wrong Marks : 0

Study the following figure and answer the question below.



Married people who live in joint family but not are school teachers, are represented by the letter

Options :

1. S

2. R

3. P

4. U

Question Number : 55 Question Id : 62321756 Question Type : MCQ Option Shuffling : Yes Display Question Number : Yes Single Line Question Option : No Option Orientation : Vertical

Wrong Marks : 0

The following data gives the number of smartphones sold by five stores P, Q, R, S and T in five months. Study this data carefully and answer the question below it.

Store Month	P	Q	R	S	T
January	126	121	105	103	113
February	100	105	112	82	156
March	131	116	95	115	215
April	170	166	146	165	282
May	225	234	204	295	408

The total number of smartphones sold by store S in April and May together is what percent of the number of smartphones sold by Store T in the same months together?

Options :

1. $66\frac{2}{3}\%$

2. $59\frac{2}{3}\%$

3. $58\frac{1}{3}\%$

4. $65\frac{3}{4}\%$

Wrong Marks : 0

The following data gives the number of smartphones sold by five stores P, Q, R, S and T in five months. Study this data carefully and answer the question below it.

Store Month	P	Q	R	S	T
January	126	121	105	103	113
February	100	105	112	82	156
March	131	116	95	115	215
April	170	166	146	165	282
May	225	234	204	295	408

The total number of smartphones sold by all the stores together in July was 25% more than the total number of smartphones sold by all the stores together in January. How many smartphones were sold by all the stores together in July?

Options :

1. 745
2. 719
3. 710
4. 695

Wrong Marks : 0

The following data gives the number of smartphones sold by five stores P, Q, R, S and T in five months. Study this data carefully and answer the question below it.

Store Month	P	Q	R	S	T
January	126	121	105	103	113
February	100	105	112	82	156
March	131	116	95	115	215
April	170	166	146	165	282
May	225	234	204	295	408

What is the ratio of the total number of smartphones sold by store Q in April and May together to the total number of smartphones sold by stores R in the same month together?

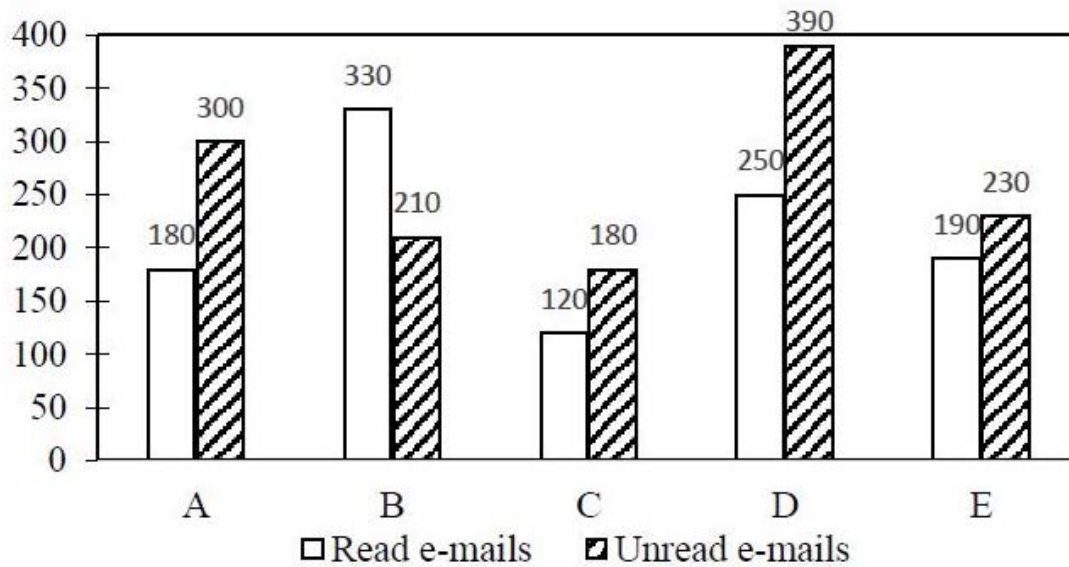
Options :

1. 6:7
2. 8:7
3. 9:7
4. 11:9

Question Number : 58 Question Id : 62321759 Question Type : MCQ Option Shuffling : Yes Display Question Number : Yes Single Line Question Option : No Option Orientation : Vertical

Wrong Marks : 0

The graph given below gives the number of received e-mails read by five persons A, B, C, D, E on Monday. This number includes the e-mails read and e-mails unread. Assume that there are no pending e-mails carried forward from previous days to Monday. Data relates to the number of mails received on Monday only.



If the number of e-mails received by F was 38% more than that by C and the number of e-mails read by F was 25% more than that unread by him, then how many e-mails were read by F?

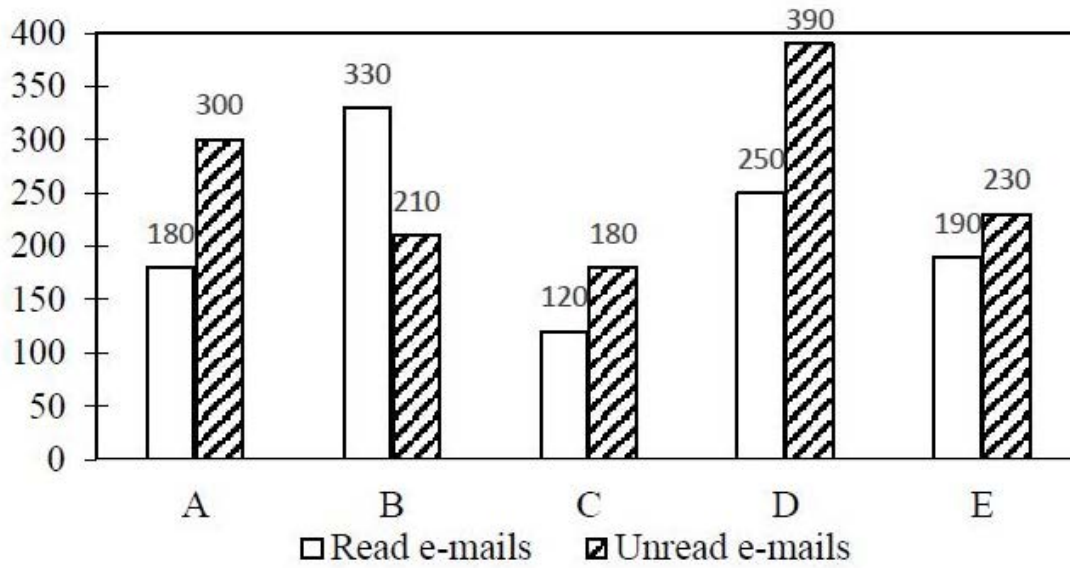
Options :

1. 230
2. 220
3. 210
4. 250

Question Number : 59 Question Id : 62321760 Question Type : MCQ Option Shuffling : Yes Display Question Number : Yes Single Line Question Option : No Option Orientation : Vertical

Wrong Marks : 0

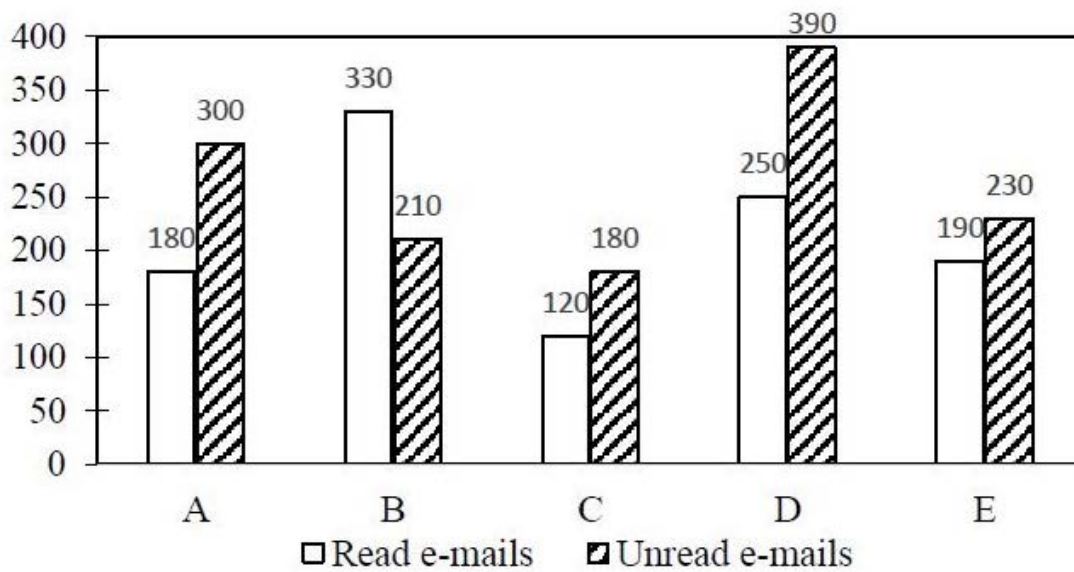
The graph given below gives the number of received e-mails read by five persons A, B, C, D, E on Monday. This number includes the e-mails read and e-mails unread. Assume that there are no pending e-mails carried forward from previous days to Monday. Data relates to the number of mails received on Monday only.



The percentage of read e-mails for A and G (out of received e-mails for each of them) were equal. If the number of e-mails received by G is 360, then how many e-mails were unread by G?

- Options :
1. 235
 2. 230
 3. 225
 4. 220

The graph given below gives the number of received e-mails read by five persons A, B, C, D, E on Monday. This number includes the e-mails read and e-mails unread. Assume that there are no pending e-mails carried forward from previous days to Monday. Data relates to the number of mails received on Monday only.



Out of the e-mails read by B, 60% are from male customers. The number of unread e-mails from female customers is 51 less than that of the read e-mails from female customers. What is the number of unread e-mails from male customers?

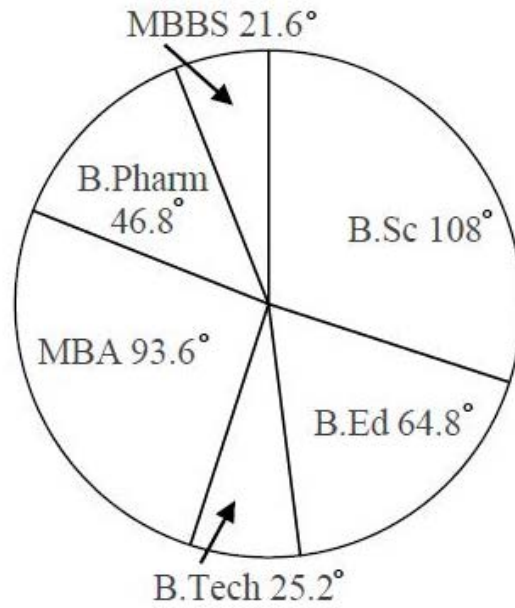
Options :

1. 135
2. 133
3. 131
4. 129

Question Number : 61 Question Id : 62321762 Question Type : MCQ Option Shuffling : Yes Display Question Number : Yes Single Line Question Option : No Option Orientation : Vertical

Wrong Marks : 0

The following pie-chart shows the distribution of students in different courses. Study this chart carefully and answer the following question. Total number of students = 6,800.



How much less percentage (approximately) of students are there in MBBS course as compared to B.Sc. course?

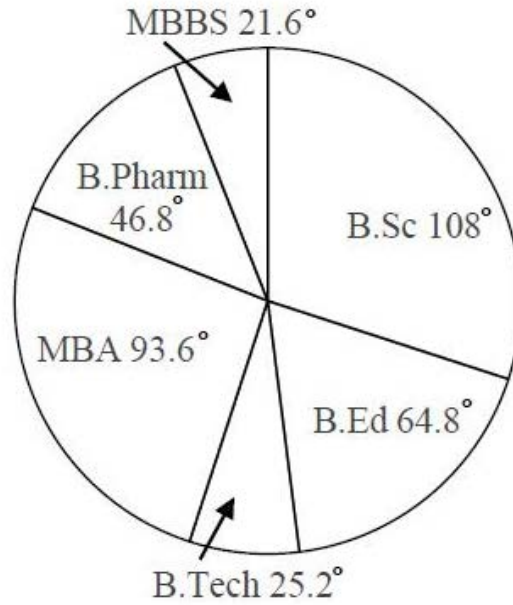
Options :

1. 80%
2. 60%
3. 40%
4. 36%

Question Number : 62 Question Id : 62321763 Question Type : MCQ Option Shuffling : Yes Display Question Number : Yes Single Line Question Option : No Option Orientation : Vertical

Wrong Marks : 0

The following pie-chart shows the distribution of students in different courses. Study this chart carefully and answer the following question. Total number of students = 6,800.



If in MBA the ratio of boys to girls is 5:3 and 20% of boys are in Finance course, then what is the number of boys in the Finance course?

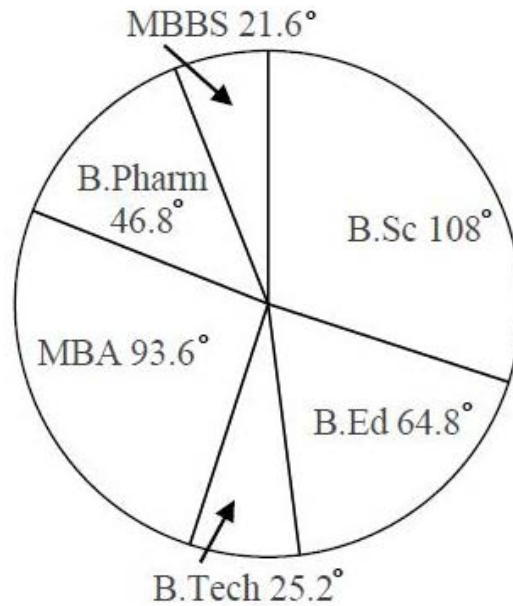
Options :

1. 325
2. 225
3. 229
4. 221

Question Number : 63 Question Id : 62321764 Question Type : MCQ Option Shuffling : Yes Display Question Number : Yes Single Line Question Option : No Option Orientation : Vertical

Wrong Marks : 0

The following pie-chart shows the distribution of students in different courses. Study this chart carefully and answer the following question. Total number of students = 6,800.



The number of students in MBBS and B.Tech together is what percent of that in B.Ed course?

Options :

1. 69.33%
2. 72.22%
3. 76%
4. 79.34%

Sub-Section Number: 5
Sub-Section Id: 6232175
Question Shuffling Allowed : Yes

Question Number : 64 Question Id : 62321765 Question Type : MCQ Option Shuffling : Yes Display Question Number : Yes Single Line Question Option : No Option Orientation : Vertical

Wrong Marks : 0

Which of the following refers to unsolicited e-mails in the form of advertising or chain letters?

Options :

1. Inbox
2. Trash
3. Spam
4. Compose

Question Number : 65 Question Id : 62321766 Question Type : MCQ Option Shuffling : Yes Display Question Number : Yes Single Line Question Option : No Option Orientation : Vertical

Wrong Marks : 0

The tags placed on an animal to record and track in a database all of the animal's movements is known as

Options :

1. POS
2. PPS
3. GPS
4. RFID

Question Number : 66 Question Id : 62321767 Question Type : MCQ Option Shuffling : Yes Display Question Number : Yes Single Line Question Option : No Option Orientation : Vertical

Wrong Marks : 0

Internal communication within institutions is done through

Options :

1. WAN
2. LAN
3. EBB

MMS

4.

Question Number : 67 Question Id : 62321768 Question Type : MCQ Option Shuffling : Yes Display Question Number : Yes Single Line Question Option : No Option Orientation : Vertical

Wrong Marks : 0

The total number of command buttons on the title bar of an opened word processing windows is

Options :

1. 6

2. 5

3. 3

4. 2

Question Number : 68 Question Id : 62321769 Question Type : MCQ Option Shuffling : Yes Display Question Number : Yes Single Line Question Option : No Option Orientation : Vertical

Wrong Marks : 0

The complete (full)) form of USB as used in computer related activities is

Options :

1. Universal Security Block

2. Universal Serial Bus

3. United Serial Bus

4. Ultra Security Block

Question Number : 69 Question Id : 62321770 Question Type : MCQ Option Shuffling : Yes Display Question Number : Yes Single Line Question Option : No Option Orientation : Vertical

Wrong Marks : 0

The key on the QWERTY keyboard used to produce alphabetic upper case letters is

Options :

1. Home
2. Tab
3. Num lock
4. Caps lock

Question Number : 70 Question Id : 62321771 Question Type : MCQ Option Shuffling : Yes Display Question Number : Yes Single Line Question Option : No Option Orientation : Vertical
Wrong Marks : 0

Which one of the following is not included in the basic functions of operating system?

Options :

1. Job control
2. Job scheduling
3. Memory management
4. Data management

Question Number : 71 Question Id : 62321772 Question Type : MCQ Option Shuffling : Yes Display Question Number : Yes Single Line Question Option : No Option Orientation : Vertical
Wrong Marks : 0

The temporary working memory of a computer system is the

Options :

1. arithmetic logic unit
2. flash memory
3. random access memory

4. read only memory

Question Number : 72 Question Id : 62321773 Question Type : MCQ Option Shuffling : Yes Display Question Number : Yes Single Line Question Option : No Option Orientation : Vertical

Wrong Marks : 0

A compiler is a software which converts

Options :

1. characters to bits

2. high level language to machine language

3. words to bits

4. machine language to high level language

Question Number : 73 Question Id : 62321774 Question Type : MCQ Option Shuffling : Yes Display Question Number : Yes Single Line Question Option : No Option Orientation : Vertical

Wrong Marks : 0

The aggregation of all eco systems on the earth is referred to as

Options :

1. Atmosphere

2. Ecosphere

3. Stratosphere

4. Ionosphere

Question Number : 74 Question Id : 62321775 Question Type : MCQ Option Shuffling : Yes Display Question Number : Yes Single Line Question Option : No Option Orientation : Vertical

Wrong Marks : 0

In which of the following area does radiant drainage fully develop?

Options :

1. On a point bar
2. Near a delta
3. Around an ox-bow lake
4. Around a volcano

Question Number : 75 Question Id : 62321776 Question Type : MCQ Option Shuffling : Yes Display Question Number : Yes Single Line Question Option : No Option Orientation : Vertical

Wrong Marks : 0

When the environmental lapse rate is less than the adiabatic lapse rate, the atmosphere is

Options :

1. Stable
2. Moderately unstable
3. High unstable
4. Neutral

Question Number : 76 Question Id : 62321777 Question Type : MCQ Option Shuffling : Yes Display Question Number : Yes Single Line Question Option : No Option Orientation : Vertical

Wrong Marks : 0

When a disaster has occurred, the early action in a Disaster Management Plan could be

Options :

1. Response and Rescue
2. Warning and preparedness
3. Relief and Rehabilitation
4. Shelter and food supply

Question Number : 77 Question Id : 62321778 Question Type : MCQ Option Shuffling : Yes Display Question Number : Yes Single Line Question Option : No Option Orientation : Vertical

Wrong Marks : 0

Ecosystem diversity can be best studied using the

Options :

1. Topographical maps
2. Geoinformatics
3. Geodesy
4. Geology

Question Number : 78 Question Id : 62321779 Question Type : MCQ Option Shuffling : Yes Display Question Number : Yes Single Line Question Option : No Option Orientation : Vertical

Wrong Marks : 0

The geometric mean of the data 2, 4, 27 is

Options :

1. 6
2. $6\sqrt{6}$
3. 16.5
4. $\sqrt{33}$

Question Number : 79 Question Id : 62321780 Question Type : MCQ Option Shuffling : Yes Display Question Number : Yes Single Line Question Option : No Option Orientation : Vertical

Wrong Marks : 0

Which of the following frequency region is part of sun's radiation?

Options :

1. Visible frequency region
2. Infrared frequency region

3. Ultraviolet frequency region

4. All of the other options

Question Number : 80 Question Id : 62321781 Question Type : MCQ Option Shuffling : Yes Display Question Number : Yes Single Line Question Option : No Option Orientation : Vertical

Wrong Marks : 0

In the standard hydrogen electrode, the pressure of hydrogen and hydrogen ion concentration respectively are:

Options :

1. 1 atm and 10 mol/L

2. 10 atm and 1 mol/L

3. 1 atm and 1 mol/L

4. 1 atm and 5 mol/L

Question Number : 81 Question Id : 62321782 Question Type : MCQ Option Shuffling : Yes Display Question Number : Yes Single Line Question Option : No Option Orientation : Vertical

Wrong Marks : 0

About half of the earth's photosynthesis is carried out by

Options :

1. Cyanobacteria

2. Rainforest flora

3. Protists

4. Marine phytoplankton

Question Number : 82 Question Id : 62321783 Question Type : MCQ Option Shuffling : Yes Display Question Number : Yes Single Line Question Option : No Option Orientation : Vertical

Wrong Marks : 0

The purpose of value education is best served by focussing on

Options :

1. cultural practices prevailing in the society
2. religious, moral practices and instruction
3. norms of conduct laid down by a social group
4. concern of human values

Question Number : 83 Question Id : 62321784 Question Type : MCQ Option Shuffling : Yes Display Question Number : Yes Single Line Question Option : No Option Orientation : Vertical

Wrong Marks : 0

The design of 5+3+3+4 suggested by New Education Policy, 2019 (Draft) in which the first stage of 5 year education is divided into

Options :

1. pre-primary school and post primary school
2. primary school and pre-primary school
3. pre-primary school , class-I and class-II
4. pre-primary , class-IV and class-V

Question Number : 84 Question Id : 62321785 Question Type : MCQ Option Shuffling : Yes Display Question Number : Yes Single Line Question Option : No Option Orientation : Vertical

Wrong Marks : 0

One of the following is not related to the aims of New Education Policy, 2019 (Draft)

Options :

1. Justice
2. Access

3. Equality

4. Equity

Question Number : 85 Question Id : 62321786 Question Type : MCQ Option Shuffling : Yes Display Question Number : Yes Single Line Question Option : No Option Orientation : Vertical

Wrong Marks : 0

The number of languages recognized by the 8th schedule of constitution of India in the beginning

Options :

1. 20

2. 22

3. 15

4. 12

Question Number : 86 Question Id : 62321787 Question Type : MCQ Option Shuffling : Yes Display Question Number : Yes Single Line Question Option : No Option Orientation : Vertical

Wrong Marks : 0

The Indian Education Policy is mostly influenced by the following method

Options :

1. Materialism

2. Metaphysics

3. Empencism

4. Constructivism

Question Number : 87 Question Id : 62321788 Question Type : MCQ Option Shuffling : Yes Display Question Number : Yes Single Line Question Option : No Option Orientation : Vertical

Wrong Marks : 0

The learning of outcomes envisaged by Benzamin Bloom has been confined to the following three domains.

Options :

1. Precisim – Affective – Psychomotor
2. Psychomotor – Perceplin – Attitude
3. Cognitive – Affective – Psychomotor
4. Articulation – Perception – Affective

Question Number : 88 Question Id : 62321789 Question Type : MCQ Option Shuffling : Yes Display Question Number : Yes Single Line Question Option : No Option Orientation : Vertical

Wrong Marks : 0

The document on Examination Reforms – A plan of action by UGC brought out to focus mainly on

Options :

1. Choice-based credit system
2. Open book system
3. Internal assessment
4. Assessment by students

Question Number : 89 Question Id : 62321790 Question Type : MCQ Option Shuffling : Yes Display Question Number : Yes Single Line Question Option : No Option Orientation : Vertical

Wrong Marks : 0

The technic of ‘School Mapping’ is used for

Options :

1. Mobilising finance for education

2. Mobilising people for education
3. Establishing school committees
4. Introducing new schools

Question Number : 90 Question Id : 62321791 Question Type : MCQ Option Shuffling : Yes Display Question Number : Yes Single Line Question Option : No Option Orientation : Vertical
Wrong Marks : 0

Who said that “adult education as inclusive and of education of politics, of citizenship and also of morality”?

Options :

1. S.N. Mukerjee
2. Humayun Kabir
3. K.G. Sayyidain
4. Jakir Hussain

ARCHAEOLOGY

Section Id :	6232172
Section Number :	2
Section type :	Online
Mandatory or Optional:	Mandatory
Number of Questions:	90
Number of Questions to be attempted:	90
Section Marks:	90
Display Number Panel:	Yes
Group All Questions:	No

Sub-Section Number:	1
Sub-Section Id:	6232176
Question Shuffling Allowed :	Yes

Question Number : 91 Question Id : 62321792 Question Type : MCQ Option Shuffling : Yes Display Question Number : Yes Single Line Question Option : No Option Orientation : Vertical
Wrong Marks : 0

The author of the work “The Archaeology of Landscapes” is

Options :

1. Leslie Alvin White
2. Christopher Tilly
3. Michael Shank
4. Peter Ucko

Question Number : 92 Question Id : 62321793 Question Type : MCQ Option Shuffling : Yes Display Question Number : Yes Single Line Question Option : No Option Orientation : Vertical

Wrong Marks : 0

Who wrote “Ancient Geography of India”?

Options :

1. Alexander Cunningham
2. J. Burgess
3. Buhler
4. E. Hultzseh

Question Number : 93 Question Id : 62321794 Question Type : MCQ Option Shuffling : Yes Display Question Number : Yes Single Line Question Option : No Option Orientation : Vertical

Wrong Marks : 0

Identify the Acheulian habitation and factory site that was excavated.

Options :

1. Pallavaram
2. Morhana Pahad

3. Chirki Nevasa

4. Paisra

Question Number : 94 Question Id : 62321795 Question Type : MCQ Option Shuffling : Yes Display Question Number : Yes Single Line Question Option : No Option Orientation : Vertical

Wrong Marks : 0

The evidence of pit dwelling of Neolithic times has been found at:

Options :

1. Mehargarh

2. Koldihawa

3. Chirand

4. Gufkral

Question Number : 95 Question Id : 62321796 Question Type : MCQ Option Shuffling : Yes Display Question Number : Yes Single Line Question Option : No Option Orientation : Vertical

Wrong Marks : 0

Identify the archaeologist from the following who did not apply site catchment analysis in the archaeological investigations.

Options :

1. Mortimer Wheeler

2. R.S. Pappu

3. Debasri Dasgupta

4. Shinde

Question Number : 96 Question Id : 62321797 Question Type : MCQ Option Shuffling : Yes Display Question Number : Yes Single Line Question Option : No Option Orientation : Vertical

Wrong Marks : 0

Who discovered the complete skeleton of 10 year old boy called “Turkana Boy” in 1982?

Options :

1. LSB Leakey
2. Richard Leakey & Alan Walker
3. Raymond Dart
4. Donald C. Johansen

Question Number : 97 Question Id : 62321798 Question Type : MCQ Option Shuffling : Yes Display Question Number : Yes Single Line Question Option : No Option Orientation : Vertical

Wrong Marks : 0

Who discovered the fossil of robust Zinanthropus skull at Olduvai Gorge in Tanzania?

Options :

1. Donald C. Johnsen
2. Richard Leakey
3. Mary Douglas Leakey
4. LSB Leakey

Question Number : 98 Question Id : 62321799 Question Type : MCQ Option Shuffling : Yes Display Question Number : Yes Single Line Question Option : No Option Orientation : Vertical

Wrong Marks : 0

Which of the following is the relatively most accurate method for dating fossils?

Options :

1. Radio-carbon method

2. Potassium-argon method

3. Electron spin resonance

4. Uranium-lead method

Question Number : 99 Question Id : 623217100 Question Type : MCQ Option Shuffling : Yes Display Question Number : Yes
Single Line Question Option : No Option Orientation : Vertical

Wrong Marks : 0

Which of the following is the most important factor for continuity of a species from evolutionary point of view?

Options :

1. Replication of genetic material

2. Formation of gametes

3. Synthesis of proteins

4. None of the other options

Question Number : 100 Question Id : 623217101 Question Type : MCQ Option Shuffling : Yes Display Question Number : Yes
Single Line Question Option : No Option Orientation : Vertical

Wrong Marks : 0

The rise of human civilization is the main characteristic feature of:

Options :

1. Holocene

2. Pleistocene

3. Oligocene

4. Miocene

Question Number : 101 Question Id : 623217102 Question Type : MCQ Option Shuffling : Yes Display Question Number : Yes
Single Line Question Option : No Option Orientation : Vertical
Wrong Marks : 0

Neanderthal people had some sort of religious beliefs, because they:

Options :

1. kept written records
2. painted pictures on cave walls
3. buried their dead
4. built temples in their villages

Question Number : 102 Question Id : 623217103 Question Type : MCQ Option Shuffling : Yes Display Question Number : Yes
Single Line Question Option : No Option Orientation : Vertical
Wrong Marks : 0

Placing artefacts into a typology is often the primary purpose of:

Options :

1. Use-wear analysis
2. Formal analysis
3. Residue analysis
4. Pollen analysis

Question Number : 103 Question Id : 623217104 Question Type : MCQ Option Shuffling : Yes Display Question Number : Yes
Single Line Question Option : No Option Orientation : Vertical
Wrong Marks : 0

_____ is the estimated population number and density that a given area of land can support, given the technology at the time.

Options :

1. Carrying capacity
2. Landscape archaeology
3. Palaeodemography
4. Site catchment analysis

Question Number : 104 Question Id : 623217105 Question Type : MCQ Option Shuffling : Yes Display Question Number : Yes
Single Line Question Option : No Option Orientation : Vertical

Wrong Marks : 0

The process of treating artefacts, ecofacts and even features to stop decay is known as:

Options :

1. Palynology
2. Palaeontology
3. Conservation
4. Typology

Question Number : 105 Question Id : 623217106 Question Type : MCQ Option Shuffling : Yes Display Question Number : Yes
Single Line Question Option : No Option Orientation : Vertical

Wrong Marks : 0

Coprolites are:

Options :

1. Ancient DNA

2. Pollen grains

3. Laterite soil

4. Fossilised faces

Question Number : 106 Question Id : 623217107 Question Type : MCQ Option Shuffling : Yes Display Question Number : Yes
Single Line Question Option : No Option Orientation : Vertical

Wrong Marks : 0

Soil associated with human associated is called:

Options :

1. Palaeosol

2. Anthrosol

3. Calisol

4. Archaeosol

Question Number : 107 Question Id : 623217108 Question Type : MCQ Option Shuffling : Yes Display Question Number : Yes
Single Line Question Option : No Option Orientation : Vertical

Wrong Marks : 0

Who wrote the book called “The Roots of Ancient India”?

Options :

1. Walter Fairservis

2. Stuart Piggott

3. V.G. Childe

A. Ghosh

4.

Question Number : 108 Question Id : 623217109 Question Type : MCQ Option Shuffling : Yes Display Question Number : Yes
Single Line Question Option : No Option Orientation : Vertical

Wrong Marks : 0

Evidence of heat treatment of artefacts has been found at:

Options :

1. Bausghat

2. Baghor I

3. Patne

4. Amiliya

Question Number : 109 Question Id : 623217110 Question Type : MCQ Option Shuffling : Yes Display Question Number : Yes
Single Line Question Option : No Option Orientation : Vertical

Wrong Marks : 0

The oldest well-dated microlithic assemblages are known from which of the following sites?

Options :

1. Patne

2. Bhimbetka

3. Jwalapuram

4. Morhana Pahar

Question Number : 110 Question Id : 623217111 Question Type : MCQ Option Shuffling : Yes Display Question Number : Yes
Single Line Question Option : No Option Orientation : Vertical

Wrong Marks : 0

Vertical recording of an excavated trench is known as:

Options :

1. Section drawing
2. Drawing of plan
3. Mapping
4. Contextual recording of artefacts on plan

Question Number : 111 Question Id : 623217112 Question Type : MCQ Option Shuffling : Yes Display Question Number : Yes
Single Line Question Option : No Option Orientation : Vertical

Wrong Marks : 0

Ash mounds are associated with:

Options :

1. Mesolithic phase
2. Neolithic of gangetic valley
3. Neolithic of South India
4. Neolithic of Kashmir valley

Question Number : 112 Question Id : 623217113 Question Type : MCQ Option Shuffling : Yes Display Question Number : Yes
Single Line Question Option : No Option Orientation : Vertical

Wrong Marks : 0

Which archaeological site has yielded the copper hard tool “Harpoon” from regular excavations?

Options :

1. Bisauli

2. Jakhera

3. Saipai

4. Gungeria

Question Number : 113 Question Id : 623217114 Question Type : MCQ Option Shuffling : Yes Display Question Number : Yes
Single Line Question Option : No Option Orientation : Vertical

Wrong Marks : 0

Hoof marks of Sambar suggesting a Sambar walking through the Mesolithic habitation were noticed at:

Options :

1. Baghor II

2. Mahadaha

3. Chopani Mando

4. Paisra

Question Number : 114 Question Id : 623217115 Question Type : MCQ Option Shuffling : Yes Display Question Number : Yes
Single Line Question Option : No Option Orientation : Vertical

Wrong Marks : 0

The study of pollen from different time periods is known as

Options :

1. Soil analysis

2. Palynology

3. Petrology

Taphonomy

4.

Question Number : 115 Question Id : 623217116 Question Type : MCQ Option Shuffling : Yes Display Question Number : Yes
Single Line Question Option : No Option Orientation : Vertical
Wrong Marks : 0

The excavated lower Palaeolithic site Kuliana is located in:

Options :

1. Bengal
2. Maharashtra
3. Karnataka
4. Odisha

Question Number : 116 Question Id : 623217117 Question Type : MCQ Option Shuffling : Yes Display Question Number : Yes
Single Line Question Option : No Option Orientation : Vertical
Wrong Marks : 0

“Prehistoric Rock Paintings of Bhimbetka, Central India” was written as

Options :

1. Y. Mathpal
2. V.S. Wakankar
3. H.D. Sankalia
4. K.K. Chakravarti

Question Number : 117 Question Id : 623217118 Question Type : MCQ Option Shuffling : Yes Display Question Number : Yes
Single Line Question Option : No Option Orientation : Vertical
Wrong Marks : 0

A flattish tool made on a broad rectangular or triangular flake that has a broad and straight cutting edge on one end is called as:

Options :

1. Chopper
2. Chopping tool
3. Cleaver
4. Hand axe

Question Number : 118 Question Id : 623217119 Question Type : MCQ Option Shuffling : Yes Display Question Number : Yes
Single Line Question Option : No Option Orientation : Vertical

Wrong Marks : 0

Fossil evidence of Homo Erectus Narmadensis is discovered at:

Options :

1. Bhimbetka
2. Hathnora
3. Beli Lena
4. Odai

Question Number : 119 Question Id : 623217120 Question Type : MCQ Option Shuffling : Yes Display Question Number : Yes
Single Line Question Option : No Option Orientation : Vertical

Wrong Marks : 0

Which one of the following is not a Neolithic site in Kashmir valley?

Options :

1. Puzgom

2. Burzahom

3. Gufkral

4. Manasbal

Question Number : 120 Question Id : 623217121 Question Type : MCQ Option Shuffling : Yes Display Question Number : Yes
Single Line Question Option : No Option Orientation : Vertical

Wrong Marks : 0

Which of the following is a chronometric dating method that can be applied to the organic remains such as charcoal dating back over the past 50,000 years?

Options :

1. C₁₄ method

2. Palaeomagnetic Reversal

3. Flourine Dating

4. Potassium Argon Dating

Question Number : 121 Question Id : 623217122 Question Type : MCQ Option Shuffling : Yes Display Question Number : Yes
Single Line Question Option : No Option Orientation : Vertical

Wrong Marks : 0

Which of the following dating method can be used to pottery and burnt flint?

Options :

1. Flourine method

2. Electron spin resonance

3. Thermoluminescence

4. Potassium Argon method

Question Number : 122 Question Id : 623217123 Question Type : MCQ Option Shuffling : Yes Display Question Number : Yes
Single Line Question Option : No Option Orientation : Vertical
Wrong Marks : 0

The stone tools characterized as “high angle flakes with the absence of secondary retouchings” were made by using:

Options :

1. Levallois technique
2. Clactonian technique
3. Vaal technique
4. Victoria west technique

Question Number : 123 Question Id : 623217124 Question Type : MCQ Option Shuffling : Yes Display Question Number : Yes
Single Line Question Option : No Option Orientation : Vertical
Wrong Marks : 0

Potassium Argon method is useful for dating in situations like:

Options :

1. Hominid remains found between two volcanic ash layers
2. The samples older than 1,000,000,000 years
3. Organic samples
4. Both Hominid remains found between two volcanic ash layers and Organic samples

Question Number : 124 Question Id : 623217125 Question Type : MCQ Option Shuffling : Yes Display Question Number : Yes
Single Line Question Option : No Option Orientation : Vertical
Wrong Marks : 0

Almost 90% of Earth’s 4.6 billion year history is referred to as

Options :

1. Proterozoic
2. Pre-Cambrian
3. Cenozoic
4. Mesozoic

Question Number : 125 Question Id : 623217126 Question Type : MCQ Option Shuffling : Yes Display Question Number : Yes
Single Line Question Option : No Option Orientation : Vertical
Wrong Marks : 0

The flint tools called “Parrot beak burins” of Western Europe were associated with:

Options :

1. Chatelperronian phase
2. Perigordian phase
3. Magdalenian phase
4. Solutrean phase

Question Number : 126 Question Id : 623217127 Question Type : MCQ Option Shuffling : Yes Display Question Number : Yes
Single Line Question Option : No Option Orientation : Vertical
Wrong Marks : 0

The Harappan trading post in North East Afghanistan was:

Options :

1. Kelleh Nisar
2. Shahdad
3. Tepe Yahya

4. Shortughai

Question Number : 127 Question Id : 623217128 Question Type : MCQ Option Shuffling : Yes Display Question Number : Yes
Single Line Question Option : No Option Orientation : Vertical

Wrong Marks : 0

Which one of the following is a per-Harappan site?

Options :

1. Chanhudaro
2. Amri
3. Nagesvara
4. Daimabad

Question Number : 128 Question Id : 623217129 Question Type : MCQ Option Shuffling : Yes Display Question Number : Yes
Single Line Question Option : No Option Orientation : Vertical

Wrong Marks : 0

Which of the following Harappan sites is significant because of the discovery of large number of burials?

Options :

1. Sinauli
2. Farmana
3. Bargaon
4. Balu

Question Number : 129 Question Id : 623217130 Question Type : MCQ Option Shuffling : Yes Display Question Number : Yes
Single Line Question Option : No Option Orientation : Vertical

Wrong Marks : 0

Identify the Harappan site that shows no evidence of shell working:

Options :

1. Nageshvara
2. Kuntasi
3. Bagasra
4. Kot Diji

Question Number : 130 Question Id : 623217131 Question Type : MCQ Option Shuffling : Yes Display Question Number : Yes
Single Line Question Option : No Option Orientation : Vertical
Wrong Marks : 0

The study of processes acting on plants and animals after they die is known as:

Options :

1. Paleoecology
2. Bio-stratigraphy
3. Taphonomy
4. Dendrochronology

Question Number : 131 Question Id : 623217132 Question Type : MCQ Option Shuffling : Yes Display Question Number : Yes
Single Line Question Option : No Option Orientation : Vertical
Wrong Marks : 0

The early Mesolithic Maglemosian culture was adopted to:

Options :

1. forest and lake side environment
2. tundra environment
3. desert environment

4. an equatorial environment

Question Number : 132 Question Id : 623217133 Question Type : MCQ Option Shuffling : Yes Display Question Number : Yes
Single Line Question Option : No Option Orientation : Vertical

Wrong Marks : 0

Which of the following does not suggest human manipulation of plants?

Options :

1. Noticeably thicker seed coats
2. Noticeably larger seeds
3. Seeds appearing in unusual areas
4. Seeds attached more firmly to stems

Question Number : 133 Question Id : 623217134 Question Type : MCQ Option Shuffling : Yes Display Question Number : Yes
Single Line Question Option : No Option Orientation : Vertical

Wrong Marks : 0

The Cromagnon people created paintings in the caves of:

Options :

1. Egypt and Africa
2. Italy and Greece
3. Tanzania and Africa
4. Southern France and Spain

Question Number : 134 Question Id : 623217135 Question Type : MCQ Option Shuffling : Yes Display Question Number : Yes
Single Line Question Option : No Option Orientation : Vertical

Wrong Marks : 0

The early historical site Sisupalgarh was excavated by:

Options :

1. G.R. Sharma
2. B.B. Lal
3. Mortimar Wheeler
4. A. Sundara

Question Number : 135 Question Id : 623217136 Question Type : MCQ Option Shuffling : Yes Display Question Number : Yes
Single Line Question Option : No Option Orientation : Vertical
Wrong Marks : 0

Chinese celadon ware and potsherds with Tamil script were discovered at:

Options :

1. Adam
2. Khairadih
3. Arikamedu
4. Attirampakkam

Question Number : 136 Question Id : 623217137 Question Type : MCQ Option Shuffling : Yes Display Question Number : Yes
Single Line Question Option : No Option Orientation : Vertical
Wrong Marks : 0

Who developed the system of dating layers based on pottery and ceramic findings?

Options :

1. W.M. Flinders Petric
2. Robert Furtwangler
3. Mortimar Wheeler

4. Leonard Wooley

Question Number : 137 Question Id : 623217138 Question Type : MCQ Option Shuffling : Yes Display Question Number : Yes
Single Line Question Option : No Option Orientation : Vertical
Wrong Marks : 0

Rock-cut burial cave of Megalithic phase is found at:

Options :

1. Komalaparathala

2. Eyyal

3. Sanur

4. Chengleput

Question Number : 138 Question Id : 623217139 Question Type : MCQ Option Shuffling : Yes Display Question Number : Yes
Single Line Question Option : No Option Orientation : Vertical
Wrong Marks : 0

Who introduced tank irrigation in South India on large scale?

Options :

1. Mesolithic people

2. Upper Palaeolithic people

3. Megalithic people

4. Neolithic people

Question Number : 139 Question Id : 623217140 Question Type : MCQ Option Shuffling : Yes Display Question Number : Yes
Single Line Question Option : No Option Orientation : Vertical
Wrong Marks : 0

The terracotta plaques found at Chandraketugarh show similarities with those found at:

Options :

1. Kausambi and Ahichchatra
2. Satanikota and Kausambi
3. Sringaverpur and Adam
4. Nasik and Arikamedu

Question Number : 140 Question Id : 623217141 Question Type : MCQ Option Shuffling : Yes Display Question Number : Yes
Single Line Question Option : No Option Orientation : Vertical

Wrong Marks : 0

Which of the following is the oldest Buddhist stupa?

Options :

1. Bodh Gaya
2. Piprawah
3. Barhut
4. Amaravati

Question Number : 141 Question Id : 623217142 Question Type : MCQ Option Shuffling : Yes Display Question Number : Yes
Single Line Question Option : No Option Orientation : Vertical

Wrong Marks : 0

Which of the following Ashokan pillar has the single lion figure on the capital?

Options :

1. Saranath
2. Lauriya Nandangarh
3. Rampurva

Sankisa

4.

Question Number : 142 Question Id : 623217143 Question Type : MCQ Option Shuffling : Yes Display Question Number : Yes
Single Line Question Option : No Option Orientation : Vertical

Wrong Marks : 0

The earliest cave excavated by Ashokan and gifted to the Ajivikas was:

Options :

1. Guntupalle

1.

2. Lomas Rishi

2.

3. Udayagiri

3.

4. Nasik

4.

Question Number : 143 Question Id : 623217144 Question Type : MCQ Option Shuffling : Yes Display Question Number : Yes
Single Line Question Option : No Option Orientation : Vertical

Wrong Marks : 0

The only rock-cut cave temple of the Eastern Chalukyas that was dedicated to Vishnu was at:

Options :

1. Mogulrajapuram

1.

2. Bhairavakonda

2.

3. Undavalli

3.

4. Sankaram

4.

Question Number : 144 Question Id : 623217145 Question Type : MCQ Option Shuffling : Yes Display Question Number : Yes
Single Line Question Option : No Option Orientation : Vertical

Wrong Marks : 0

Which one of the following is not an apsidal shrine?

Options :

1. Trivikrama temple at Ter
2. Kapotesvarasvami temple at Chejerla
3. Drupadiratha at Mahabalipuram
4. Nakula Sahadeva rath at Mahabalipuram

Question Number : 145 Question Id : 623217146 Question Type : MCQ Option Shuffling : Yes Display Question Number : Yes
Single Line Question Option : No Option Orientation : Vertical
Wrong Marks : 0

The stupa that was discovered and excavated by Alexander Cunningham was:

Options :

1. Deorkothar
2. Barhut
3. Nagarjunakonda
4. Amaravati

Question Number : 146 Question Id : 623217147 Question Type : MCQ Option Shuffling : Yes Display Question Number : Yes
Single Line Question Option : No Option Orientation : Vertical
Wrong Marks : 0

Parkham Yaksha figure was found at:

Options :

1. Mathura

2. Saranath

3. Gwalior

4. Besenagar

Question Number : 147 Question Id : 623217148 Question Type : MCQ Option Shuffling : Yes Display Question Number : Yes
Single Line Question Option : No Option Orientation : Vertical

Wrong Marks : 0

The Westernmost site of NBP ware is:

Options :

1. Taxila

2. Ahichchatra

3. Prabhas Patan

4. Tilaurkot

Question Number : 148 Question Id : 623217149 Question Type : MCQ Option Shuffling : Yes Display Question Number : Yes
Single Line Question Option : No Option Orientation : Vertical

Wrong Marks : 0

Which one of the following has a Khakhara type of sikhara

Options :

1. Varahi temple at Churasi

2. Rajarani temple, Bhubaneswar

3. Jagannatha temple at Puri

Lingaraja temple at Bhubaneswar

4.

Question Number : 149 Question Id : 623217150 Question Type : MCQ Option Shuffling : Yes Display Question Number : Yes
Single Line Question Option : No Option Orientation : Vertical

Wrong Marks : 0

Which of the Pallava rathas at Mahabalipuram has a hut like roof?

Options :

1. Arjuna ratha

2.

2. Dharmaraja ratha

3.

3. Bhima ratha

4.

4. Draupadi ratha

5.

Question Number : 150 Question Id : 623217151 Question Type : MCQ Option Shuffling : Yes Display Question Number : Yes
Single Line Question Option : No Option Orientation : Vertical

Wrong Marks : 0

The temple that was not built by Cholas was:

Options :

1. Brihadisvara

2.

2. Koranganatha

3.

3. Airavatesvara

4.

4. Kailasanatha

5.

Question Number : 151 Question Id : 623217152 Question Type : MCQ Option Shuffling : Yes Display Question Number : Yes
Single Line Question Option : No Option Orientation : Vertical

Wrong Marks : 0

Who identified the brick built structure that looks like a bird on ground plan found at Kausambi as syena chiti of Agnichayana practice?

Options :

1. R.C. Gaur
2. B.B. Lal
3. G.R. Sharma
4. M.K. Dhavalikar

Question Number : 152 Question Id : 623217153 Question Type : MCQ Option Shuffling : Yes Display Question Number : Yes
Single Line Question Option : No Option Orientation : Vertical

Wrong Marks : 0

In which form of Siva, Apasmarapurusha is found below his feet?

Options :

1. Gangadhara
2. Chandrasekhara
3. Sadasiva
4. Nataraja

Question Number : 153 Question Id : 623217154 Question Type : MCQ Option Shuffling : Yes Display Question Number : Yes
Single Line Question Option : No Option Orientation : Vertical

Wrong Marks : 0

The brick built temple of Gupta period is at:

Options :

1. Dasavatara temple at Deogarh

2. Parvati temple at Nachna Kuthara

3. Vishnu temple at Tigawa

4. Temple at Bhitargaon

Question Number : 154 Question Id : 623217155 Question Type : MCQ Option Shuffling : Yes Display Question Number : Yes
Single Line Question Option : No Option Orientation : Vertical

Wrong Marks : 0

Which of the following feature is not true about Samgamesvara temple at Pattadakal?

Options :

1. Square plan from base to sikhara

2. Dravidian sikhara

3. Sukanasika

4. Similar to Virupaksha temple in style

Question Number : 155 Question Id : 623217156 Question Type : MCQ Option Shuffling : Yes Display Question Number : Yes
Single Line Question Option : No Option Orientation : Vertical

Wrong Marks : 0

Relief sculptures of Ramayana themes with short label inscriptions are found in the temple at:

Options :

1. Papanatha temple at Pattadakal

2. Durga temple at Aihole

3. Huchchimalligudi, Aihole

4. Lakkundi temple

Question Number : 156 Question Id : 623217157 Question Type : MCQ Option Shuffling : Yes Display Question Number : Yes
Single Line Question Option : No Option Orientation : Vertical
Wrong Marks : 0

Which of the following rathas at Mahabalipuram has the tritala vimana?

Options :

1. Arjuna ratha

2. Bhima ratha

3. Dharmaraja ratha

4. Nakula Sahadeva ratha

Question Number : 157 Question Id : 623217158 Question Type : MCQ Option Shuffling : Yes Display Question Number : Yes
Single Line Question Option : No Option Orientation : Vertical
Wrong Marks : 0

Which one of the following is not an inscription of prasasti type of records?

Options :

1. Aihole inscription of Pulakesin II

2. Allahabad pillar inscription of Samudragupta

3. Besnagar Garuda pillar inscription

4. Gwalior inscription of Mihira Bhoja I

Question Number : 158 Question Id : 623217159 Question Type : MCQ Option Shuffling : Yes Display Question Number : Yes
Single Line Question Option : No Option Orientation : Vertical
Wrong Marks : 0

Which inscription of Ashokan was written from right to left?

Options :

1. Rupanath

2. Mansehra

3. Lumbini

4. Maski

Question Number : 159 Question Id : 623217160 Question Type : MCQ Option Shuffling : Yes Display Question Number : Yes
Single Line Question Option : No Option Orientation : Vertical

Wrong Marks : 0

Who deputed Heliodorus as an ambassador to the Indian king Bhagabhadra of Vidisa?

Options :

1. Demetrius

2. Euthydemus

3. Antialkidas

4. Menander

Question Number : 160 Question Id : 623217161 Question Type : MCQ Option Shuffling : Yes Display Question Number : Yes
Single Line Question Option : No Option Orientation : Vertical

Wrong Marks : 0

The event of Jinasena being taken from pataliputra to Kalinga is referred to in:

Options :

1. Hatigumpha inscription of Kharavela

2. Khalimpur copper plate of Dharmapala

3. Junagarh inscription of Rudradaman

4. Nasik inscription of Balasri

Question Number : 161 Question Id : 623217162 Question Type : MCQ Option Shuffling : Yes Display Question Number : Yes
Single Line Question Option : No Option Orientation : Vertical

Wrong Marks : 0

The term “Aryavarta” is mentioned in which one of the following?

Options :

1. Hatigumpa inscription of Kharavela

2. Junagarh inscription of Rudradaman

3. Allahabad pillar inscription of Samudragupta

4. Gwalior inscription of Mihirabhoja

Question Number : 162 Question Id : 623217163 Question Type : MCQ Option Shuffling : Yes Display Question Number : Yes
Single Line Question Option : No Option Orientation : Vertical

Wrong Marks : 0

In which inscription that the letters are no incised and they stand up in relief?

Options :

1. Nagarjuni hill cave inscription

2. Bhattiprolu Relic Casket inscription

3. Sohgaura copper plate inscription

Junagadh rock inscription

4.

Question Number : 163 Question Id : 623217164 Question Type : MCQ Option Shuffling : Yes Display Question Number : Yes
Single Line Question Option : No Option Orientation : Vertical

Wrong Marks : 0

In which of the following inscription the poets Bharavi and Kalidasa are mentioned?

Options :

1. Allahabad pillar inscription
2. Aihole inscription of Pulakesin II
3. Junagarh inscription of Rudradaman
4. None of the other options

Question Number : 164 Question Id : 623217165 Question Type : MCQ Option Shuffling : Yes Display Question Number : Yes
Single Line Question Option : No Option Orientation : Vertical

Wrong Marks : 0

The Persian god Atash is shown on the coins of:

Options :

1. Nahapana
2. Kanishka
3. Vima Kadphises
4. Pantaleon

Question Number : 165 Question Id : 623217166 Question Type : MCQ Option Shuffling : Yes Display Question Number : Yes
Single Line Question Option : No Option Orientation : Vertical

Wrong Marks : 0

The biggest hoard of Gupta gold coins discovered so far is:

Options :

1. Bharsar
2. Kalight
3. Tanda
4. Bayana

Question Number : 166 Question Id : 623217167 Question Type : MCQ Option Shuffling : Yes Display Question Number : Yes
Single Line Question Option : No Option Orientation : Vertical

Wrong Marks : 0

Yaudheya coin mould is found at:

Options :

1. Sunet
2. Mathura
3. Nalanda
4. Kausambi

Question Number : 167 Question Id : 623217168 Question Type : MCQ Option Shuffling : Yes Display Question Number : Yes
Single Line Question Option : No Option Orientation : Vertical

Wrong Marks : 0

The weight standard of the silver coins of Satavahanas was:

Options :

1. 50 grains
2. 36 grains

3. 40 grains

4. 28 grains

Question Number : 168 Question Id : 623217169 Question Type : MCQ Option Shuffling : Yes Display Question Number : Yes
Single Line Question Option : No Option Orientation : Vertical

Wrong Marks : 0

How many symbols were punched on an average on the punch marked coins?

Options :

1. 10

2. 3

3. 5

4. 8

Question Number : 169 Question Id : 623217170 Question Type : MCQ Option Shuffling : Yes Display Question Number : Yes
Single Line Question Option : No Option Orientation : Vertical

Wrong Marks : 0

Which of the following is true with regard to the cupro-nickel coins issued by Indo-Greeks?

Options :

1. Die-struck coins

2. All coins in rectangular shape

3. All coins in circular shape

4. Minted by casting technique

Question Number : 170 Question Id : 623217171 Question Type : MCQ Option Shuffling : Yes Display Question Number : Yes
Single Line Question Option : No Option Orientation : Vertical

Wrong Marks : 0

Peacock type of coins were issued by:

Options :

1. Samudragupta
2. Chandragupta I
3. Kumaragupta I
4. Kacha Gupta

Question Number : 171 Question Id : 623217172 Question Type : MCQ Option Shuffling : Yes Display Question Number : Yes
Single Line Question Option : No Option Orientation : Vertical

Wrong Marks : 0

Who issued Chakra-Vikrama type of coins?

Options :

1. Samudragupta
2. Chandragupta II
3. Kumaragupta I
4. Skandagupta

Question Number : 172 Question Id : 623217173 Question Type : MCQ Option Shuffling : Yes Display Question Number : Yes
Single Line Question Option : No Option Orientation : Vertical

Wrong Marks : 0

Rarely, the repousse method was used by Gupta money makers. Whose coins were manufactured by using this technique?

Options :

1. Samudragupta

Chandragupta I

2.

Chandragupta II

3.

Kumaragupta I

4.

Question Number : 173 Question Id : 623217174 Question Type : MCQ Option Shuffling : Yes Display Question Number : Yes
Single Line Question Option : No Option Orientation : Vertical

Wrong Marks : 0

Karshapanas and its multiples are not mentioned in which of the following?

Options :

Panini's Ashtadhyayi

1.

Tripitakas

2.

Jataka literature

3.

Brihadaranyaka Upanishad

4.

Question Number : 174 Question Id : 623217175 Question Type : MCQ Option Shuffling : Yes Display Question Number : Yes
Single Line Question Option : No Option Orientation : Vertical

Wrong Marks : 0

Biostratigraphy refers to:

Options :

an absolute dating method

1.

a method used to compare animal remains found at different places

2.

Method used to determine Taphonic processes

3.

All of the other options

4.

Question Number : 175 Question Id : 623217176 Question Type : MCQ Option Shuffling : Yes Display Question Number : Yes
Single Line Question Option : No Option Orientation : Vertical
Wrong Marks : 0

Identify the archaeologist who excavated Arikamedu site and established that the Indo-Roman trade has continued from 2nd Century BCE to 7th or 8th Century CE.

Options :

1. K. Paddayya

2. V.N. Misra

3. Vimala Beagley

4. B.B. Lal

Question Number : 176 Question Id : 623217177 Question Type : MCQ Option Shuffling : Yes Display Question Number : Yes
Single Line Question Option : No Option Orientation : Vertical
Wrong Marks : 0

Who invented the quadrant method in excavations?

Options :

1. Pitt Rivers

2. J.H. Hurst

3. J. Golson

4. A.E. Van Giffen

Question Number : 177 Question Id : 623217178 Question Type : MCQ Option Shuffling : Yes Display Question Number : Yes
Single Line Question Option : No Option Orientation : Vertical
Wrong Marks : 0

The area of archaeology that is concerned with ecological and climatic conditions of the past to understand past human life is called as:

Options :

1. Landscape Archaeology
2. Experimental Archaeology
3. Environmental Archaeology
4. Ethno Archaeology

Question Number : 178 Question Id : 623217179 Question Type : MCQ Option Shuffling : Yes Display Question Number : Yes
Single Line Question Option : No Option Orientation : Vertical

Wrong Marks : 0

Who excavated the historical site of Satanikota?

Options :

1. N.C. Ghosh
2. N.R. Banerji
3. B.B. Lal
4. G.R. Sharma

Question Number : 179 Question Id : 623217180 Question Type : MCQ Option Shuffling : Yes Display Question Number : Yes
Single Line Question Option : No Option Orientation : Vertical

Wrong Marks : 0

Who is the author of “Investigations into the Neolithic Culture of the Shorapur Doob, South India”?

Options :

1. H.D. Sankalia

2. M.L.K. Murty

3. K. Paddayya

4. V.N. Misra

Question Number : 180 Question Id : 623217181 Question Type : MCQ Option Shuffling : Yes Display Question Number : Yes
Single Line Question Option : No Option Orientation : Vertical
Wrong Marks : 0

Ian Hodder is famous for:

Options :

1. Indology

2. Colonial Archaeology

3. Processual Archaeology

4. Post-processual Archaeology