

Andhra Pradesh State Council of Higher Education

Question Paper Name: Tourism Administration Management
Subject Name: Tourism Administration & Management
Creation Date: 2019-11-09 13:00:00
Duration: 180
Total Marks: 180
Display Marks: Yes
Share Answer Key With Delivery Engine: Yes

Tourism Administration & Management

Group Number : 1
Group Id : 62321737
Group Maximum Duration : 0
Group Minimum Duration : 180
Revisit allowed for view? : No
Revisit allowed for edit? : No
Break time: 0
Group Marks: 180
Revisit allowed for group Instructions? : Yes
Maximum Instruction Time: 0
Minimum Instruction Time: 0

Teaching and Research Aptitude

Section Id : 62321773
Section Number : 1
Section type : Online
Mandatory or Optional: Mandatory
Number of Questions: 82
Number of Questions to be attempted: 82
Section Marks: 90
Display Number Panel: Yes
Group All Questions: No

Sub-Section Number: 1
Sub-Section Id: 623217217
Question Shuffling Allowed : Yes

Question Number : 1 Question Id : 6232176517 Question Type : MCQ Option Shuffling : Yes Display Question Number : Yes
Single Line Question Option : No Option Orientation : Vertical

Wrong Marks : 0

A teacher meeting his students for the first time should

Options :

1. start teaching without caring interest
2. develop rapport with the students
3. give broad outline of the subject
4. develop rapport with the students and give broad outline of the subject

Question Number : 2 Question Id : 6232176518 Question Type : MCQ Option Shuffling : Yes Display Question Number : Yes
Single Line Question Option : No Option Orientation : Vertical

Wrong Marks : 0

All of the following statements regarding a teacher are correct except that he/she is

Options :

1. friend, guide and philosopher
2. the leader of the class
3. the facilitator for effective learning
4. pouring the knowledge what she/he knows

Question Number : 3 Question Id : 6232176519 Question Type : MCQ Option Shuffling : Yes Display Question Number : Yes
Single Line Question Option : No Option Orientation : Vertical

Wrong Marks : 0

The first and necessary step in the teaching is

Options :

1. organizing teaching-learning material
2. knowing the background of students

3. knowing the subject well

4. planning before hand

Question Number : 4 Question Id : 6232176520 Question Type : MCQ Option Shuffling : Yes Display Question Number : Yes
Single Line Question Option : No Option Orientation : Vertical
Wrong Marks : 0

The development of a student's personality is affected mostly by

Options :

1. teaching methods

2. subject-matter

3. relationship between teacher and student

4. student's knowledge

Question Number : 5 Question Id : 6232176521 Question Type : MCQ Option Shuffling : Yes Display Question Number : Yes
Single Line Question Option : No Option Orientation : Vertical
Wrong Marks : 0

The best method of teaching for different concepts is

Options :

1. Dolton method

2. Heuristic method

3. Lecture method

4. Personalized method

Question Number : 6 Question Id : 6232176522 Question Type : MCQ Option Shuffling : Yes Display Question Number : Yes
Single Line Question Option : No Option Orientation : Vertical

Wrong Marks : 0

Students can have direct experience in classroom teaching at the level of

Options :

1. Symbolic

2. Iconic

3. Enactive

4. Didactic

Question Number : 7 Question Id : 6232176523 Question Type : MCQ Option Shuffling : Yes Display Question Number : Yes
Single Line Question Option : No Option Orientation : Vertical

Wrong Marks : 0

If a teacher adopts religious teaching in the classroom, it amounts to

Options :

1. against the constitution

2. correct according to his religion

3. not against national spirit

4. not against the code of ethics

Question Number : 8 Question Id : 6232176524 Question Type : MCQ Option Shuffling : Yes Display Question Number : Yes
Single Line Question Option : No Option Orientation : Vertical

Wrong Marks : 0

If a student becomes unconscious suddenly in the classroom, what you do is

Options :

1. making arrangement to send him home
2. giving first-aid to him
3. report to the principal's office
4. contact the parents of the student

Question Number : 9 Question Id : 6232176525 Question Type : MCQ Option Shuffling : Yes Display Question Number : Yes
Single Line Question Option : No Option Orientation : Vertical

Wrong Marks : 0

Teacher's professionalism may be assessed in terms of all the following commitments except

Options :

1. commitment to the parents and community
2. commitment to the religion and caste
3. commitment to the work and student
4. commitment to colleagues and office staff

Question Number : 10 Question Id : 6232176526 Question Type : MCQ Option Shuffling : Yes Display Question Number : Yes
Single Line Question Option : No Option Orientation : Vertical

Wrong Marks : 0

A statistical hypothesis is

Options :

1. a statement reported to population parameter
2. a statement related to research problem

a statement made by principal investigator

3.

a statement related to statistic

4.

Question Number : 11 Question Id : 6232176527 Question Type : MCQ Option Shuffling : Yes Display Question Number : Yes
Single Line Question Option : No Option Orientation : Vertical

Wrong Marks : 0

In a Research Report, Research gap analysis comes

Options :

after literature survey

1.

before literature survey

2.

after collection of data

3.

after the research methodology

4.

Question Number : 12 Question Id : 6232176528 Question Type : MCQ Option Shuffling : Yes Display Question Number : Yes
Single Line Question Option : No Option Orientation : Vertical

Wrong Marks : 0

Review of literature from general to specific is called

Options :

Inductive

1.

Deductive

2.

Chronological

3.

4. Overview

Question Number : 13 Question Id : 6232176529 Question Type : MCQ Option Shuffling : Yes Display Question Number : Yes
Single Line Question Option : No Option Orientation : Vertical
Wrong Marks : 0

Research design does not contain the following aspect.

Options :

1. The nature of data required

2. The type of data collection method

3. Type of techniques used for analysis

4. Need for the study

Question Number : 14 Question Id : 6232176530 Question Type : MCQ Option Shuffling : Yes Display Question Number : Yes
Single Line Question Option : No Option Orientation : Vertical
Wrong Marks : 0

A measure of internal consistency, that is how closely related a set of items are as a group is _____.

Options :

1. Chi square test

2. ANOVA

3. Cronbach's Alpha

4. Level of significance

Question Number : 15 Question Id : 6232176531 Question Type : MCQ Option Shuffling : Yes Display Question Number : Yes
Single Line Question Option : No Option Orientation : Vertical

Wrong Marks : 0

The probability rejecting H_0 when it is true is called

Options :

1. Type one error
2. Type two error
3. Level of significance
4. Confidence level

Question Number : 16 Question Id : 6232176532 Question Type : MCQ Option Shuffling : Yes Display Question Number : Yes
Single Line Question Option : No Option Orientation : Vertical

Wrong Marks : 0

The full form of DOI is

Options :

1. Digital Object Identifier
2. Digital Observation Identification
3. Digital Object Identity
4. Digital Order Identifier

Question Number : 17 Question Id : 6232176533 Question Type : MCQ Option Shuffling : Yes Display Question Number : Yes
Single Line Question Option : No Option Orientation : Vertical

Wrong Marks : 0

The following is not a citation style.

Options :

1. APA

2. MLA

3. Chicago/Turbian

4. Scopus

Question Number : 18 Question Id : 6232176534 Question Type : MCQ Option Shuffling : Yes Display Question Number : Yes
Single Line Question Option : No Option Orientation : Vertical

Wrong Marks : 0

The following is not included in the five ethics of research.

Options :

1. Informed consent

2. Respect for privacy

3. Proper citation to earlier works

4. Loyal to funding agency

Sub-Section Number: 2
Sub-Section Id: 623217218
Question Shuffling Allowed : Yes

Question Id : 6232176535 Question Type : COMPREHENSION Sub Question Shuffling Allowed : Yes Group Comprehension
Questions : No

Question Numbers : (19 to 27)

Question Label : Comprehension

Read the following passage and answer the questions given:

Our times seem poised to witness the resurgence of the romantic vision of human life, a view that underlines the importance of the spiritual by conceiving of life as a quest. In such a view, there are many obstacles and difficulties along the way, but if the seeker persists, then he or she will be rewarded by the union with a higher power or the spirit. In contrast the rationalist vision is sceptical of all higher powers and exalted aims of life and likes to show that all gods have clay feet. The romantic vision also emphasizes an intimate connection between human kind and universe, between self and not-self while the rationalist insists on an enduring separation between the two. He looks down at the romantic view as a scientifically wrong and philosophically confused reaction to the objective rift between mind and nature. For the rationalist, the romantic is engaged in a futile and regressive revolt against the 'bad news' of the Enlightenment: Separateness.

As a broader intellectual and social current, the romantic resurgence is more characteristic of Western societies than of most non-western ones where the romantic vision never lost its ascendancy over the rational. Or, to put it more accurately, the *Ur*-romantic vision of non-western societies generally remained oblivious of separateness and this differs from the Western post-enlightenment romantic sensibility which has been struggling to overcome the rift even as it has remained exquisitely aware of it.

Sub questions

Question Number : 19 Question Id : 6232176536 Question Type : MCQ Option Shuffling : Yes Display Question Number : Yes
Single Line Question Option : No Option Orientation : Vertical

Wrong Marks : 0

What has been our observation of contemporary reality?

Options :

1. Rise of postmodernism
2. Marxist ideology
3. Revival of romantic view of life
4. Democratic tendencies

Question Number : 20 Question Id : 6232176537 Question Type : MCQ Option Shuffling : Yes Display Question Number : Yes
Single Line Question Option : No Option Orientation : Vertical

Wrong Marks : 0

Which view challenges the spiritual seeker?

Options :

1. Life as a quest
2. Faith in one God
3. Belief in pantheon of gods
4. Life is absurd and has no meaning

Question Number : 21 Question Id : 6232176538 Question Type : MCQ Option Shuffling : Yes Display Question Number : Yes
Single Line Question Option : No Option Orientation : Vertical

Wrong Marks : 0

How does one define spirituality?

Options :

1. Prayer for forgiveness
2. Life after death
3. Sinless actions
4. Union with a higher spirit

Question Number : 22 Question Id : 6232176539 Question Type : MCQ Option Shuffling : Yes Display Question Number : Yes
Single Line Question Option : No Option Orientation : Vertical

Wrong Marks : 0

What do you understand by “all gods have clay feet”?

Options :

1. Idols are made of clay
2. Sceptical of all higher powers

Romantic view of gods

3.

Gods are earthly

4.

Question Number : 23 Question Id : 6232176540 Question Type : MCQ Option Shuffling : Yes Display Question Number : Yes
Single Line Question Option : No Option Orientation : Vertical

Wrong Marks : 0

What is the “bad news” of enlightenment for romantics?

Options :

Separation between the self and the non-self

1.

Intimate connection between man and the world

2.

Science and philosophy coming together

3.

Mind, nature and soul as one

4.

Question Number : 24 Question Id : 6232176541 Question Type : MCQ Option Shuffling : Yes Display Question Number : Yes
Single Line Question Option : No Option Orientation : Vertical

Wrong Marks : 0

What is the characteristic of resurgence of romantic vision?

Options :

Eastern societies

1.

African societies

2.

Western societies

3.

4. The Middle East societies

Question Number : 25 Question Id : 6232176542 Question Type : MCQ Option Shuffling : Yes Display Question Number : Yes
Single Line Question Option : No Option Orientation : Vertical

Wrong Marks : 0

Which of the societies have never lost their romantic vision?

Options :

1. Western societies
2. The American societies
3. The European societies
4. Non-western societies

Question Number : 26 Question Id : 6232176543 Question Type : MCQ Option Shuffling : Yes Display Question Number : Yes
Single Line Question Option : No Option Orientation : Vertical

Wrong Marks : 0

Western post-romantic enlightenment is aware of the

Options :

1. importance of spirituality
2. rift between the rational and the romantic
3. existential dilemma
4. cult of irrationality

Question Number : 27 Question Id : 6232176544 Question Type : MCQ Option Shuffling : Yes Display Question Number : Yes
Single Line Question Option : No Option Orientation : Vertical

Wrong Marks : 0

What is the central concept of the prose passage?

Options :

1. Resurgence of Romantic vision
2. Intellectual aspiration
3. Lack of spirituality
4. Philosophical confusion

Sub-Section Number:	3
Sub-Section Id:	623217219
Question Shuffling Allowed :	Yes

Question Number : 28 Question Id : 6232176545 Question Type : MCQ Option Shuffling : Yes Display Question Number : Yes
Single Line Question Option : No Option Orientation : Vertical

Wrong Marks : 0

Which one of these must be avoidable for effective communication?

Options :

1. Politeness
2. Listening
3. Sharing of activity
4. Ambiguity

Question Number : 29 Question Id : 6232176546 Question Type : MCQ Option Shuffling : Yes Display Question Number : Yes
Single Line Question Option : No Option Orientation : Vertical

Wrong Marks : 0

According to Eric Ashby, the fourth revolution in communication is

Options :

1. Printing
2. Written word
3. Home school
4. Electronics

Question Number : 30 Question Id : 6232176547 Question Type : MCQ Option Shuffling : Yes Display Question Number : Yes
Single Line Question Option : No Option Orientation : Vertical

Wrong Marks : 0

‘Synatactics’ is relating to

Options :

1. principles of sounds
2. characteristics of language
3. rules of signs
4. construction of sentence

Question Number : 31 Question Id : 6232176548 Question Type : MCQ Option Shuffling : Yes Display Question Number : Yes
Single Line Question Option : No Option Orientation : Vertical

Wrong Marks : 0

‘Anxiety tension’ is a behaviour in communication comes under

Options :

1. Physical barrier

2. Psychological barrier

3. Technical barrier

4. Cultural barrier

Question Number : 32 Question Id : 6232176549 Question Type : MCQ Option Shuffling : Yes Display Question Number : Yes
Single Line Question Option : No Option Orientation : Vertical

Wrong Marks : 0

‘Iconic Domain’ in the Edgar Dales Cone of experience is related to

Options :

1. Learning by doing

2. Learning through observation

3. Learning through abstraction

4. Learning by experience

Question Number : 33 Question Id : 6232176550 Question Type : MCQ Option Shuffling : Yes Display Question Number : Yes
Single Line Question Option : No Option Orientation : Vertical

Wrong Marks : 0

The book ‘Human Communication Theory – A comparative Essays’ written by

Options :

1. T.R. Nelson

2. Edward Bono

3. Edward Berlo

Frank Dance

4.

Question Number : 34 Question Id : 6232176551 Question Type : MCQ Option Shuffling : Yes Display Question Number : Yes
Single Line Question Option : No Option Orientation : Vertical

Wrong Marks : 0

‘Semantics’ is a major branch of Linguistics which says about the

Options :

1. Study of origin of language

1.

2. Structure of language

2.

3. Meaning of language

3.

4. Difference in the languages

4.

Question Number : 35 Question Id : 6232176552 Question Type : MCQ Option Shuffling : Yes Display Question Number : Yes
Single Line Question Option : No Option Orientation : Vertical

Wrong Marks : 0

Technological literacy is a skill referred to the field of

Options :

1. Industry

1.

2. Education

2.

3. Space science

3.

4. Environment

4.

Question Number : 36 Question Id : 6232176553 Question Type : MCQ Option Shuffling : Yes Display Question Number : Yes
Single Line Question Option : No Option Orientation : Vertical

Wrong Marks : 0

Student Information System (SIS) is used for the maintenance of

Options :

1. student response system
2. student data
3. student attendance
4. display of examination results

Question Number : 37 Question Id : 6232176554 Question Type : MCQ Option Shuffling : Yes Display Question Number : Yes
Single Line Question Option : No Option Orientation : Vertical

Wrong Marks : 0

What is the number that comes next in the sequence?

2, 10, 30, 56, _____.

Options :

1. 84
2. 72
3. 90
4. 100

Question Number : 38 Question Id : 6232176555 Question Type : MCQ Option Shuffling : Yes Display Question Number : Yes
Single Line Question Option : No Option Orientation : Vertical

Wrong Marks : 0

Which letters in the order will follow the blank spaces?

Z, X, V, T, R, _____, _____.

Options :

1. L, J

2. N, L

3. H, J

4. P, N

Question Number : 39 Question Id : 6232176556 Question Type : MCQ Option Shuffling : Yes Display Question Number : Yes
Single Line Question Option : No Option Orientation : Vertical

Wrong Marks : 0

If $a : b = 2 : 3$ and $b : c = 7 : 9$, then $a : b : c =$

Options :

1. 2 : 3 : 9

2. 2 : 7 : 9

3. 2 : 21 : 9

4. 14 : 21 : 27

Question Number : 40 Question Id : 6232176557 Question Type : MCQ Option Shuffling : Yes Display Question Number : Yes
Single Line Question Option : No Option Orientation : Vertical

Wrong Marks : 0

If the sum of the squares of three positive numbers, which are in the ratio $2 : 3 : 4$ is 725, then the sum of the numbers is

Options :

1. 45

2. 65

3. 75

4. 55

Question Number : 41 Question Id : 6232176558 Question Type : MCQ Option Shuffling : Yes Display Question Number : Yes
Single Line Question Option : No Option Orientation : Vertical

Wrong Marks : 0

The average of A, B, C is 60. The average of A and B is 65,
then the value of C is _____.

Options :

1. 50

2. 60

3. 65

4. 55

Question Number : 42 Question Id : 6232176559 Question Type : MCQ Option Shuffling : Yes Display Question Number : Yes
Single Line Question Option : No Option Orientation : Vertical

Wrong Marks : 0

A's income is 12% more than that of B's income. Then B's income is less than A's income by

Options :

1. 12%

2. $10\frac{2}{3}\%$

3. $10\frac{5}{7}\%$

$$15\frac{2}{3}\%$$

4.

Question Number : 43 Question Id : 6232176560 Question Type : MCQ Option Shuffling : Yes Display Question Number : Yes
Single Line Question Option : No Option Orientation : Vertical

Wrong Marks : 0

A man covers $\frac{1}{4}$ th of his total journey by train and $\frac{2}{3}$ rd by bus and the remaining 20 km by bullock cart. His total journey is _____ km.

Options :

1. 200

2. 240

3. 217

4. 320

Question Number : 44 Question Id : 6232176561 Question Type : MCQ Option Shuffling : Yes Display Question Number : Yes
Single Line Question Option : No Option Orientation : Vertical

Wrong Marks : 0

The average of x and y is 55 and the average of y and z is 45. Then $z - x =$

Options :

1. 10

2. 20

3. 15

4. -20

Question Number : 45 Question Id : 6232176562 Question Type : MCQ Option Shuffling : Yes Display Question Number : Yes
Single Line Question Option : No Option Orientation : Vertical

Wrong Marks : 0

An investment of Rs X become Rs 3720/- in 4 years and it become Rs 4080/- in 6 years under simple interest. What is the value of X?

Options :

1. 2,500
2. 2,800
3. 3,000
4. 3,250

Sub-Section Number: 4
Sub-Section Id: 623217220
Question Shuffling Allowed : No

Question Number : 46 Question Id : 6232176563 Question Type : MCQ Option Shuffling : Yes Display Question Number : Yes
Single Line Question Option : No Option Orientation : Vertical

Wrong Marks : 0

The words in the bottom row are related in the same way as the words in top row. Find the word and fill the blank.

Pallet, Easel, Brush

Text book, Lesson plan, _____.

Options :

1. Artist pen
2. Report card
3. Paint
4. Teacher's desk

Question Number : 47 Question Id : 6232176564 Question Type : MCQ Option Shuffling : Yes Display Question Number : Yes
Single Line Question Option : No Option Orientation : Vertical

Wrong Marks : 0

The words in the bottom row are related in the same way as the words in top row. Find the word and fill the blank.

Daisy, Flower, Plant

Bungalow, House, _____.

Options :

1. Building

2. Cottage

3. Apartment

4. City

Question Number : 48 Question Id : 6232176565 Question Type : MCQ Option Shuffling : Yes Display Question Number : Yes
Single Line Question Option : No Option Orientation : Vertical

Wrong Marks : 0

Sita is 8 years old. She has been asking her parents for a dog. Her parents have told her that they believe a dog would not be happy in an apartment, but they have given her permission to have a bird. Sita has not yet decided what kind of bird she would like to have. Then which of the following is correct.

Options :

1. Sita parents like birds better than the dogs

2. Sita does not like birds

3. Sita and her parents would like to move from the apartment

4. Sita and her parents live in an apartment

Wrong Marks : 0

The following statement and courses of action are given. Identify which course of action follows.

Statement: Severe drought is reported to have set in several parts of the country.

- I. Government should immediately make arrangement for providing financial assistance to these affected.
- II. Food, water and fodder should immediately be sent to all these areas to save the people and cattle.

Options :

1. Only I follows

1.

2. Only II follows

2.

3. Neither I nor II follows

3.

4. Both I and II follows

4.

Wrong Marks : 0

Rama is in the East of Raju and Raju is in the North of Ranga. Rao is in the South of Ranga then in which direction of Rama is to Rao?

Options :

1. South-East

1.

2. South-West

2.

3. North-East

3.

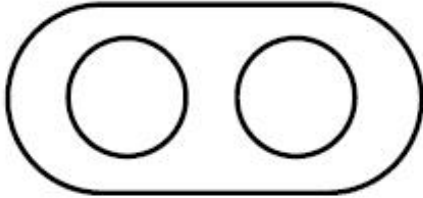
North-West

4.


Question Number : 51 Question Id : 6232176568 Question Type : MCQ Option Shuffling : Yes Display Question Number : Yes
Single Line Question Option : No Option Orientation : Vertical
Wrong Marks : 0

Which of the following diagram correctly represents lions, elephants and animals?

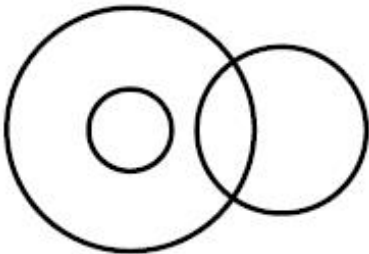
Options :



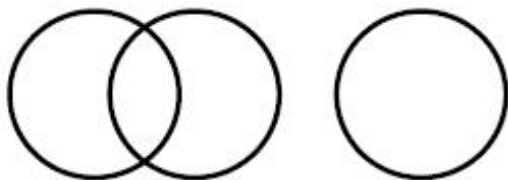
1.



2.



3.



4.

Question Number : 52 Question Id : 6232176569 Question Type : MCQ Option Shuffling : Yes Display Question Number : Yes
Single Line Question Option : No Option Orientation : Vertical
Wrong Marks : 0

A river always has

Options :

1. Boats

2. Delta

3. Fishes

4. Banks

Question Number : 53 Question Id : 6232176570 Question Type : MCQ Option Shuffling : Yes Display Question Number : Yes
Single Line Question Option : No Option Orientation : Vertical

Wrong Marks : 0

Appalakonda pointing a photograph said “I have no brother, and that man’s father is my fathers son”. Whose photograph was it?

Options :

1. His father

2. His son

3. His nephew

4. His own

Question Number : 54 Question Id : 6232176571 Question Type : MCQ Option Shuffling : Yes Display Question Number : Yes
Single Line Question Option : No Option Orientation : Vertical

Wrong Marks : 0

How many letter pairs in the word “PARADISE” one such pairs which contain the same number of letters between them as they have in the English alphabets ?

Options :

1. 2

2. 4

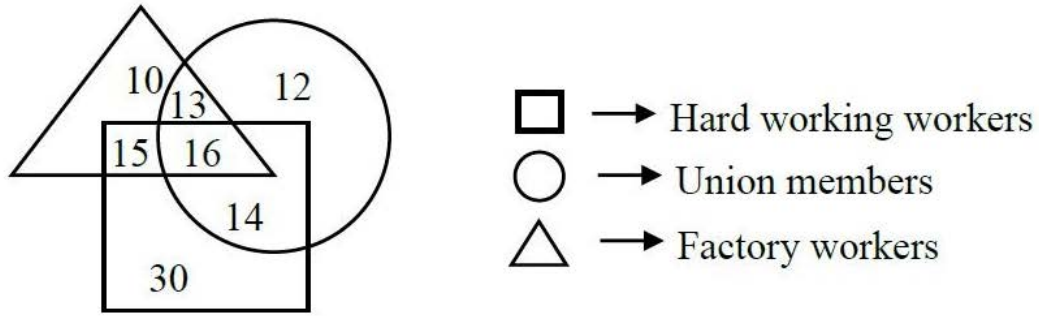
3. 3

4. 1

Question Number : 55 Question Id : 6232176572 Question Type : MCQ Option Shuffling : Yes Display Question Number : Yes
Single Line Question Option : No Option Orientation : Vertical

Wrong Marks : 0

Study the following figure carefully and answer the question given below.



The number of hard working factory workers who are also the members of the union is

Options :

1. 15

2. 14

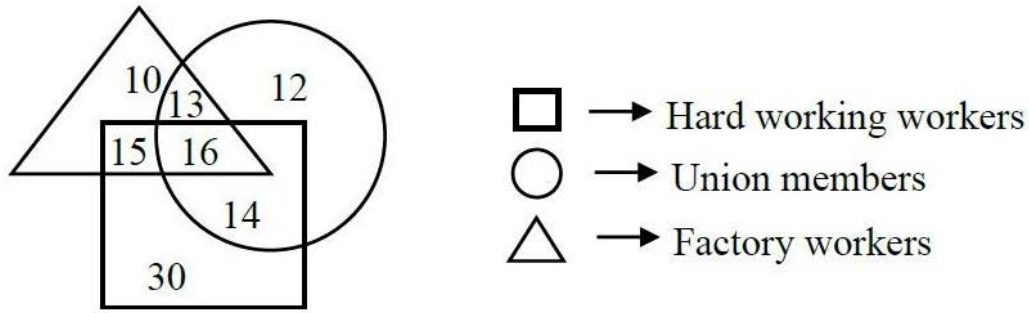
3. 30

4. 16

Question Number : 56 Question Id : 6232176573 Question Type : MCQ Option Shuffling : Yes Display Question Number : Yes
Single Line Question Option : No Option Orientation : Vertical

Wrong Marks : 0

Study the following figure carefully and answer the question given below.



The number of factory workers who are hardworking but not the members of the union, is

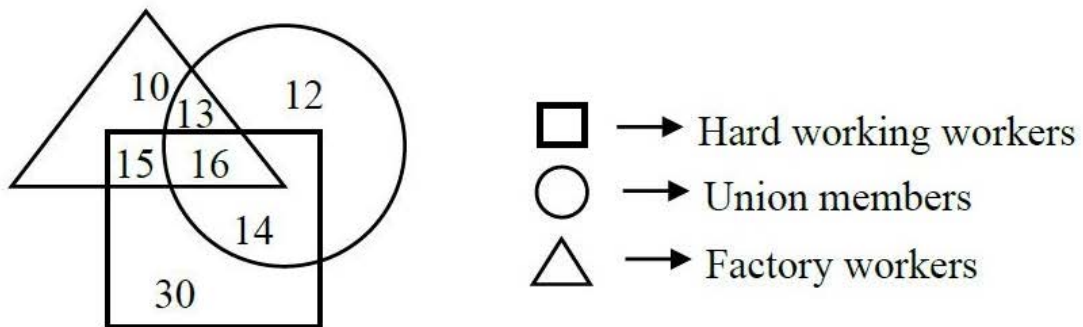
Options :

1. 31
2. 45
3. 15
4. 16

Question Number : 57 Question Id : 6232176574 Question Type : MCQ Option Shuffling : Yes Display Question Number : Yes Single Line Question Option : No Option Orientation : Vertical

Wrong Marks : 0

Study the following figure carefully and answer the question given below.



The number of union members who are working in factory and are not hardworking is

Options :

1. 13
2. 12

14

3.

16

4.

Question Number : 58 Question Id : 6232176575 Question Type : MCQ Option Shuffling : Yes Display Question Number : Yes
Single Line Question Option : No Option Orientation : Vertical

Wrong Marks : 0

The following tabular statement represents the performance of six students S_1, S_2, S_3, S_4, S_5 and S_6 in an examination of various subjects as indicated. Study it carefully and answer the question below.

Subject Student	Maths (Total marks 200)	Physics (Total marks 100)	Chemistry (Total marks 100)	English (Total marks 100)	General Education (Total marks 100)
S_1	184	72	85	85	57
S_2	140	80	81	75	84
S_3	131	74	90	81	87
S_4	195	68	76	96	91
S_5	138	78	91	72	81
S_6	165	82	93	60	76

The two students who got equal number of marks in all the subjects put together are

Options :

S_1 and S_3

1.

S_3 and S_5

2.

S_1 and S_5

3.

S_2 and S_5

4.

Question Number : 59 Question Id : 6232176576 Question Type : MCQ Option Shuffling : Yes Display Question Number : Yes
Single Line Question Option : No Option Orientation : Vertical

Wrong Marks : 0

The following tabular statement represents the performance of six students S_1, S_2, S_3, S_4, S_5 and S_6 in an examination of various subjects as indicated. Study it carefully and answer the question below.

Subject Student	Maths (Total marks 200)	Physics (Total marks 100)	Chemistry (Total marks 100)	English (Total marks 100)	General Education (Total marks 100)
S_1	184	72	85	85	57
S_2	140	80	81	75	84
S_3	131	74	90	81	87
S_4	195	68	76	96	91
S_5	138	78	91	72	81
S_6	165	82	93	60	76

The percentage of marks obtained by the student S_2 in all the subject put together is

Options :

1. 92

2. $85\frac{2}{3}$

3. $76\frac{2}{3}$

4. $80\frac{1}{3}$

Question Number : 60 Question Id : 6232176577 Question Type : MCQ Option Shuffling : Yes Display Question Number : Yes
Single Line Question Option : No Option Orientation : Vertical

Wrong Marks : 0

The following tabular statement represents the performance of six students S_1 , S_2 , S_3 , S_4 , S_5 and S_6 in an examination of various subjects as indicated. Study it carefully and answer the question below.

Subject Student	Maths (Total marks 200)	Physics (Total marks 100)	Chemistry (Total marks 100)	English (Total marks 100)	General Education (Total marks 100)
S_1	184	72	85	85	57
S_2	140	80	81	75	84
S_3	131	74	90	81	87
S_4	195	68	76	96	91
S_5	138	78	91	72	81
S_6	165	82	93	60	76

The student who got the highest number of marks in basic sciences, i.e., Maths, Physics and Chemistry.

Options :

1. S_6

2. S_1

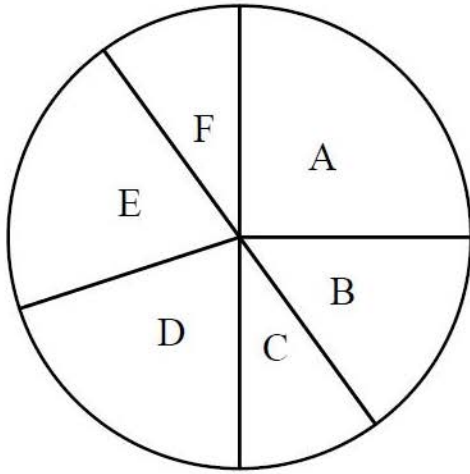
3. S_4

4. S_5

Question Number : 61 Question Id : 6232176578 Question Type : MCQ Option Shuffling : Yes Display Question Number : Yes Single Line Question Option : No Option Orientation : Vertical

Wrong Marks : 0

The following pie chart indicates the monthly budget of a family.



A	Food 25%
B	Clothing 15%
C	Conveyance 10%
D	House rent
E	Health 20%
F	Saving 10%

Based on the above information, answer the question below.

If the total monthly income of the family is ₹ 25,000, then how much amount is spent on house rent per month, in rupees?

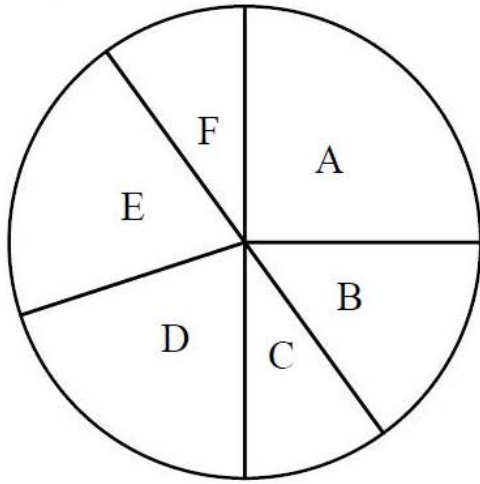
Options :

1. 2,500
2. 3,000
3. 4,500
4. 5,000

Question Number : 62 Question Id : 6232176579 Question Type : MCQ Option Shuffling : Yes Display Question Number : Yes
Single Line Question Option : No Option Orientation : Vertical

Wrong Marks : 0

The following pie chart indicates the monthly budget of a family.



A	Food 25%
B	Clothing 15%
C	Conveyance 10%
D	House rent
E	Health 20%
F	Saving 10%

Based on the above information, answer the question below.

If the annual income of the family is ₹ 4,20,000, then the total amount spent in rupees, per month on clothing and house rent, put-together is

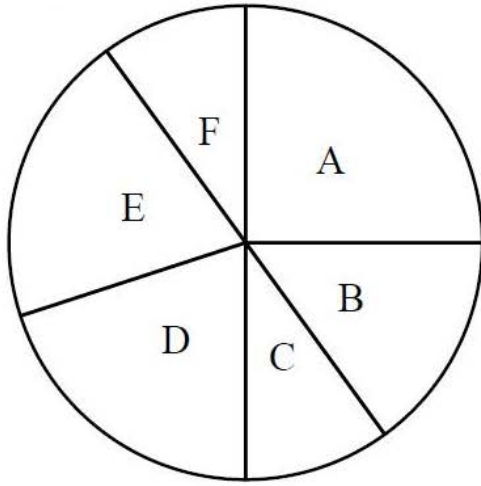
Options :

1. 12,000
2. 12,250
3. 9,500
4. 11,500

Question Number : 63 Question Id : 6232176580 Question Type : MCQ Option Shuffling : Yes Display Question Number : Yes
Single Line Question Option : No Option Orientation : Vertical

Wrong Marks : 0

The following pie chart indicates the monthly budget of a family.



A	Food 25%
B	Clothing 15%
C	Conveyance 10%
D	House rent
E	Health 20%
F	Saving 10%

Based on the above information, answer the question below.

If the half yearly expenditure on clothing by the family is 18,396 rupees, then the total monthly income of that family will be, in rupees

Options :

1. 40,440
2. 45,000
3. 52,300
4. 48,450

Sub-Section Number: 5
Sub-Section Id: 623217221
Question Shuffling Allowed : Yes

Question Number : 64 Question Id : 6232176581 Question Type : MCQ Option Shuffling : Yes Display Question Number : Yes
Single Line Question Option : No Option Orientation : Vertical
Wrong Marks : 0

Which of the following is not true about RAM?

Options :

1. RAM is a temporary storage area

RAM is volatile

2.

RAM is the same as hard disk storage

3.

Information stored in the RAM is gone when you turns the computer off

4.

Question Number : 65 Question Id : 6232176582 Question Type : MCQ Option Shuffling : Yes Display Question Number : Yes
Single Line Question Option : No Option Orientation : Vertical

Wrong Marks : 0

The following is not considered as secondary storage.

Options :

Floppy disk

1.

Optical disk

2.

Hard disk

3.

Flash disk

4.

Question Number : 66 Question Id : 6232176583 Question Type : MCQ Option Shuffling : Yes Display Question Number : Yes
Single Line Question Option : No Option Orientation : Vertical

Wrong Marks : 0

The full form of WAN is

Options :

Wide Area Network

1.

Wide Antenna Network

2.

World Area Network

3.

Wide Arial Network

4.

Question Number : 67 Question Id : 6232176584 Question Type : MCQ Option Shuffling : Yes Display Question Number : Yes
Single Line Question Option : No Option Orientation : Vertical

Wrong Marks : 0

What is the name of web page address?

Options :

1. Directory

2. Protocol

3. Domain

4. URL

Question Number : 68 Question Id : 6232176585 Question Type : MCQ Option Shuffling : Yes Display Question Number : Yes
Single Line Question Option : No Option Orientation : Vertical

Wrong Marks : 0

NMEICT stands for

Options :

1. National Mission on Education through ICT

2. National Mission on E-governance through ICT

3. National Mission on E-learning through ICT

4. National Mission on Evaluation through ICT

Question Number : 69 Question Id : 6232176586 Question Type : MCQ Option Shuffling : Yes Display Question Number : Yes
Single Line Question Option : No Option Orientation : Vertical

Wrong Marks : 0

Which one of the following is not a search engine?

Options :

1. Google
2. Chrome
3. Yahoo
4. Bing

Question Number : 70 Question Id : 6232176587 Question Type : MCQ Option Shuffling : Yes Display Question Number : Yes
Single Line Question Option : No Option Orientation : Vertical

Wrong Marks : 0

A compiler is a software which converts

Options :

1. characters to bits
2. high level language to machine language
3. machine language to high level language
4. words to bits

Question Number : 71 Question Id : 6232176588 Question Type : MCQ Option Shuffling : Yes Display Question Number : Yes
Single Line Question Option : No Option Orientation : Vertical

Wrong Marks : 0

Computer virus is a

Options :

1. Software
2. Hardware

3. Bacteria

4. Firewall

Question Number : 72 Question Id : 6232176589 Question Type : MCQ Option Shuffling : Yes Display Question Number : Yes
Single Line Question Option : No Option Orientation : Vertical

Wrong Marks : 0

The following is not an initiative of E-governance.

Options :

1. G2G

2. G2C

3. G2B

4. G2D

Question Number : 73 Question Id : 6232176590 Question Type : MCQ Option Shuffling : Yes Display Question Number : Yes
Single Line Question Option : No Option Orientation : Vertical

Wrong Marks : 0

The horizontal transport of any atmospheric property by the wind is

Options :

1. Advection

2. Radiation

3. Conduction

4. Reflection

Question Number : 74 Question Id : 6232176591 Question Type : MCQ Option Shuffling : Yes Display Question Number : Yes
Single Line Question Option : No Option Orientation : Vertical

Wrong Marks : 0

The chemical which causes ozone depletion is

Options :

1. Chloro Fluro Carbons
2. Dioxins
3. Polyphenols
4. Rayon

Question Number : 75 Question Id : 6232176592 Question Type : MCQ Option Shuffling : Yes Display Question Number : Yes
Single Line Question Option : No Option Orientation : Vertical

Wrong Marks : 0

The movement “Beej Bacho Andolan” was for the conservation of

Options :

1. Trees
2. Shrubs
3. Crops
4. Dogs

Question Number : 76 Question Id : 6232176593 Question Type : MCQ Option Shuffling : Yes Display Question Number : Yes
Single Line Question Option : No Option Orientation : Vertical

Wrong Marks : 0

The source of energy in an ecosystem is

Options :

1. D.N.A.

2. R.N.A.

3. Sunlight

4. Water

Question Number : 77 Question Id : 6232176594 Question Type : MCQ Option Shuffling : Yes Display Question Number : Yes
Single Line Question Option : No Option Orientation : Vertical

Wrong Marks : 0

Greenhouse effect is caused by

Options :

1. increase in O_2

2. increase in CO_2

3. decrease in O_2

4. decrease in CO_2

Question Number : 78 Question Id : 6232176595 Question Type : MCQ Option Shuffling : Yes Display Question Number : Yes
Single Line Question Option : No Option Orientation : Vertical

Wrong Marks : 0

Normally, rain water is slightly

Options :

1. pure

2. acidic

3. toxic

4. basic

Question Number : 79 Question Id : 6232176596 Question Type : MCQ Option Shuffling : Yes Display Question Number : Yes
Single Line Question Option : No Option Orientation : Vertical

Wrong Marks : 0

The thickness of ozone layer is measured in

Options :

1. Mn

2. DU

3. Nm

4. Hg

Question Number : 80 Question Id : 6232176597 Question Type : MCQ Option Shuffling : Yes Display Question Number : Yes
Single Line Question Option : No Option Orientation : Vertical

Wrong Marks : 0

The full form of CTBT is

Options :

1. Comprehensive Nuclear Test Ban Treaty

2. Comprehensive Test Bank Trust

3. Comprehensive Tree cutting Ban Treaty

4. Comprehensive Test Based Temperature

Question Number : 81 Question Id : 6232176598 Question Type : MCQ Option Shuffling : Yes Display Question Number : Yes
Single Line Question Option : No Option Orientation : Vertical

Wrong Marks : 0

In an ecosystem, bacteria are

Options :

1. producers
2. consumers
3. decomposers
4. suppliers

Question Number : 82 Question Id : 6232176599 Question Type : MCQ Option Shuffling : Yes Display Question Number : Yes
Single Line Question Option : No Option Orientation : Vertical

Wrong Marks : 0

Which of the following committee first talked about the relationship between academic work and productive work?

Options :

1. Sargent Committee
2. Khere Committee
3. Zakir Hussian Committee
4. Jnanam Committee

Question Number : 83 Question Id : 6232176600 Question Type : MCQ Option Shuffling : Yes Display Question Number : Yes
Single Line Question Option : No Option Orientation : Vertical

Wrong Marks : 0

Ethic and aesthetics are components of

Options :

1. Ontology

2. Cosmology

3. Epistemology

4. Axiology

Question Number : 84 Question Id : 6232176601 Question Type : MCQ Option Shuffling : Yes Display Question Number : Yes
Single Line Question Option : No Option Orientation : Vertical

Wrong Marks : 0

Another name for Basic Education proposed by M.K. Gandhi is

Options :

1. Wardha Education plan

2. Free and Compulsory Education

3. Vocational Education

4. Primary Education

Question Number : 85 Question Id : 6232176602 Question Type : MCQ Option Shuffling : Yes Display Question Number : Yes
Single Line Question Option : No Option Orientation : Vertical

Wrong Marks : 0

The launch of satellite channel by IGNOU for technological Education for the growth and development of Distance Education is called

Options :

1. Chandrayana-1

2. Eklavya channel

3. PSLV-3

4. Gnandarshan channel

Question Number : 86 Question Id : 6232176603 Question Type : MCQ Option Shuffling : Yes Display Question Number : Yes
Single Line Question Option : No Option Orientation : Vertical

Wrong Marks : 0

National Assessment and Accreditation Council (NAAC) is an autonomous institution established under the aegies of

Options :

1. UGC

2. ICSSR

3. CSIR

4. AICTE

Question Number : 87 Question Id : 6232176604 Question Type : MCQ Option Shuffling : Yes Display Question Number : Yes
Single Line Question Option : No Option Orientation : Vertical

Wrong Marks : 0

Autonomy in Higher Education implies freedom in

Options :

1. Policy-making

2. Curriculum development

3. Financial management

Administration

4.

Question Number : 88 Question Id : 6232176605 Question Type : MCQ Option Shuffling : Yes Display Question Number : Yes
Single Line Question Option : No Option Orientation : Vertical

Wrong Marks : 0

The recommendation of National Knowledge Commission is to fulfil the aim of to

Options :

1. create more teaching jobs

1.

2. replace the private managed higher education by public institution

2.

3. enable students to move from rural to urban

3.

4. ensure to increase number of student enrolment in higher education

4.

Question Number : 89 Question Id : 6232176606 Question Type : MCQ Option Shuffling : Yes Display Question Number : Yes
Single Line Question Option : No Option Orientation : Vertical

Wrong Marks : 0

Which among the following is NOT a Central University

Options :

1. Nalanda University

1.

2. Assam University

2.

3. Kurukshetra University

3.

4. Guru Grhasidas Vishwavidyalaya

4.

Question Number : 90 Question Id : 6232176607 Question Type : MCQ Option Shuffling : Yes Display Question Number : Yes
Single Line Question Option : No Option Orientation : Vertical

Wrong Marks : 0

India's first Defence University was established in the state of

Options :

1. Andhra Pradesh

2. Punjab

3. Haryana

4. Uttara Pradesh

Tourism Administration & Management

Section Id :	62321774
Section Number :	2
Section type :	Online
Mandatory or Optional:	Mandatory
Number of Questions:	90
Number of Questions to be attempted:	90
Section Marks:	90
Display Number Panel:	Yes
Group All Questions:	No

Sub-Section Number:	1
Sub-Section Id:	623217222
Question Shuffling Allowed :	Yes

Question Number : 91 Question Id : 6232176608 Question Type : MCQ Option Shuffling : Yes Display Question Number : Yes
Single Line Question Option : No Option Orientation : Vertical

Wrong Marks : 0

Eco-Tourism is a form of the following :

Options :

1. Mass Tourism

2. Sustainable Tourism

3. Alternative Tourism

Spiritual Tourism

4.

Question Number : 92 Question Id : 6232176609 Question Type : MCQ Option Shuffling : Yes Display Question Number : Yes
Single Line Question Option : No Option Orientation : Vertical

Wrong Marks : 0

This consists of two lists of Natural Vegetation and Wild Life Sanctuaries/National Parks.

The candidate has to match an item in one list with an item in the other.

List – I

List – II

(Types of Natural Vegetation)

(Name of Wild Life Sanctuaries/ National Parks)

a. Tidal forest

1. Sunder ban

b. Alpine forest

2. Dachigam

c. Evergreen forest

3. Manas

d. Tropical Deciduous forest

4. Mudumalai

Options :

1. a-2 b-3 c-4 d-1

2. a-1 b-2 c-3 d-4

3. a-2 b-3 c-1 d-4

4. a-1 b-3 c-2 d-4

Question Number : 93 Question Id : 6232176610 Question Type : MCQ Option Shuffling : Yes Display Question Number : Yes
Single Line Question Option : No Option Orientation : Vertical

Wrong Marks : 0

Which of the following are biosphere reserves ?

I. Nanda Devi

II. Nilgiri

III. Simlipal

IV. Dudhwa

Options :

1. I, II & III are correct.

2. I & II are correct.

3. I & IV are correct.

4. All of the other options are correct.

Question Number : 94 Question Id : 6232176611 Question Type : MCQ Option Shuffling : Yes Display Question Number : Yes
Single Line Question Option : No Option Orientation : Vertical

Wrong Marks : 0

Chef de rang is

Options :

1. Position in the kitchen

2. Position in the restaurant

3. Position in the housekeeping department

4. Position in the front office

Question Number : 95 Question Id : 6232176612 Question Type : MCQ Option Shuffling : Yes Display Question Number : Yes
Single Line Question Option : No Option Orientation : Vertical

Wrong Marks : 0

In which continent you will find the country named 'Burkina Faso'?

Options :

1. South America

2. Asia

3. Africa

4. Europe

Question Number : 96 Question Id : 6232176613 Question Type : MCQ Option Shuffling : Yes Display Question Number : Yes
Single Line Question Option : No Option Orientation : Vertical

Wrong Marks : 0

Which city is the capital of Switzerland?

Options :

1. Zurich
2. Bern
3. Basel
4. Geneva

Question Number : 97 Question Id : 6232176614 Question Type : MCQ Option Shuffling : Yes Display Question Number : Yes
Single Line Question Option : No Option Orientation : Vertical

Wrong Marks : 0

Identify the sequence of the four Indian hotel chains according to the year of their establishment.

- | | |
|-------------------------------|----------------------------|
| I. Lemon tree group of hotels | II. Oberoi group of hotels |
| III. Welcome group hotels | IV. Taj group hotels |

Options :

1. III, II, IV, I
2. II, III, I, IV
3. IV, II, III, I
4. I, III, II, IV

Question Number : 98 Question Id : 6232176615 Question Type : MCQ Option Shuffling : Yes Display Question Number : Yes
Single Line Question Option : No Option Orientation : Vertical

Wrong Marks : 0

In which country you will find 'Lankawi Beaches'?

Options :

1. Thailand

2. Sri Lanka

3. Malaysia

4. Indonesia

Question Number : 99 Question Id : 6232176616 Question Type : MCQ Option Shuffling : Yes Display Question Number : Yes
Single Line Question Option : No Option Orientation : Vertical
Wrong Marks : 0

Government of India conducts national level hospitality training under the ambit of

Options :

1. National Council for Hotel Management and Catering Technology.

2. Federation of Hotel and Restaurant Association of India.

3. Central Board of Vocational and Secondary Education.

4. Indian Institute of Hotel Management.

Question Number : 100 Question Id : 6232176617 Question Type : MCQ Option Shuffling : Yes Display Question Number : Yes
Single Line Question Option : No Option Orientation : Vertical
Wrong Marks : 0

If you have to travel from Singapore to Los Angeles, crossing which sea or ocean will be a shorter journey?

Options :

1. Arabian Sea

2. North China Sea

3. Pacific Ocean

4. Atlantic Ocean

Question Number : 101 Question Id : 6232176618 Question Type : MCQ Option Shuffling : Yes Display Question Number : Yes
Single Line Question Option : No Option Orientation : Vertical

Wrong Marks : 0

Identify the Indian “Café” brand originated from the State of Karnataka competing with the international coffee chains.

Options :

1. Costa Coffee

2. Coffee Café Day

3. Barista

4. Star Bucks

Question Number : 102 Question Id : 6232176619 Question Type : MCQ Option Shuffling : Yes Display Question Number : Yes
Single Line Question Option : No Option Orientation : Vertical

Wrong Marks : 0

The ancient city of Machu Picchu is in which country?

Options :

1. Peru

2. Cuba

3. Colombia

4. Venezuela

Question Number : 103 Question Id : 6232176620 Question Type : MCQ Option Shuffling : Yes Display Question Number : Yes
Single Line Question Option : No Option Orientation : Vertical

Wrong Marks : 0

What is the secondary data?

Options :

1. Data originated by the researcher for the specific purpose of addressing the research problem
2. Data collected for some purpose other than the problem at hand
3. Data collected for dealing with specific problem
4. Data compiled for certain purposes

Question Number : 104 Question Id : 6232176621 Question Type : MCQ Option Shuffling : Yes Display Question Number : Yes
 Single Line Question Option : No Option Orientation : Vertical
 Wrong Marks : 0

This consists of two lists of cities and airline codes. The candidate has to match an item in one list with an item in the other :

List – I	List – II
i. Bagdogra	1. BHJ
ii. Bhuj	2. IXR
iii. Ranchi	3. BDQ
iv. Vadodara	4. IXB

Options :

1. i-4 ii-1 iii-2 iv-3
2. i-4 ii-2 iii-3 iv-1
3. i-3 ii-4 iii-2 iv-1
4. i-1 ii-2 iii-3 iv-4

Question Number : 105 Question Id : 6232176622 Question Type : MCQ Option Shuffling : Yes Display Question Number : Yes
 Single Line Question Option : No Option Orientation : Vertical
 Wrong Marks : 0

Which of the following type of accommodation unit was opened in 1634 in USA by Samuel Coles?

Options :

1. Tavern

2. Caravan

3. Pension

4. Cabana

Question Number : 106 Question Id : 6232176623 Question Type : MCQ Option Shuffling : Yes Display Question Number : Yes
Single Line Question Option : No Option Orientation : Vertical

Wrong Marks : 0

Standard deviation is

Options :

1. The square root of the variance

2. The square root of the median

3. The square root of mode

4. The square root of dispersion

Question Number : 107 Question Id : 6232176624 Question Type : MCQ Option Shuffling : Yes Display Question Number : Yes
Single Line Question Option : No Option Orientation : Vertical

Wrong Marks : 0

Holiday Time Share concept was started by a Swiss Alexander Nettle in the year:

Options :

1. 1974

2. 1955

3. 1960

4. 1970

Question Number : 108 Question Id : 6232176625 Question Type : MCQ Option Shuffling : Yes Display Question Number : Yes
Single Line Question Option : No Option Orientation : Vertical

Wrong Marks : 0

The fares that must be purchased in advance of the departure date and require travel to originate and terminate at the same point is known as

Options :

1. Individual fare
2. Group fare
3. Excursion fare
4. Transit fare

Question Number : 109 Question Id : 6232176626 Question Type : MCQ Option Shuffling : Yes Display Question Number : Yes
Single Line Question Option : No Option Orientation : Vertical

Wrong Marks : 0

Dates representing a period of high demand, during which a particular fare is invalid

Options :

1. Booking dates
2. Valid dates
3. Back out dates
4. Invalid dates

Question Number : 110 Question Id : 6232176627 Question Type : MCQ Option Shuffling : Yes Display Question Number : Yes
Single Line Question Option : No Option Orientation : Vertical

Wrong Marks : 0

The segment of the business market that includes employees of governments, schools, hospitals etc.

Options :

1. Corporate Travel
2. Affinity Travel
3. Institutional Travel
4. All inclusive Travel

Question Number : 111 Question Id : 6232176628 Question Type : MCQ Option Shuffling : Yes Display Question Number : Yes
Single Line Question Option : No Option Orientation : Vertical

Wrong Marks : 0

A unit of measurement determined when one passenger travels miles on a transportation
by Air carrier

Options :

1. Carbon Miles
2. Passenger Kilometers
3. Passenger Mile
4. Transportation Miles

Question Number : 112 Question Id : 6232176629 Question Type : MCQ Option Shuffling : Yes Display Question Number : Yes
Single Line Question Option : No Option Orientation : Vertical

Wrong Marks : 0

Which among the following is not a 'Transcontinental' state?

Options :

1. Turkey
2. Egypt
3. Azerbaijan

4. Iran

Question Number : 113 Question Id : 6232176630 Question Type : MCQ Option Shuffling : Yes Display Question Number : Yes
Single Line Question Option : No Option Orientation : Vertical

Wrong Marks : 0

A document issued by a travel agency or vendor authorizing transportation or some other travel service to a specified person.

Options :

1. Amenities voucher
2. Miscellaneous charges order
3. Voucher
4. Saver pass

Question Number : 114 Question Id : 6232176631 Question Type : MCQ Option Shuffling : Yes Display Question Number : Yes
Single Line Question Option : No Option Orientation : Vertical

Wrong Marks : 0

Assertion (A) : Daylight saving time is advancement of standard time by one hour.

Reason (R) : All countries located in high latitudes follow daylight saving time concept.

Options :

1. Both (A) and (R) are true.
2. Both (A) and (R) are true
3. Both (A) and (R) are false
4. (A) is true, but (R) is false.

Question Number : 115 Question Id : 6232176632 Question Type : MCQ Option Shuffling : Yes Display Question Number : Yes
Single Line Question Option : No Option Orientation : Vertical

Wrong Marks : 0

Which year is considered as a benchmark for declaring a property as heritage hotel?

Options :

1. Before 1850
2. 1850
3. 1900
4. 1950

Question Number : 116 Question Id : 6232176633 Question Type : MCQ Option Shuffling : Yes Display Question Number : Yes
Single Line Question Option : No Option Orientation : Vertical

Wrong Marks : 0

This list consists of two lists of names of Sanctuaries and States, the candidate has to match an item in the List-I with Item in the other.

List – I

(Name of Sanctuary)

- a. Radhanagari
- b. Jaladpara
- c. Betla
- d. Manas

List – II

(Name of State)

1. Maharashtra
2. Assam
3. Jharkhand
4. West Bengal

Options :

1. a-1 b-4 c-3 d-2
2. a-4 b-2 c-1 d-3
3. a-3 b-2 c-1 d-4
4. a-4 b-1 c-3 d-2

Question Number : 117 Question Id : 6232176634 Question Type : MCQ Option Shuffling : Yes Display Question Number : Yes
Single Line Question Option : No Option Orientation : Vertical

Wrong Marks : 0

The Terra Cotta Warriors, 6000 life size figures, are buried with the Qin emperor at:

Options :

1. Beijing

2. Xian

3. Chongqing

4. Canton

Question Number : 118 Question Id : 6232176635 Question Type : MCQ Option Shuffling : Yes Display Question Number : Yes
Single Line Question Option : No Option Orientation : Vertical

Wrong Marks : 0

Which of the following makes the tourism plan ineffective?

Options :

1. Asset and Resource projection

2. Unattainable goals and objectives

3. Labour availability studies

4. Community asset and resource inventories

Question Number : 119 Question Id : 6232176636 Question Type : MCQ Option Shuffling : Yes Display Question Number : Yes
Single Line Question Option : No Option Orientation : Vertical

Wrong Marks : 0

Tourism Planning in India occurs at:

Options :

1. State level

2. National level

3. Local and Regional level

4. State and National level

Question Number : 120 Question Id : 6232176637 Question Type : MCQ Option Shuffling : Yes Display Question Number : Yes
Single Line Question Option : No Option Orientation : Vertical

Wrong Marks : 0

Research approach described for tourism is:

Options :

1. Tenacity, Authority, Intuition, Science
2. Formulation, Review, Definition, Selection
3. Social, Personal, Methodological, Modelling
4. Description, Testing, Prediction and Modelling

Question Number : 121 Question Id : 6232176638 Question Type : MCQ Option Shuffling : Yes Display Question Number : Yes
Single Line Question Option : No Option Orientation : Vertical

Wrong Marks : 0

Assertion (A) : Applied research focuses on new problems or on developing new approaches to the old problems.

Reason (R) : The research process always proceeds from one step to another.

Options :

1. Both (A) and (R) are false
2. Both (A) and (R) are true
3. (A) is true, but (R) is false
4. (A) is false, but (R) is true

Question Number : 122 Question Id : 6232176639 Question Type : MCQ Option Shuffling : Yes Display Question Number : Yes
Single Line Question Option : No Option Orientation : Vertical

Wrong Marks : 0

“Bamabodhini Patrika” a journal was started by Keshav Chandra Sen

Options :

1. to give up caste names
2. to encourage inter cast marriages
3. to discourage child marriages
4. to uplift women

Question Number : 123 Question Id : 6232176640 Question Type : MCQ Option Shuffling : Yes Display Question Number : Yes
Single Line Question Option : No Option Orientation : Vertical

Wrong Marks : 0

Arrange the following organizations in order which they are formed. Use the code given below:

(I) Deva Samaj (II) Arya Samaj (III) PrarthanaSamaj (IV) Brahmo Samaj

Options :

1. (II), (III), (I), (IV)
2. (III), (IV), (II), (I)
3. (IV), (III), (I), (II)
4. (IV), (III), (II), (I)

Question Number : 124 Question Id : 6232176641 Question Type : MCQ Option Shuffling : Yes Display Question Number : Yes
Single Line Question Option : No Option Orientation : Vertical

Wrong Marks : 0

Match the following:

List - I

(Organizations)

(a) ASTA

(b) UFTAA

(c) WATA

(d) PATA

List - II

(Countries)

(i) Rome

(ii) New York

(iii) San Francisco

(iv) Geneva

Options :

1. a-iii b-ii c-i d-iv

2. a-ii b-i c-iii d-iv

3. a-ii b-i c-iv d-iii

4. a-iii b-iv c-i d-ii

Question Number : 125 Question Id : 6232176642 Question Type : MCQ Option Shuffling : Yes Display Question Number : Yes
Single Line Question Option : No Option Orientation : Vertical

Wrong Marks : 0

A document issued by a travel agency or vendor authorizing transportation or some other travel service to a specified person.

Options :

1. Amenities voucher

2. Miscellaneous charges order

3. Voucher

4. Saver pass

Question Number : 126 Question Id : 6232176643 Question Type : MCQ Option Shuffling : Yes Display Question Number : Yes
Single Line Question Option : No Option Orientation : Vertical

Wrong Marks : 0

Which one of the following is scheduled method?

Options :

1. Self administered
2. Online survey
3. Mail Survey
4. Administered by enumerator

Question Number : 127 Question Id : 6232176644 Question Type : MCQ Option Shuffling : Yes Display Question Number : Yes
Single Line Question Option : No Option Orientation : Vertical

Wrong Marks : 0

When a firm seeks a new market with a completely new product is known as:

Options :

1. Market Penetration
2. Market Development
3. Product Development
4. Diversification

Question Number : 128 Question Id : 6232176645 Question Type : MCQ Option Shuffling : Yes Display Question Number : Yes
Single Line Question Option : No Option Orientation : Vertical

Wrong Marks : 0

“Chandratal Lake” is in

Options :

1. Uttrakhand
2. Jammu and Kashmir
3. Himachal Pradesh

Orissa

4.

Question Number : 129 Question Id : 6232176646 Question Type : MCQ Option Shuffling : Yes Display Question Number : Yes
Single Line Question Option : No Option Orientation : Vertical

Wrong Marks : 0

Which of the following is not a South East Asian country?

Options :

Brunei

1.

Moldova

2.

East Timor

3.

Laos

4.

Question Number : 130 Question Id : 6232176647 Question Type : MCQ Option Shuffling : Yes Display Question Number : Yes
Single Line Question Option : No Option Orientation : Vertical

Wrong Marks : 0

Which one of the following is correctly stated ?

Options :

Carrying capacity is measured on the basis of expectation of visitors.

1.

Carrying capacity is measured on the basis of the perception of the visitors.

2.

Carrying capacity is carried out on the basis of facilities and amenities.

3.

Carrying capacity is estimated by taking into tourist foot falls.

4.

Question Number : 131 Question Id : 6232176648 Question Type : MCQ Option Shuffling : Yes Display Question Number : Yes
Single Line Question Option : No Option Orientation : Vertical

Wrong Marks : 0

Which of the following is a South East Asian city?

Options :

1. Dili

2. Reykjavik

3. Riga

4. Dakar

Question Number : 132 Question Id : 6232176649 Question Type : MCQ Option Shuffling : Yes Display Question Number : Yes
Single Line Question Option : No Option Orientation : Vertical

Wrong Marks : 0

Indian Tobacco Company, a fortune 500 Company has its diversified interest in

Options :

1. Tobacco and real estates

2. Hotels and agri products

3. Automobiles and Heavy industry

4. Travel and tour operations

Question Number : 133 Question Id : 6232176650 Question Type : MCQ Option Shuffling : Yes Display Question Number : Yes
Single Line Question Option : No Option Orientation : Vertical

Wrong Marks : 0

Before 'Naypyidaw', which was the capital city of Myanmar?

Options :

1. Myeik

2. Bago

3. Yangon

4. Manila

Question Number : 134 Question Id : 6232176651 Question Type : MCQ Option Shuffling : Yes Display Question Number : Yes
Single Line Question Option : No Option Orientation : Vertical

Wrong Marks : 0

Which one of the following is not a technique for demand forecasting ?

Options :

1. Delphi technique
2. ARIMA Model
3. Exponential Smoothing
4. Chi-Square analysis

Question Number : 135 Question Id : 6232176652 Question Type : MCQ Option Shuffling : Yes Display Question Number : Yes
Single Line Question Option : No Option Orientation : Vertical

Wrong Marks : 0

Which one of the following is not a scaling technique ?

Options :

1. Arbitrary Scales
2. Summated Scales
3. Narrated Scales
4. Thurstone Scales

Question Number : 136 Question Id : 6232176653 Question Type : MCQ Option Shuffling : Yes Display Question Number : Yes
Single Line Question Option : No Option Orientation : Vertical

Wrong Marks : 0

Assertion (A) : Trident hotel and Ginger hotel are the budget category hotels belonged to two major chains.

Reason (R) : To provide wide range of room inventory for tourists.

Options :

1. (A) is correct, but (R) is wrong.

2. Both (A) and (R) are correct.

3. (A) is wrong, but (R) is correct.

4. Both (A) and (R) are wrong.

Question Number : 137 Question Id : 6232176654 Question Type : MCQ Option Shuffling : Yes Display Question Number : Yes
Single Line Question Option : No Option Orientation : Vertical

Wrong Marks : 0

The statement of hypothesis is framed in the form of one of the following :

Options :

1. Interrogative

2. Declarative

3. Assertive

4. Conclusive

Question Number : 138 Question Id : 6232176655 Question Type : MCQ Option Shuffling : Yes Display Question Number : Yes
Single Line Question Option : No Option Orientation : Vertical

Wrong Marks : 0

Assertion (A) : Dhavaleswaram near Rajahmundry stands an ancient dam built by Sir Arthur Cotton, a Scottish engineer.

Reason (R) : He has pioneered a sort of “Green Revolution” which transformed Rajahmundry into a “Rice Bowl” of Andhra.

Options :

1. Both (A) and (R) are true.

2. Both (A) and (R) are false

3. (A) is true, but (R) is false.

4. (A) is false, but (R) is true.

Question Number : 139 Question Id : 6232176656 Question Type : MCQ Option Shuffling : Yes Display Question Number : Yes
Single Line Question Option : No Option Orientation : Vertical

Wrong Marks : 0

The Lion Capital of Sarnath with a logo: “*Satyameva Jayate*” (Truth Triumphs) is adopted by the Republic of India as a National symbol, is located in

Options :

1. Himachal Pradesh

2. Uttar Pradesh

3. Andhra Pradesh

4. Jammu and Kashmir

Question Number : 140 Question Id : 6232176657 Question Type : MCQ Option Shuffling : Yes Display Question Number : Yes
Single Line Question Option : No Option Orientation : Vertical

Wrong Marks : 0

Which State of India has celebrated the year 2010 as “Year of Tourism”

Options :

1. Madhya Pradesh

2. Kerala

3. Sikkim

4. Manipur

Question Number : 141 Question Id : 6232176658 Question Type : MCQ Option Shuffling : Yes Display Question Number : Yes
Single Line Question Option : No Option Orientation : Vertical

Wrong Marks : 0

The IUOTO was transformed into WTO in the year

Options :

1. 1974

2. 1975

3. 1976

4. 1977

Question Number : 142 Question Id : 6232176659 Question Type : MCQ Option Shuffling : Yes Display Question Number : Yes
Single Line Question Option : No Option Orientation : Vertical

Wrong Marks : 0

Identify the three Letter City Code for Port Blair.

Options :

1. P R T

2. P B R

3. I X Z

4. X Y Z

Question Number : 143 Question Id : 6232176660 Question Type : MCQ Option Shuffling : Yes Display Question Number : Yes
Single Line Question Option : No Option Orientation : Vertical

Wrong Marks : 0

Which one of the following is correctly stated ?

Options :

1. Hawa Mahal is in Jodhpur.

2. Lake Palace is in Darjeeling.

3. Charminar is in Golconda.

4. Prince Albert Museum is in Jaipur.

Question Number : 144 Question Id : 6232176661 Question Type : MCQ Option Shuffling : Yes Display Question Number : Yes
Single Line Question Option : No Option Orientation : Vertical

Wrong Marks : 0

Which one of the following temples has the longest Corridor ?

Options :

1. Sri Meenakshi temple, Madurai.
2. Sri Ramanatha Swamy temple, Rameshwaram.
3. Sriranganatha Swami temple, Srirangam.
4. Sri Brihadhisvara temple, Thanjavur.

Question Number : 145 Question Id : 6232176662 Question Type : MCQ Option Shuffling : Yes Display Question Number : Yes
Single Line Question Option : No Option Orientation : Vertical

Wrong Marks : 0

Choose the country that does not come under the TC III of IATA.

Options :

1. Maldives.
2. Marshallian Islands
3. New Zealand
4. Madagascar

Question Number : 146 Question Id : 6232176663 Question Type : MCQ Option Shuffling : Yes Display Question Number : Yes
Single Line Question Option : No Option Orientation : Vertical

Wrong Marks : 0

Identify the correct order in which they are used for Research Analysis.

Options :

1. Data collection – Questionnaire Design – Pilot Survey – Analysis & Theorizing.
2. Pilot survey-Questionnaire Design – Data collection – Analysis & Theorizing.

3. Questionnaire Design – Data collection – Analysis & Theorizing – Pilot Survey.

4. Analysis & Theorizing – Questionnaire Design – Data Collection – Pilot Survey.

Question Number : 147 Question Id : 6232176664 Question Type : MCQ Option Shuffling : Yes Display Question Number : Yes
Single Line Question Option : No Option Orientation : Vertical

Wrong Marks : 0

American Plan refers to

Options :

1. Daily meals included with room rates

2. Three meals a day

3. Only Breakfast

4. Only Dinner

Question Number : 148 Question Id : 6232176665 Question Type : MCQ Option Shuffling : Yes Display Question Number : Yes
Single Line Question Option : No Option Orientation : Vertical

Wrong Marks : 0

The nearest airport to Thimphu is located at

Options :

1. Bagdogra

2. Kolkata

3. Gauwahati

4. Darjeeling

Question Number : 149 Question Id : 6232176666 Question Type : MCQ Option Shuffling : Yes Display Question Number : Yes
Single Line Question Option : No Option Orientation : Vertical

Wrong Marks : 0

The first sermon delivered by Gautam Buddha after attaining the enlightenment was

Options :

1. Bodh Gaya.

2. Kapil Vastu

3. Sarnath

4. Kushinagar

Question Number : 150 Question Id : 6232176667 Question Type : MCQ Option Shuffling : Yes Display Question Number : Yes
Single Line Question Option : No Option Orientation : Vertical

Wrong Marks : 0

Name the South Indian temple which celebrated its 1000th year

Options :

1. Meenakshi temple

2. Sri Venkateshwara temple

3. Brihadhishwara temple

4. Ramanath Swamy temple

Question Number : 151 Question Id : 6232176668 Question Type : MCQ Option Shuffling : Yes Display Question Number : Yes
Single Line Question Option : No Option Orientation : Vertical

Wrong Marks : 0

The Petronas Twin Towers, one of tallest building in the world is a major tourist attraction
of.....

Options :

1. Singapore

2. Thailand

3. Malaysia

4. Philippines

Question Number : 152 Question Id : 6232176669 Question Type : MCQ Option Shuffling : Yes Display Question Number : Yes
Single Line Question Option : No Option Orientation : Vertical

Wrong Marks : 0

Temple of the Reclining Buddha (Wat Pho) is an important attraction of city
sightseeing tour.

Options :

1. Kuala Lumpur

2. Bangkok

3. Singapore

4. Manila

Question Number : 153 Question Id : 6232176670 Question Type : MCQ Option Shuffling : Yes Display Question Number : Yes
Single Line Question Option : No Option Orientation : Vertical

Wrong Marks : 0

Which one of the following is the oldest national park in India ?

Options :

1. Kanha.

2. Manas.

3. Gir National Park

4. Jim Corbett

Question Number : 154 Question Id : 6232176671 Question Type : MCQ Option Shuffling : Yes Display Question Number : Yes
Single Line Question Option : No Option Orientation : Vertical

Wrong Marks : 0

Which of the following is top tourist destination in terms of international tourist
arrivals ?

Options :

1. France
2. U.S.A.
3. Spain
4. Switzerland

Question Number : 155 Question Id : 6232176672 Question Type : MCQ Option Shuffling : Yes Display Question Number : Yes
Single Line Question Option : No Option Orientation : Vertical
Wrong Marks : 0

This consists of two lists of names of cuisines and the region connected, the candidate has to match an item in one list with an item in the other :

List – I (Cuisines)	List – II (Regions)
i. Chettinadu	1. Karnataka
ii. Udipi	2. Karaikudi
iii. Moppila	3. Malabar
iv. Awadh	4. Lucknow

Options :

1. i-1 ii-2 iii-3 iv-4
2. i-3 ii-4 iii-2 iv-1
3. i-2 ii-1 iii-3 iv-4
4. i-4 ii-3 iii-1 iv-2

Question Number : 156 Question Id : 6232176673 Question Type : MCQ Option Shuffling : Yes Display Question Number : Yes
Single Line Question Option : No Option Orientation : Vertical
Wrong Marks : 0

Identify the creation of Rahul Sanskritayan.

Options :

1. Athowa Ghumakkarh Shashtra

2. Mahabhashya

3. Rajatarangini

4. Brihad Samhita

Question Number : 157 Question Id : 6232176674 Question Type : MCQ Option Shuffling : Yes Display Question Number : Yes
Single Line Question Option : No Option Orientation : Vertical

Wrong Marks : 0

Dachigam is known for

Options :

1. Indian Elephant

2. Spotted Deer

3. Asiatic Lion

4. Kashmir Hangul

Question Number : 158 Question Id : 6232176675 Question Type : MCQ Option Shuffling : Yes Display Question Number : Yes
Single Line Question Option : No Option Orientation : Vertical

Wrong Marks : 0

The tomb of Akbar is situated at

Options :

1. Fatehpur-Sikri

2. Ajmer

3. Sikandara

4. Delhi

Question Number : 159 Question Id : 6232176676 Question Type : MCQ Option Shuffling : Yes Display Question Number : Yes
Single Line Question Option : No Option Orientation : Vertical

Wrong Marks : 0

Hemkund Sahib-the famous Sikh shrine is located in

Options :

1. Punjab
2. Haryana
3. Uttarakhand
4. Himachal

Question Number : 160 Question Id : 6232176677 Question Type : MCQ Option Shuffling : Yes Display Question Number : Yes
Single Line Question Option : No Option Orientation : Vertical

Wrong Marks : 0

Arrange the following in chronological order:

- | | |
|-------------------------|-----------------|
| (i) Qutab Minar | (ii) Taj Mahal |
| (iii) Red Fort of Delhi | (iv) India Gate |

Options :

1. (ii) (i) (iv) (iii)
2. (i) (ii) (iii) (iv)
3. (iii) (ii) (i) (iv)
4. (iv) (i) (iii) (ii)

Question Number : 161 Question Id : 6232176678 Question Type : MCQ Option Shuffling : Yes Display Question Number : Yes
Single Line Question Option : No Option Orientation : Vertical

Wrong Marks : 0

Where is the highest Golf Course in the world located?

Options :

1. Darjeeling

2. Gulmarg

3. Almora

4. Nainital

Question Number : 162 Question Id : 6232176679 Question Type : MCQ Option Shuffling : Yes Display Question Number : Yes
Single Line Question Option : No Option Orientation : Vertical

Wrong Marks : 0

What is sagarmatha?

Options :

1. National Park

2. Brahamaputra river

3. An Island

4. Mount Everest

Question Number : 163 Question Id : 6232176680 Question Type : MCQ Option Shuffling : Yes Display Question Number : Yes
Single Line Question Option : No Option Orientation : Vertical

Wrong Marks : 0

The tomb of Akbar is situated at

Options :

1. Fatehpur-Sikri

2. Ajmer

3. Sikandara

4. Delhi

Question Number : 164 Question Id : 6232176681 Question Type : MCQ Option Shuffling : Yes Display Question Number : Yes
Single Line Question Option : No Option Orientation : Vertical

Wrong Marks : 0

We have four major types of tourists. Identify the correct order in which they appeared in the world :

Options :

1. The explorer, the individual mass tourist, the drifter, the organised mass tourist
2. The drifter, the explorer, the individual mass tourist, the organised mass tourist
3. The drifter, the individual mass tourist, the explorer, the organised mass tourist
4. The individual mass tourist, the drifter, the explorer, the organised mass tourist

Question Number : 165 Question Id : 6232176682 Question Type : MCQ Option Shuffling : Yes Display Question Number : Yes
Single Line Question Option : No Option Orientation : Vertical

Wrong Marks : 0

Identify the sequence of the organisational set up of the Department of Tourism in descending order :

- | | |
|------------------------------|----------------------------------|
| (i) Director | (ii) Regional Director |
| (iii) Joint Director General | (iv) Additional Director General |

Options :

1. (i), (ii), (iii), (iv)
2. (iv), (iii), (ii), (i)
3. (ii), (iii), (iv), (i)
4. (ii), (iv), (iii), (i)

Question Number : 166 Question Id : 6232176683 Question Type : MCQ Option Shuffling : Yes Display Question Number : Yes
Single Line Question Option : No Option Orientation : Vertical

Wrong Marks : 0

Who created the world's largest theme park ?

Options :

1. Walt Disney
2. Steven Spielberg
3. Sir Freddie Laker
4. Thomas Cook

Question Number : 167 Question Id : 6232176684 Question Type : MCQ Option Shuffling : Yes Display Question Number : Yes
Single Line Question Option : No Option Orientation : Vertical

Wrong Marks : 0

Match the countries and National Park :

- | | |
|--------------------|-----------------|
| (i) Chitwan | (a) Tanzania |
| (ii) Mt. Cook | (b) New Zealand |
| (iii) Wood Buffalo | (c) Nepal |
| (iv) Serengeti | (d) Canada |

Options :

1. i-c ii-d iii-a iv-b
2. i-c ii-b iii-d iv-a
3. i-a ii-d iii-c iv-b
4. i-a ii-b iii-c iv-d

Question Number : 168 Question Id : 6232176685 Question Type : MCQ Option Shuffling : Yes Display Question Number : Yes
Single Line Question Option : No Option Orientation : Vertical

Wrong Marks : 0

One of the following letters is not used as code in fare types.

Options :

1. J for Business Class Premium

2. C for Business Class

3. Y for Economy Class

4. B for Budget Class

Question Number : 169 Question Id : 6232176686 Question Type : MCQ Option Shuffling : Yes Display Question Number : Yes
Single Line Question Option : No Option Orientation : Vertical
Wrong Marks : 0

Arrange the following in systematic order.

- | | |
|----------------|----------------|
| (i) Recruiting | (ii) Orienting |
| (iii) Training | (iv) Selecting |

Options :

1. (i) (iv) (ii) (iii)

2. (ii) (i) (iv) (iii)

3. (i) (iv) (iii) (ii)

4. (iv) (i) (iii) (ii)

Question Number : 170 Question Id : 6232176687 Question Type : MCQ Option Shuffling : Yes Display Question Number : Yes
Single Line Question Option : No Option Orientation : Vertical
Wrong Marks : 0

“Gurpurab” is one of the most important festivals of the Sikhs, and celebrated in Nankanasahib the birth place of

Options :

1. Gurugovind Singh

2. Guru Arjun Singh

3. Guru Nanak

4. Guru Tej Bahadur

Question Number : 171 Question Id : 6232176688 Question Type : MCQ Option Shuffling : Yes Display Question Number : Yes
Single Line Question Option : No Option Orientation : Vertical

Wrong Marks : 0

Which of the following does not stand among top six tourist destination countries of the world ?

Options :

1. France

2. China

3. Italy

4. Switzerland

Question Number : 172 Question Id : 6232176689 Question Type : MCQ Option Shuffling : Yes Display Question Number : Yes
Single Line Question Option : No Option Orientation : Vertical

Wrong Marks : 0

Which of the following organisations decides the classification of one to three star hotel property :

Options :

1. Department of Tourism, Govt. of India

2. FHRAI

3. State Tourism Department

4. ITDC

Question Number : 173 Question Id : 6232176690 Question Type : MCQ Option Shuffling : Yes Display Question Number : Yes
Single Line Question Option : No Option Orientation : Vertical

Wrong Marks : 0

The commercial jet air travel was pioneered by Great Britain in the year:

Options :

1. 1942
2. 1952
3. 1962
4. 1972

Question Number : 174 Question Id : 6232176691 Question Type : MCQ Option Shuffling : Yes Display Question Number : Yes
Single Line Question Option : No Option Orientation : Vertical

Wrong Marks : 0

IATA has divided the World into how many traffic areas :

Options :

1. Nine
2. Six
3. Five
4. Three

Question Number : 175 Question Id : 6232176692 Question Type : MCQ Option Shuffling : Yes Display Question Number : Yes
Single Line Question Option : No Option Orientation : Vertical

Wrong Marks : 0

Which one of the following theories is not aimed at explaining motivation ?

Options :

1. Maslow's theory
2. Path goal theory
3. Vrooms theory

ERG theory

4.

Question Number : 176 Question Id : 6232176693 Question Type : MCQ Option Shuffling : Yes Display Question Number : Yes
Single Line Question Option : No Option Orientation : Vertical

Wrong Marks : 0

Who is the father of Human Relation Approach ?

Options :

1. F.W. Taylor

2. Henry Fayol

3. Elton Mayo

4. Peter F. Drucken

Question Number : 177 Question Id : 6232176694 Question Type : MCQ Option Shuffling : Yes Display Question Number : Yes
Single Line Question Option : No Option Orientation : Vertical

Wrong Marks : 0

Statistical techniques for separating objects into a specified number of mutually exclusive group in such a way that the groups are relatively homogeneous, is known as

Options :

1. Factor Analysis

2. Conjoint Analysis

3. Cluster Analysis

4. Discriminant Analysis

Question Number : 178 Question Id : 6232176695 Question Type : MCQ Option Shuffling : Yes Display Question Number : Yes
Single Line Question Option : No Option Orientation : Vertical

Wrong Marks : 0

Which of the following is not correct?

Options :

1. Economic Resources = Claims of Creditors + Claims of Owners.

2. Assets = Liabilities + Owner's Equity.

3. Net Income = Revenue – Expenses.

4. Owner's Equity = Assets + Liabilities

Question Number : 179 Question Id : 6232176696 Question Type : MCQ Option Shuffling : Yes Display Question Number : Yes
Single Line Question Option : No Option Orientation : Vertical

Wrong Marks : 0

Govt. of India introduced international flights in 2003 for Singapore from which of the following town :

Options :

1. Ahmedabad

2. Jaipur

3. Lucknow

4. Bhubneshwar

Question Number : 180 Question Id : 6232176697 Question Type : MCQ Option Shuffling : Yes Display Question Number : Yes
Single Line Question Option : No Option Orientation : Vertical

Wrong Marks : 0

In Tourism industry which one of the following describe the relationship between demand and supply better.

Options :

1. Stable demand and flexible supply

2. Volatile demand and flexible supply

3. Volatile demand and fixed supply

4. Stable demand and fixed supply